

Summer Vacations Homework 2020

Class : Four

Cantt Public Education System

A NEW FRONTIER IN LEARNING

Dear Students,

We hope that you and your families are keeping well during ongoing health crises. It is more and more likely that schools may not open till July 2020. Therefore, we are pleased to share our plans for online instructions and homework activities.

As of 1st June 20, we will be starting a robust, interactive teaching programme. The curriculum will be taught through various online platforms, video lectures and live interaction with teachers as well as carefully designed homework, which all students will complete at their own time. We shall pursue following timetable:-

Group	Days	Timings	Subjects	Remarks
I	Monday	0900 - 0940	English	Principals shall ensure availability of subject teachers to students for coaching/clarification of doubts etc
	Tuesday	1000 - 1040	Urdu	
	Wednesday	1100 - 1140	Science	
		1200 -1240	G.K.	
II	Thursday	0900 - 0940	Maths	
	Friday	1000 - 1040	S Studies	
		1100 - 1140	Computer	
	Saturday	1200 -1240	Islamiat/Naazra	

Beloved scholars, home work for following subjects has been included in this booklet:-

Sr.#	Subject	Pages	
		From	To
1	English	02	18
2	Maths	19	28
3	Science	29	38
4	Computers	39	55
5	Social Studies	56	76
6	Islamiat	77	85
7	Urdu	86	101
8	General Knowledge	102	138

Our main objective is to keep you in touch with your studies rather than to put you under unjustified burden. Therefore, a pragmatic program has been planned for your educational progression. Stay home, stay safe and stay connected with your studies.

Regards,

English

Week 1: Day 1

Lesson# 01

Topic: Writing an email

1. Listen to your teacher and find these words. Then listen and repeat. (on book)

- a. We have **crab** in picture 1
- b. In picture 2, we have **beach**.
- c. **Whale** is shown in picture 3.
- d. **Bay** is shown in picture 4.
- e. **Seabed** is shown in picture 5.
- f. **Shark** is in picture 6.
- g. **Coast** is in picture 7.
- h. **Shellfish** in picture 8.

2. Sort the words from Ex 1 into two groups as shown below. (on book)

Example:

- a) **Places:** beach, bay, seabed, coast
- b) **Living things:** crab, whale, shark, shellfish.

3. Use the words from Ex 1 to complete this story. (on book)

Last Saturday, we went whale-watching.

Every September, these huge creatures swim along this part of the coast. We saw three large groups of whales. At lunchtime, we sailed back to the coast and stopped in a bay and has our picnic on the beach.

For lunch, we had shellfish. After lunch we hunted for crabs in the rock-pools. They move very fast! We caught about twenty-five. When we were climbing back onto the boat, my watch fell off. It sank and ended up on the seabed. I wanted to dive to get it, but the Captain said, 'Don't swim here! There's a shark swimming in the bay.' So I never got my watch back.

4. Phonics: 'ea' and 'oa' sounds. Sort the words in the box into two groups as shown below. (on book)

beach boat coast dream load mean peach reach road seat stream team

Grammar:

Part of Speech	Function or "job"	Example words	Example Sentences
Noun	Thing or person	Pen, dog, work, music, town, London, Pakistan, teacher, Ahmed, Wah Cantt	This is my dog . He lives in my house . We live in Wah Cantt .

Worksheet:

Name: _____

Noun Test

- I. What is a noun?
 - a. action word
 - b. describing word
 - c. person, place, or thing
2. Circle the nouns in the sentence below:
The dog ran through the mud with his bone.
3. The word "library" is a:
 - a. person
 - b. place
 - c. thing
4. Write 3 nouns that name a place:
1. _____ 2. _____ 3. _____
5. Write 3 nouns that name a person:
1. _____ 2. _____ 3. _____
6. Write 3 nouns that name a thing:
1. _____ 2. _____ 3. _____
7. Circle the nouns in the sentence below:
Sam and Molly went to the bank to get money.

8. The word "flower" is a
 - a. person
 - b. place
 - c. thing
9. The word "woman" is a
 - a. person
 - b. place
 - c. thing
10. Circle the nouns in the sentence below:
Birds fly from tree to tree.

- II. Put the following nouns in the correct column on the chart below:

dog car store girl baby school
 teacher bank bear toys park
 juice airport window nurse

PERSON	Place	Thing

Day 2**Lesson 3: Comprehension**

Q1. Write meanings of the following words. (In notebook)

1. Marsh
2. vines
3. cub
4. hunt
5. instead
6. clever

Read the text given on page # 02 and answer the following Questions

- Q 1.** How far is the sunken ship from the boat?
- Q 2.** What do Dave and Jack used to find the sunken ship?
- Q 3.** Why is it hard for Jack to fight the octopus?
- Q 4.** What does Jack breath through?

Grammar:

Part of Speech	Function or "job"	Example words	Example Sentences
Verb	Action or state	(to) be, have, do, like, work, sing, can, must	This is my dog. He lives in my house. I like him very much.

Circling Action Verbs Worksheet

An action verb is a word that shows either physical or mental action.

Directions: Circle the action verb in each sentence. Then write it on the line provided.

Example A- Tom ran to the store.

Answer- Tom (ran) to the store. / ran

1. I will write on my worksheet.

2. We led our friends down the hall.

3. She passed the ball to her friend.

4. The man jumped off the ladder.

5. The parents cheered for their son.

Day 3

Lesson

4:

Sentences

Lesson 4 on Pg no 6

Do it on neat notebook

1. sentence making.

- There is a shark swimming in the bay.
- There are some words flying over the water.
- There are two girls playing under the tree.
- There is a man sleeping on the beach.
- There are some children hopping near the late.

2. Make sentences for the pictures using phrases.

- there are students painting in the class room.
- There are boys exercising out-side the school.
- The siblings are buying ice-cream in the street.

- There are some boys playing football in the ground.
- The girls are playing in the park.

2. Use- ing following the rules .

Add ing	Drop "e" and add ing	Double consonant and add ing	ie to y + ing
Crying	Dancing	Hopping	Dying

Grammar: Figure of speech

Watch the video carefully and write down any three figures of speech with definition and example.

<https://www.youtube.com/watch?v=erT5bXhx25Q>

Part of Speech	Function or "job"	Example words	Example Sentences
Adjective	Describe a noun	Good, big, red, well, interesting	My dogs are big . This story is interesting .

Worksheet:

Adjectives that Tell What Kind Worksheet

- An adjective is a word that describes a noun.
- Adjectives can describe *what kind of* person, place or thing.

The hungry bear trotted through the woods.

adjective = hungry
hungry tells *what kind of* bear

Underline the adjective in each sentence. Then, write the noun the adjective describes on the line.

1. Caroline cleaned her dirty room. _____
2. The painting was beautiful! _____
3. Daniel and his mother ate shortbread cookies. _____
4. I walked up the stairs of the old building. _____
5. Can you sing a soothing song? _____
6. Don't forget to bring your delicious lunch! _____
7. We made a glass vase in class. _____
8. Her brother forgot his plaid shirt. _____
9. Pete's naughty dog chewed his shoe. _____
10. Lincoln squinted as he looked at the bright sun. _____
11. The funny clown juggled and told jokes. _____
12. My sleepy friend fell asleep in class! _____

Week 2 Day 1

Lesson# 02

Topic: Earth watch

GRAMMAR (in notebook)

MUST AND SHOULD

Uses of MUST

- It is an obligation or command.
- It shows certainty about something.
- It is strong recommendation.

Uses of SHOULD

- It gives advices or make recommendations.
- It is not an obligation, but talk about obligation
- It shows probability or expectation about something
- It expresses conditions.

Difference between Must and Should

Must is used to express obligation or unavoidable requirements, whereas Should is more of a recommendation or simply a desirable goal.

Examples:

MUST

1. Sara must abide by the law.
2. Asif must perform his duty.
3. You must wear sweater in cold.

Should

1. You should take steam in flu.
2. Sajida should prepare lunch for the trip.
3. Khalida should be very conscious in her new class.

Do Ex 1 on Pg 9 on book

Answers: shouldn't, should, shouldn't, should, should, shouldn't, should, shouldn't, should, shouldn't.

Grammar:

Part of Speech	Function or "job"	Example words	Example Sentences
Pronoun	Replaces a noun	I, you, he, she, some	Sara is my friend. She is beautiful.

Worksheet:

Choose the correct pronoun and write it on the line.

He She It They

1. _____ is a palm tree.



2. _____ play in the hay.



3. _____ can make pancakes.



4. _____ go to school together.



5. _____ has a big hat.



6. The elephant will not get wet.
_____ has a red umbrella.



7. _____ is a doctor.



8. _____ likes to ride the bike.



9. _____ keep the garden clean together.



Day 2

Lesson# 03

Topic: Earth watch

Use dictionary and Write meaning of words given bellow.

earth watch ,mend, beat, wild life, ape, dig ,protect, conserve, litter, expedition

Grammar:

Part of Speech	Function or "job"	Example words	Example Sentences
Adverb	Describe a verb, adjective or adverb	Quickly, silently, well, badly, very, really	My dog eats quickly . When he is very hungry, he eats really quickly.

Examples of Adverb:

The following are some examples of adverbs:

-ly adverbs	Where adverbs	When adverbs	Extent adverbs
quickly	here	now	very
slowly	there	first	too
truthfully	everywhere	last	almost
beautifully	somewhere	early	also
abruptly	in	yesterday	only
endlessly	inside	tomorrow	enough
lightly	outside	later	so
slowly	out	regularly	quite
delicately	underground	often	almost
sloppily	upstairs	never	rather
randomly	downstairs	usually	much
neatly	under	always	instead
expertly	around	soon	beyond

Worksheet:

Adverbs are words or phrases that **modify a verb**, adverb or adjective.
Adverbs express a relation of place, time, manner or degree.

swiftly	brightly	bravely
quickly	softly	cautiously
carefully	peacefully	strangely

Use an adverb from the box to complete each sentence.

1. The stars shined _____ in the sky.
2. He _____ confronted the dragon.
3. We went _____ to the store.
4. We _____ picked up the broken glass.
5. He _____ climbed down from the tree.
6. She looked at us _____.
7. She _____ dropped her coat.
8. We _____ sat around the campfire.

Day 3**Lesson# 03****Topic: Earth watch**

Read the passages again and answer these questions.

Note: Write answers of Text 2 by yourself.

Text 1-Q/A

1. Why do you think Elaine and her husband live in the forest?
2. Why do hunters kill the apes?
3. Why is Elaine bottle-feeding Titch?

Week 3 - Day 1

Lesson # 04

Topic: Earth watch

Lesson no 4 on pg. 12. (ON BOOK) Sentences

1) Dan and Jack are going on a school expedition to Slad National Park with their teacher.

Listen to your teacher and underline the correct phrases as shown below.

Put the verb in brackets in to the present Continuous tense.

Tomorrow, we (**go**) are going to Slad National Park to play /for the day. We (**leave**) at 8:00/8:30 in the morning from the school car park/park. First, we are going to drive/ride to Slad. At the park Centre, we (**meet**) our guide Laurel/Paula at the park center at ten/twelve o'clock. We are going to watch a video and buy some maps. Then we (**go**) for a walk/talk. We are going to have a picnic in the hills. We (**leave**) Slad at five/six o'clock. We (**arrive**) home in time/tired for supper.

Must/ mustn't; should/shouldn't

STUDY CORNER	Shouldn't versus mustn't You mustn't leave litter in the national park. You must take it away with you. You should take a bottle of water. You shouldn't wear new boots.	(Strictly forbidden) (Strictly instructed) (Strongly recommended) (Not recommended)
---------------------	--	--

2) choose should or mustExample: your teacher said you must buy an entry ticket at a park entrance

1. I think you should carry on a raincoat with you.
2. remember, you must follow the guides introduction.
3. I think you should pack a water bottle in your bag.
4. Don't forget you must take your litter away with you.
5. I think you should take your mobile with you when you go walking.

3) Choose shouldn't or mustn't.

1. you mustn't leave litter anywhere.
2. you mustn't drink water from the streams.
3. you mustn't pick any flowers in a national park.
4. you shouldn't light fires.
5. you shouldn't climb cliffs.

Day 2

Lesson # 05 (ON BOOK)

1) Mr. Burki has designed a rainwater storage system for villages without tap water.

Find the pictures below to match these statements.

1. The tank keeps all the water and clean. **D**
2. Rainwater runs off the roof and flows through a pipe into a tank on the ground. **C**
3. They make the tanks with cement. **D**
4. Villagers build the storage system themselves. They use cheap local material. **A**

5. If there is no storage system, the monsoon rain runs into the ground. **B**
 6. A cement tank can hold enough water for all the family needs. **D**

2) Listen to your teachers report on the water storage system and complete the report, using Phrases from Ex. 1.

1. I live in a small village. Before, we never had enough water.
2. In the monsoon season, the rain runs into the ground.
3. One day, Mr Burki came to our village. He said we should build storage system.
4. So, my father (make) made the roof.
5. My uncle (put) put cement tank.
6. Now we have enough water.
7. The animals cannot (get/make) make it dirty.

Grammar: Tenses

Watch this video and learn the tenses. https://www.youtube.com/watch?v=3II3R9_Z1HY

Present indefinite tense (Explanation with example)

Definition:The present indefinite tense, also known as simple present tense, denotes a stative or habitual or eternally true action.

Syntax:Subject (third person singular number) + verb in simple present form + s/es +

Example:I know Billy Bob.

He understands it.

They love swinging in the park.

Some people do not believe in God.

I usually wake up at 6.00 AM.

He plays cricket, but his brother plays football.

Earth is bigger than Mercury.

The heat of the sun is the least in the polar.

Watch this video and learn the tense. <https://www.youtube.com/watch?v=8X3x0PTgYDs>

Day 3

Worksheet: for negative sentences

Use the words in brackets to correct the wrong information. Use don't | doesn't in the present simple.

Example: Mel Gibson comes from Britain. (Australia)

Mel Gibson doesn't come from Britain. He comes from Australia.

The Earth moves around the Sun 150 thousand kilometres away from it. (million)

.....

Tourists go to Africa to see the Niagara Falls. (America)

.....

People in Switzerland speak the Swiss language. (the German, French and Italian languages)

.....

The Amazon River ends in the Pacific Ocean. (the Atlantic Ocean)

.....

The Ayers Rock lies in the east of Australia. (in the middle)

.....

The oldest skyscraper in the world stands in New York. (Chicago)

.....

The tallest trees in the world grow in France. (California)

.....

The cheetahs run up to 60 kilometres per hour. (120)

.....

The ostrich lives in Australia. (Africa)

.....

Week 4 - Day 1

Lesson# 01

Topic: The jungle book

1. Read the passage.

2. Match the words to their meaning

- | | |
|---------------|--------------------------------------|
| 1. Plot | a) The writer of the story |
| 2. Characters | b) The place where the story happens |
| 3. Setting | c) The people in the story |
| 4. Author | d) The event in a story |

Use the above words in sentences of your own.

Grammar: paragraph writing

My favorite book

Day 2

1. Read the words in Ex 1

Marsh, cave, jungle, vines, roots, seeds, nuts, berries

2. Complete the sentences using words from Ex.1.

1. To grow plants first sow some Seeds in the soil.
2. The roots of most plants grow underground
3. Vines are strong plants that grow up the side of tree
4. Sometimes you may need a stone to break open a hard nut.
5. A jungle is a thick forest in a hot wet country where plant grow close together.
6. A Cave is a deep hole in a hillside where large animals may sleep.
7. Berries are a type of fruit. You can make jam with Berries.
8. If you try to walk across a marsh your feet will get very wet.

3. Phonics the J sound. Sort the words in the box into four groups as shown in figure.

Bridge cottage fridge general gentle geography
Jam jungle joke message village

- | | |
|-------------------------------|--|
| 1. Words that end in 'age' | Example: cottage, <u>message</u> , <u>village</u> |
| 2. Words that begin with 'ge' | Example: general, <u>gentle</u> , <u>geography</u> |
| 3. Word that begin with 'j' | Example: joke, <u>jam</u> , <u>jungle</u> |
| 4. Word that end with 'dge' | Example: fridge, <u>bridge</u> |

Day 3 Topic: the jungle book

Read the passage

Read the passage again and answers the questions

1. Which animal protected the jungle boy from the tiger?
2. Why could not the tiger hunt the wild animals?
3. What did the tiger eat instead?

4. What happen if animals kill people?
5. Why was Mowgli alone in the jungle?
6. Why did Shere Khan become angry at the end of the story?
7. Why do think the man cub went to the wolves' cave?

3. Complete the sentences with words from the story

- I. A baby wolf or bear is called a cub
- II. A deep hole in a hill where animal live is known as cave.
- III. Big animals hunt small animals to kill and eat them.
- IV. The entrance to the cave is called the mouth
- V. If you have your own house the house belongs to you.
- VI. People who steal things from other people are thieves.
- VII. A large thick forest in Asia is called a jungle

Grammar: forms of verbs

Book pg 113 (be – freeze)

Week 5 - Day 1

Lesson no 4 on pg 18.

1. Read the text about panthers. Write **F** where you think the sentence is a fact and **O** Where you think the sentence is an opinion.

Panthers are large wild cat like leopard but they are black. (**F**) I think they are beautiful animals. (**O**).
 hey live in Africa and parts of Asia such as China. (**F**) There are very few panthers in the world, (**F**) so
 we should not hunt them. (**O**) Panthers don't live in big groups, (**F**) they usually live alone in the forest
 or jungle. (**F**) Panthers hunt small deer. (**F**) They also eat small cows and goats (**F**) and the catch wild
 ways panthers are like tigers: they live alone, they hunt at night and they can swim very well. (**F**)
 Panthers can climb trees but tiger cant (**F**) Sometimes panther (or a leopard) climb a tree with dead
 animal in its mouth (**F**) then it sits in the tree and finish its meal (**F**) Panthers are lucky animals! (**O**)
 they hunt, but no animals hunt them (**O**).

Q: Differentiate between facts and opinions (In notebook)

Facts	Opinions
1. statements which are proven as true.	It is someone's statement based on his own feelings.
2. It is accepted reality by everyone	It differs from person to person.
3. A truth becomes a fact, besides the point of view of anyone.	It can be true or false in someone's else point of view.
4. Example: Red, blue and yellow are primary colours.	Example: Red, blue and yellow are my favourite colours.

Grammar: Present Continuous Tense

Video: <https://www.youtube.com/watch?v=oBbJNjjSYBo>

Affirmative sentences

Exercise 1: Choose the correct form.

I an e-mail now.

- a) am writing
- b) am writting

Susan in the bed at the moment.

- a) lying
- b) is lying

I in London this month.

- a) am staying
- b) stay

Peter this week.

- a) working
- b) is working

My mum and dad now.

- a) is cooking
- b) are cooking

Oh, no! Look!

- a) What is he wearing?
- b) What does he wearing?

Don't turn off the TV.

- a) I am watching it.
- b) I'm not watching it.

I can hear Jane.

- a) She is coming.
- b) She isn't coming.

Exercise 2: Complete the sentences.

Example:

Bill today. (work)

Bill is working today.

Look. She us.

(watch)

Please, stop! You so loudly!
(sing)

It's 9 o'clock and I a book.
(read)

Where is Sam? - He his car.
(mend)

Exercise 3: Make sentences in the present continuous tense.

Example:

(wait/here/I)

I am waiting here.

(I/in Hastings/learn English/this summer)

.....

(in the street/Sarah and Sue/play/at the moment)

.....

(decorate/she/in York/these days/her flat)

.....

(just/look/we)

.....

(a shower/Luke/take/now)

.....

(the sun/shine/and/sunbathe/we)

.....

Day 2 Lesson no 5 on pg 19.

1. Read the passage.
2. Copy and complete the reading journal using the words in the box.

Angry afraid hungry bear tiger frogs monkeys jungle hunt cave

1. This is a story about a boy who grows up in the jungle. His name is Mowgli, which means frog
2. Some of the characters are Baloo which means bear and Shere Khan the tiger. There is also a family of monkeys called the Bandar log.
3. In the story Shere Khan goes to the wolves in the cave and ask them to give Mowgli to him, as he is hungry. The wolves refuse and the tiger goes away angrily.
4. I like father wolf, because he is not afraid of tiger.
5. I don't like the tiger, because he hunts people.

Grammar: Present Continuous Tense

Negative sentences Video: <https://www.youtube.com/watch?v=oBbJNjjSYBo>

Exercise 1: Make negative answers.

Example:

Are your friends cooking now?

No, they are not cooking now.

Is your best friend eating a chocolate?

.....

Are you drinking milk right now?

.....

Is your brother playing the piano?

.....

Am I writing this test with you?

.....

Are your parents singing a song at the moment?

.....

Are you wearing your grandma's shoes today?

.....

Are you and your neighbours riding bikes just now?

.....

Are all your uncles and aunts sitting near you?

.....

Exercise 2: Make these sentences negative.

Example:

Miriam is crying.

Miriam is not crying.

Simon is looking at you.

.....

I am doing homework just now.

.....

We are jogging in the park.

.....

My friend is selling pizzas.

.....

Why are you smiling at us?

.....

Is the cat eating the food?

.....

Why are you reading with us?

.....

Are you working on your computer?

.....

Day 3

Lesson# 02

Pg no 21 Exercise 1,2,3,4

Topic: English speaking countries

Week 6 - Day 1

Lesson 3

Book pg 22,23 (Exercise 2)

Topic: English speaking countries

Day 2

Topic: Grammar

Application writing

Application for fee concession

Day 3

Grammar

Letter writing

Write a letter to your friend asking her to spend summer vacation with you

Week 7 - Day 1

Grammar Topic: Adverb

Video: <https://www.youtube.com/watch?v=WDy5uGRZEY4>

In the following sentences, underline the adverbs. There is only one per sentence.

1. She quietly sat in the library.
2. He ran swiftly down the hill.
3. She wrote her name very neatly.
4. Jan sat sadly in the corner.
5. Bridget jumped suddenly out of her chair.
6. The snow began to fall quickly.
7. Izabella planted each flower carefully in her garden.
8. We want to go tomorrow.
9. Can we go after the movies?
10. She went immediately to the principal's office.

Day 2

Book pg 26 (Exercise 3,4) pg no 27 (Exercise 1)

Grammar

Gender and numbers (any 20) consult any grammar book.

Day 3

Grammar

Creative writing

Write a biography of your principal/teacher/friend

.....

MATH

WEEK - 1: Day 1

Numbers

1. Learn these in numbers and in words also.

- | | |
|--|---------------------------------------|
| 1. One thousand = 1000 | b. Ten Thousand = 10,000 |
| c. Hundred Thousand = 100,000 | d. One Lakh = 1, 00,000 |
| e. Ten Lakh = 10, 00,000 | f. One Million = 10 lakh = 10, 00,000 |
| f. One Crore = 100 lakh = 10 Million = 100, 00,000 | |

a. Place Value means “A digits’ position in a number”

b. Expanded form of numbers is writing each digit of number according to its place value.

2. (a) Draw two tables for writing these numbers in Pakistani & International way as you can find in guide

(b) Write them in words. (c) Place commas in Pakistani and International way of writing these numbers.

**HERE IS GUIDE FOR
YOU**

- | | |
|--------------|---------------|
| 1. 2235268 | ii. 4581976 |
| iii. 213561 | iv. 7895214 |
| v. 3214789 | vi. 5456662 |
| vii. 1112455 | viii. 6982243 |
| ix. 5682234 | x. 3451256 |
| xi. 4562145 | xii. 564521 |

There are two ways of writing a number

a. National way & b. International way

1. National way of writing 2234567

Ten lakh	Lakh	Ten Thousand	Thousands	Hundreds	Tens	Ones
2	2	3	4	5	6	7

In words it is as “Twenty two lakh, thirty four thousand five hundred and sixty seven.

1. 34, 567

b. International way of writing 2234567

Millions	Hundred	Ten	Thousands	Hundreds	Tens	Ones
	Thousands	Thousands				
2	2	3	4	5	6	7

<https://youtu.be/-GT-bIYr0RI>

<https://youtu.be/jl1X75aNJkc>

Day 2

3: Write all above numbers (i- xii) in expanded form. One is done for your help

Expanded form of **2235268** = 2000000 + 200000 + 30000 + 5000 + 200 + 60 + 8

<https://youtu.be/iK0y39rjBgQ?t=11>

Day 3

4: Now you might have learnt how to write place value of a number in Pakistani and international way.

Practice with these numbers.

1. 132756 ii. 849018 iii. 899,047 iv. 8012256 v. 5556447
vi. 2214521 vii. 6325427 viii. 5647821 ix. 3654562 x. 8942145

5: Fill in the blanks.

- a. $98123 = \underline{\hspace{2cm}} + 8 \underline{\hspace{2cm}} + 1 \underline{\hspace{2cm}} + 2 \underline{\hspace{2cm}} + 3$
b. $367890 = \underline{\hspace{1cm}}$ hundred thousand $\underline{\hspace{1cm}}$ ten thousands $\underline{\hspace{1cm}}$ thousands $\underline{\hspace{1cm}}$ hundreds $\underline{\hspace{1cm}}$ tens $\underline{\hspace{1cm}}$ ones
c. $12897 = 10,000 + 20000 + \underline{\hspace{2cm}} + \underline{\hspace{2cm}} + \underline{\hspace{2cm}}$
d. $\underline{\hspace{2cm}}$ is the largest five- digit number.

<https://www.khanacademy.org/math/pre-algebra/pre-algebra-arith-prop/pre-algebra-place-value/v/place-value-3>
<https://www.youtube.com/watch?v=6rk4OiXx9i8>

WEEK 2:

Day 1

ROUND OFF NUMBERS

Learn these first

It is a way of writing number simpler but closer to the value what it was, here is **GUIDE** for you
Numbers are rounded off to nearest 10,50, 100, 1000, 10,000 etc. like below

1. Round off 42 to nearest 10 = 40 2. Round off 46 to nearest 10 = 50
3. Round off 474 to nearest 100 = 500 4. Round off 445 to nearest 100 = 400
5. Round off 2736 to nearest 1000 = 3000 6. Round off 8454 to nearest 1000 = 8000

NOW YOU CAN DO THIS

1. Round off these numbers to nearest 100.

178 , 608 , 267 , 963 , 391 , 674 , 214 , 391 , 843 ,
887 , 357 , 954 , 308 , 436 , 750 , 908 , 729 , 257.

<https://youtu.be/jvp0mtr1kFM?t=92>

Day 2:

Round off these numbers to nearest 1000.

1375 , 1595 , 4347 , 3811 , 1372 , 5505 , 6449 , 2490
8753 , 7578 , 7090 , 6827 , 7518 , 2936 , 4347 , 4457

https://youtu.be/fh8gkPW_6g4?t=21

Day 3:

3. Now Round off the following numbers to the nearest ten, hundred, thousand and then hundred thousand separately.

a. 4,567.

b. 12,345.

c. 896,745.

d. 698,701.

e. 56,987

f. 899,047

<https://youtu.be/jvp0mtr1kFM?t=92>

https://youtu.be/fh8gkPW_6g4?t=21

WEEK – 3:**Day 1****ADDITION AND SUBTRACTION**

1. Add the following.

a. $4098 + 29087$ b. $24987 + 13980$ c. $30987 + 29000$ d. $45778 + 34887$.

2. Subtract the following.

a. $99999 - 9999$ b. $12000 - 7000$ c. $56980 - 12908$ d. $70000 - 8908$.

<https://youtu.be/J66ouCXllhI?t=108>

<https://youtu.be/863F-jXXlaI?t=45>

<https://youtu.be/ihkVqbGuapY?t=126>

Day 2

3. Work out the following.

a. $257 - 120 + 198$ b. $90000 - 23897 + 23098$ c. $67908 + 12908 - 23908$.

4. Match the following to their estimated sum or difference.

a. $45,908 + 12,123$

17,000

b. $12,450 - 10980$

47,000

c. $34,786 + 11,750$

58,000

d. $10,908 + 5769$

23,000

5. Look at the numbers 79860 and 12340.

a. Rounding off the numbers to the nearest ten thousand and finding their difference is done for you

Solution:

Nearest ten thousand of 79860 = 80000

Nearest ten thousand of 12340 = 10000

Difference = 80,000 – 10,000

= 70,000 Ans

b. Now you have to round off the numbers to the nearest thousand and find their difference.

<https://youtu.be/cUKmbQipu5A?t=111>

Day 3**6. Solve the following.**

- a. In 2014 there were 267894 visitors to sunshine water Park. In 2015, there were 31765 more visitors. What is the total number of visitors in these two years?
- b. There are 90000 horses in a field. Among them, 45098 horses go to the river to drink water. How many horses remain in the field?
- c. Wahid borrowed Rs. 5 hundred thousand from a bank. He returned Rs. 198,560 in the first installment and Rs 99, 803 in the second installment. How much more does he need to pay the bank?

<https://youtu.be/7Qs--tkx3Xw?t=89>

WEEK – 4**Day 1****MULTIPLICATION AND DIVISION:****Q#1. Fill in the blanks.**

a. $360\ 000 = \underline{\hspace{2cm}} \times \underline{\hspace{2cm}} \times 100$

b. If $1890 \div 9 = 210$, then $1890 \div \underline{\hspace{2cm}} = 9$

c. $863\ 555 \div \underline{\hspace{2cm}} = 863\ 555$

d. $4 \times 1 = 4$: $4 \times \underline{\hspace{2cm}} = 40$: $4 \times \underline{\hspace{2cm}} = 400$: $4 \times \underline{\hspace{2cm}} = 4000$: $4 \times \underline{\hspace{2cm}} = 40\ 000$

f. $707 \times (56 + 50) = (707 \times \underline{\hspace{2cm}}) + (707 \times \underline{\hspace{2cm}})$

g. The product of two numbers is 343 000. If one number is 49 000, then the other number is .<https://www.youtube.com/watch?v=BJgMwndNR4Q><https://youtu.be/VXrn5HOQmHQ?t=239><https://youtu.be/ENKH97PYs8g?t=91><https://youtu.be/AKQGe50NIVg?t=45><https://youtu.be/6nZp2QGeQ9k?t=36>**Day 2:****Q#2. Multiply and check if your answer is reasonable.**

a. $56\ 780 \times 81$ b. 567×604 c. $90\ 054 \times 76$ d. $222\ 222 \times 400$ e. $23\ 787 \times 3 \times 80$

<https://youtu.be/-h3Oqhl8fPg?t=414>**Day 3****Q#3. Divide and check your answer.**

a. $2308 \div 20$ b. $6225 \div 83$ c. $2550 \div 15$ d. $5456 \div 83$ e. $7858 \div 16$

<https://youtu.be/umpuj7YUm3c?t=27><https://www.khanacademy.org/math/arithmetic-home/multiply-divide/mult-digit-div-2/v/level-4-division>

WEEK – 5**Day 1****Q#4. Find the quotient and remainder.**

- a. $89\,760 \div 100$ b. $12\,457 \div 1000$ c. $3400 \div 10$ d. $11\,526 \div 1000$ e. $450\,450 \div 100$

<https://youtu.be/R2dZZxfAYsg?t=182>

<https://youtu.be/MbpmP1esh-Q?t=159>

Day 2**Q#5. Work out the following.**

- a. $45 \times 21 \div 9$ b. $128 \div 8 \times 35$ c. $16 \times 42 \times 5 \div 7$ d. $352 \div 4 \times 27 \div 6$ e. $2244 \div (22 \times 17)$

<https://youtu.be/CIYdw4d4OmA?t=346>

Day 3**Q#6. Solve the following word problems.**

- a. There are 8 pens in a packet. I need 40 pens. How many packets should I buy?
- b. The product of two numbers is 5175. If one of the numbers is 75, what is the other number?
- c. A car game takes 5 minutes to play. How many games could I play in an hour?
- d. 11 760 bottles of juice are to be packed into a carton of 48 bottles each. How many cartons are needed to pack all the bottles?
- e. A train has 11 904 passengers. How many passengers can travel in 124 such trains?

https://youtu.be/fZtUn_THXnk?t=149

<https://youtu.be/XF7if5XJRtQ?t=90>

<https://youtu.be/Z3qRkxzmYnU?t=96>

<https://youtu.be/4rWy0sWWQVc?t=39>

WEEK – 6**Day 1****MULTIPLICATION FACTS PRACTICE**

- | | | | | | |
|-----|-------|---|-------|---|-------|
| 1. | 2 | x | _____ | = | 10 |
| 2. | 13 | x | _____ | = | 130 |
| 3. | _____ | x | 3 | = | 3 |
| 4. | _____ | x | 5 | = | 15 |
| 5. | 10 | x | _____ | = | 50 |
| 6. | 4 | x | _____ | = | 8 |
| 7. | _____ | x | 10 | = | 0 |
| 8. | 2 | x | _____ | = | 14 |
| 9. | 5 | x | _____ | = | 25 |
| 10. | 12 | x | 12 | = | 144 |
| 11. | _____ | x | 4 | = | 16 |
| 12. | 10 | x | 10 | = | _____ |

Day 2:

- | | | | | | |
|-----|-------|---|-------|---|-------|
| 13. | 18 | x | 4 | = | _____ |
| 14. | 6 | x | _____ | = | 18 |
| 15. | 8 | x | _____ | = | 16 |
| 16. | 20 | x | 20 | = | _____ |
| 17. | 18 | x | 7 | = | _____ |
| 18. | _____ | x | 7 | = | 7 |
| 19. | 14 | x | 8 | = | _____ |
| 20. | _____ | x | 9 | = | 45 |
| 21. | 9 | x | _____ | = | 90 |
| 22. | 17 | x | 7 | = | _____ |
| 23. | 7 | x | _____ | = | 63 |
| 24. | _____ | x | 6 | = | 48 |
| 25. | 13 | x | _____ | = | 169 |

Day 3


26.	9	x	_____	=	91
27.	6	x	_____	=	30
28.	15	x	5	=	_____
29.	_____	x	7	=	49
30.	19	x	9	=	_____
31.	_____	x	6	=	0
32.	17	x	9	=	_____
33.	8	x	8	=	_____
34.	11	x	10	=	_____
35.	14	x	4	=	_____
36.	15	x	_____	=	15
37.	16	x	2	=	_____
38.	19	x	3	=	_____

WEEK – 7:**Day 1****Mental Maths**

- Write the correct number in the boxes $114 = \square$ hundreds + \square tens + \square ones
- 6 tens are = _____
- Fill in missing number $4081 = 4000 +$ _____
- Find two numbers with the sum of 16 and a difference of 4.
- Write the number that comes just before 7030 = _____?
- If the time is 4:00 pm now then what will it be after 45 minutes?

7. 1 year + 4 months = _____ months.
8. Which numeral represents the highest value in 8,943?
9. Write two numbers with the sum of 9 and difference of 1.
10. Write down number eighteen thousand two hundred seven.

Day 2

11. If tomorrow is Sunday what was it yesterday _____?
12. 1900 hours = _____
13. Find the sum of 63135 and 14822.
14. If the date is 17 August today, the date of week before was. _____
15. How many sides are there in octagon _____
16. Four tens + 23 = _____
17. When zero is taken away from a number the answer is always:
- (a) a zero, (b) one, (c) less than the number, (d) the same as the number.
18.  .
 _____ Complete the pattern of shapes.
19. Write in figures five thousand and twelve _____.

Day 3

21. 0.7, 0.8, 0.9, _____

22. Round off the $7\frac{1}{5}$ to the nearest whole _____.

23. What are the next two numbers 1, 3, 6, 10, 15, 21, _____, _____

24. Add up the even numbers between 11 and 15 _____.

25. _____ + $\frac{7}{12} = \frac{11}{12}$

26. The mixed fraction of $\frac{7}{8} =$ _____

27. How many tens are there in 40? _____

28. Use the number patterns to complete the last line.

$$3 \times 4 = 10 + 2$$

$$3 \times 5 = 12 + 3$$

$$3 \times 6 = 14 + 4$$

$$3 \times 7 = 16 + 5$$

$$\square \times \square = \square + \square$$

29. Type the missing number to complete the equivalent fraction.

$$\frac{1}{4} = \frac{2}{8} = \frac{3}{12} = \frac{4}{16} = \frac{5}{20} = \frac{6}{\quad}$$

30. In 960,183 which digit is in the hundred thousand places? _____

Science

Important Note

- **Mcqs, Fill in the blanks, Name the following** should be solved/written/filled on your book.
- **Short Q/A and Long Q/A** should be written on your notebook.
- **Activities** :write on loose sheets.
- Learn the spellings of **dictation words**.

Week-1

Day 1

CHAPTER# 01 (OUR FOOD)

Fill in the blanks

1. **Proteins** are body-building nutrient.
2. **Carbohydrates** and **Fats** are energy giving nutrient.
3. Meat and fish are rich in **Proteins**.
4. Rice is rich in **Carbohydrates**.
5. Butter and Ghee are rich in **Fats**.

Fill in the blanks with the correct option

1. The nutrients that help your body to grow are **Proteins**.
2. The nutrients present in large quantities in potatoes are **Carbohydrates**.
3. Muscles building foods are rich in **Proteins**.
4. If food is overcooked, the useful **nutrients** are lost.
5. **Steaming** is a method of cooking food.

Dictation Words

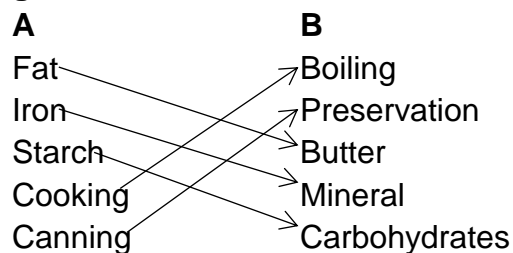
Nutrients, Proteins, Building Food, Starch, Protective, Roughage, Precautions, Steaming

Video Link

<https://www.youtube.com/watch?v=TE6xptjqNR0>

Day 2

Match the Following



Short Q/A**Q.1 What are nutrients?**

Ans: Food contains different substances, which are useful for our body. These substances are called nutrients.

Q. 2 Write two foods which are rich in carbohydrates?

Ans: Rice and potatoes are the foods, which are rich in carbohydrates.

Video Link

<https://www.youtube.com/watch?v=j82oa4Xmys0>

Day 3**Q.3 What is a balanced diet?**

Ans: The diet that provides all the nutrients in the right amount is a balanced diet. It keeps us fit and healthy.

Q.4 Why proteins should be included in our daily life?

Ans: Proteins should be included in our daily life because they help our body to grow. They also help our body to build muscles and help other organs to make blood.

Q.5 Why do we cook food?

Ans: We cook food because cooking makes the food, soft, tasty and easy to digest. It also kills the germs.

Activity No 1

Draw four different types of foods you eat every day. Select food items from food pyramid and write your menu for Sunday.

Video Link

https://www.youtube.com/watch?v=Wpfwu_PF7Y

Week-2**Day 1****Long Answers****Q. Why fruits and vegetables should be washed before eating? Explain in detail.**

Ans: Fruits and vegetables grown in open fields have dust and mud stuck to them. This dust and mud carries bacteria, which can cause diseases.

Secondly, farmers spray chemicals on fruits and vegetables to protect them from pests. These chemical are poisonous for human beings. Therefore, we should wash food before eating.

Video Link

<https://www.youtube.com/watch?v=HQhv4Zd7eLs>

Day 2

Q. What do you know about preservation of food? Write names of different methods of preserving food.

Ans: Food spoils if it is kept for a long time. Germs and mold starts growing on it. We can fall ill if we eat such food. The method with which we can prevent rotting of food is called preservation of food. Different methods for preservation are Freezing, Drying, Canning and adding salt sugar vinegar or oil etc.

Video Link

<https://www.youtube.com/watch?v=UWhkFYDB8J4>

Day 3

Q. Why do we call Vitamins and minerals protective foods? Name any two minerals that our body needs in small amounts. Which foods are rich in vitamins and minerals?

Ans. Vitamins and minerals keep our body healthy. They also help our body to fight diseases. That is why they are called protective foods.

Two important minerals for our body are Calcium and Iron. We need Calcium for strong bones and teeth. Iron helps in the formation of blood.

Wheat, meat, eggs, fish and milk are rich in vitamins and minerals.

Activity No 2

Work Sheet

Write food items you eat each day. Also, write the nutrients they contain.

Day	Food	Nutrients it Contains
Monday		
Tuesday		
Wednesday		
Thursday		
Friday		
Saturday		
Sunday		

Video Link

<https://www.youtube.com/watch?v=1Q6diQ-YyxE>

Week 3

Day 1

CHAPTER# 02 (TEETH AND DIGESTION)

Fill in the blanks

1. Temporary teeth are called **Milk** teeth.
2. The second set of teeth is called **Permanent** teeth.
3. Children have a set of **28** teeth.

Fill in the blanks with correct option

1. Number of a complete set of permanent teeth is **32**.
2. Teeth used for chewing and grinding are **Molars**.
3. The **Pulp** is the inner most layer of a tooth.
4. In the mouth the food mixes with **Saliva**.

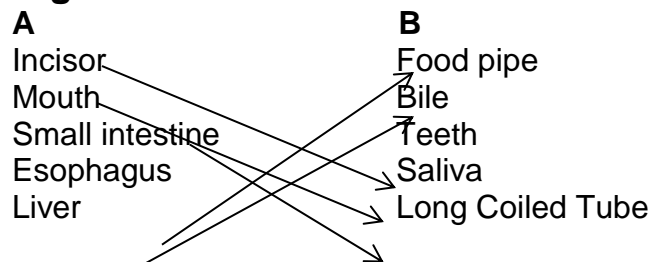
Correct the following sentences

1. A small baby has tooth buds inside the tongue.
2. The color of teeth depends upon their functions.
3. The outermost part of a tooth is called dentine.
4. Bile helps to digest carbohydrates.
5. Saliva helps in the digestion of proteins.
6. Water is absorbed in the small intestine.

(Correct Answers)

Gums
Shape
Enamel
Fats
Starch
Large

Match the following



Dictation Words

Incisors, Canines, Premolars, Dentine, Enamel, Digestive Organs, Intestine

Video Link

<https://www.youtube.com/watch?v=lg2WO5VPowA>

Day 2

Short Questions/Answers

Q.1 What causes tooth decay?

Ans. Many types of germs live in the mouth. They feed on the leftover food particles causing tooth decay.

Q. 2 Name the three layers of teeth?

Ans: Three layers of teeth are Enamel, Dentine and Pulp.

Q. 3 Write any three ways of taking care of your teeth?

Ans: Brush or rinse thoroughly after every meal. Don't take too much of sticky food, sweet and soft drink. Eat food that contains calcium vitamin A, C and D.

Q. 4 What happens to food in a stomach?

Ans. The stomach is a muscular bag where food is churned and digestive juices are added. The food also turns into four semi liquid mixture.

Q.5 What is the main role of large intestine?

Ans: The undigested food passes through a tube called the large intestine. Here water is absorbed from the undigested food. Whatever is leftover; is thrown out from the body through an opening called anus.

Video Link

https://www.youtube.com/watch?v=Jt_c5jWPWDc

Day 3

Long Question Answers

Q.1 List good eating habits.

Ans: The good habits to eat food are;

1. Eat a balanced diet.
2. Eat food at fixed time.
3. Chew well.
4. Don't be in a hurry.
5. Don't play as soon as you finished eating.
6. Don't over eat.

Q.2 Name the different types of teeth and their functions.

Ans. There are four types of teeth.

- i. Incisors are used to eat and chop food.
- ii. Canines are used to grip and tear food.
- iii. Premolars are used to chew food.
- iv. Molars are used to grind food.

Q.3 Define Digestion and Saliva.

Digestion is a process of breaking down of food into simpler form.

Saliva is a digestive juice produced by salivary glands in the mouth. The saliva converts soluble starch into soluble sugar.

Activity No 3

Find out and note down the number of milk teeth and the number of permanent teeth you have.

Video Link

<https://www.youtube.com/watch?v=co4kSPqRi9o&t=21s>

Interesting Links:

<https://kidshealth.org/en/kids/teethquiz.html> (Test your knowledge about teeth, take this online Quiz)

Week-4

Day 1

CHAPTER# 03 (CLOTHES AND FIBERS)

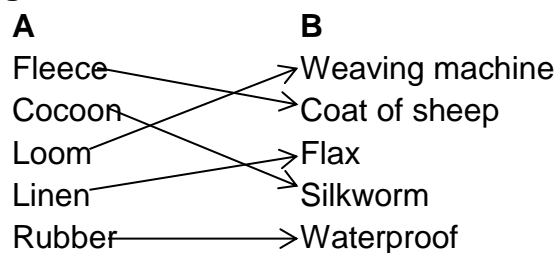
Fill in the blanks

1. Fibers obtained from plant and animal sources are called **Natural** fibers.
2. Fibers obtained from chemicals are called **Synthetic** fibers.
3. A **loom** is used to weave yarn into cloth.

Fill in the blanks with the correct option

1. Cloths are made from long, thin strands or thread of material called **Fibers**.
2. Fibers are **spun** into threads.
3. Warm clothes are made from **Woolen** fibers.
4. **Coir** is obtained from coconut fibers.
5. **Hessian** cloth is used for making sacks.

Match the following.



Dictation Words

Linen, Spun, Jute, Coir, Cocoon, Climate, Shear, Knit, Wrinkle, Fleece

Video Link <https://www.youtube.com/watch?v=ZGtfV82JoAo>

Day 2

Short Questions and Answers

Q.1 What are fibers?

Ans. Clothes are made from long thin strands or thread of materials called fiber.

Q.2 How do we get fiber from the flax plant?

Ans: linen fiber is produced from the stock of the flax plants .They are allowed to rot then they are beaten to separate fibers. These fibers are woven into linen cloth.

Q.3 How do we get fiber from cotton?

Ans. The cotton plants bear light and fluffy cotton balls which burst. These cotton balls have thin fibers in them.

Q.4 How do we get wool?

Ans. Animals that have a stick coat of hairs on their skin give us wool. We get it from sheep, goat and camel.

Video Link <https://www.youtube.com/watch?v=x0HeCL6nano>

Day 3

Long Answers

Q.1 How is silk cloth made?

Ans. Silk fibers are made by insects called silk moth. Silk moth lays eggs. The eggs hatch into silk worms. Young silk worms eat mulberry leaves and grow. The silk worms spin a silky thread and wrap it around their bodies. This silky covering is called Cocoon. The cocoons are put into hot water and then skilled workers carefully unwind this thread. The thread is then woven into a silk cloth.

Q.2 what are the differences between synthetic fiber and natural fiber?

Synthetic Fiber

These are made by man through chemical processes. For example Rayon and Nylon.

These are more strong and durable.

They dry quickly.

They don't shrink.

They can cause rashes with skin.

They can catch fire easily.

Natural Fiber

Fiber that we get from animals and plants are called natural fibers. For example cotton, linen and silk etc.

These are less strong and durable.

They take time to dry.

They shrink little.

They don't cause rashes with skin

They don't catch fire easily.

Video Link https://www.youtube.com/watch?v=eqFm_7KyfHI

Week-5

Day 1

CHAPTER# 04 (Houses all around)

Fill in the blanks

1. Houses are built on stilts to avoid rain water from **entering water**.
2. There are two types of building materials: **Natural** and **Synthetic**
3. Ice is used by **Eskimos** to build igloos.

Fill in the blanks with correct option

1. **Thick** walls keep the house cool.
2. **Fabric** is used to make tent.
3. Ice is used to make **igloos**.
4. Slate is used as **roofing** material.
5. Budget is the amount of **money** that has to be considered for building a house.

Video Link

<https://www.youtube.com/watch?v=bmr91hgaByk>

Day 2

Complete the following

1. The types of houses built in area depend on climate of that place, building material available in the place and the money available with the person to build a house.
2. Concrete is used because of its strength and long life nature.
3. Metals like steel and iron are used to make strong building. These are also used to make grills and gates.
4. The cost of a house depends on its size, building material and interior decoration of the house.
5. A house should have overhead tanks to store enough water.

Video Link <https://www.youtube.com/watch?v=x0HeCL6nano>

Day 3

Definitions

1. **Building material:** Materials that are used for construction. There are two basic type of materials Natural and Synthetic.
2. **Budget:** Amount of money which is fixed to build a house is known as its budget. The budget or cost of a house depends on the material of interior decoration and cost of land etc.

Activity No 4

Make a house by using recycled cardboards.

Video Link <https://www.youtube.com/watch?v=XsFeVuVQE-E>

Week-6

Day 1

Short Questions/Answers:

Q.1 What are the advantages of having a thatched roof?

Ans. Houses made from mud and clay have thatched roof. These roofs remain cool in summer and warm in winter.

Q.2 Name any five building materials used in making a low cost temporary house?

Ans: Low cost houses are built with natural materials like mud, clay, sand, straw branches, twigs, leaves and barks of trees.

Video Link

<https://www.youtube.com/watch?v=nphb83aBQds>

Day 2

Q.3 Name any five building materials used in making a big permanent house?

Ans: Materials used in making big permanent houses are wood, cement, concrete, metal, glass, steel

Q.4 Why is glass used as building material?

Ans. Glass is used as building material due to its opaque nature. It allows light to pass through it but it stops the arrival of dust and insects.

Video Link <https://www.youtube.com/watch?v=foi10wJpT5I>

Day 3

Long Question Answer

Q.1 Which type of work is done by Architect, Engineer, Mason, Carpenter and Fabricator?

Ans:

Architect: He makes the planned design of the house.

Engineer: He looks after the actual construction sight of the house.

Mason: He joins the bricks with cement.

Carpenter: He makes the door, window frames, cupboards etc.

Fabricator: He makes iron grills and fences for security.

Video Link <https://www.youtube.com/watch?v=VnP-Q7Y9bI0>

Dictation Words

Climate, Grill, Budget, Welding, Solder, Rust. Stilts, Engineer

Activity No 5



Task

Find the names of the following people in the wordsearch.

- MASON • ARCHITECT • ELECTRICIAN • CARPENTER
- PLUMBER • ENGINEER • TILER

M	T	C	A	R	P	E	N	T	E	R
P	L	T	C	V	O	N	X	L	C	K
U	P	K	M	G	P	G	C	Q	M	R
E	L	E	C	T	R	I	C	I	A	N
R	U	W	O	U	Z	N	K	N	S	S
C	M	B	T	I	L	E	R	L	O	J
N	B	T	G	P	F	E	R	V	N	S
T	E	H	C	Q	W	R	U	I	T	M
A	R	C	H	I	T	E	C	T	X	E

Week-7

Day 1

Project No 1

Design and draw the house you would like to live in.

Project No 2

Note down for a week what you eat in your meals. Note down the major nutrients these foods contain. Write if you think the food you ate for a week was balanced or not.

Day 2

Project No 3

In your scrapbook, paste photographs of the type of clothes you wear at home, while playing, in school and when you attend a wedding. Write the name of each dress.

Day 3

Project No 4

Prepare lemon juice and write about the solubility of sugar, salt and lemon juice in water.

Note down the things you used.

What did you do?

What happened?

What did this tell you?

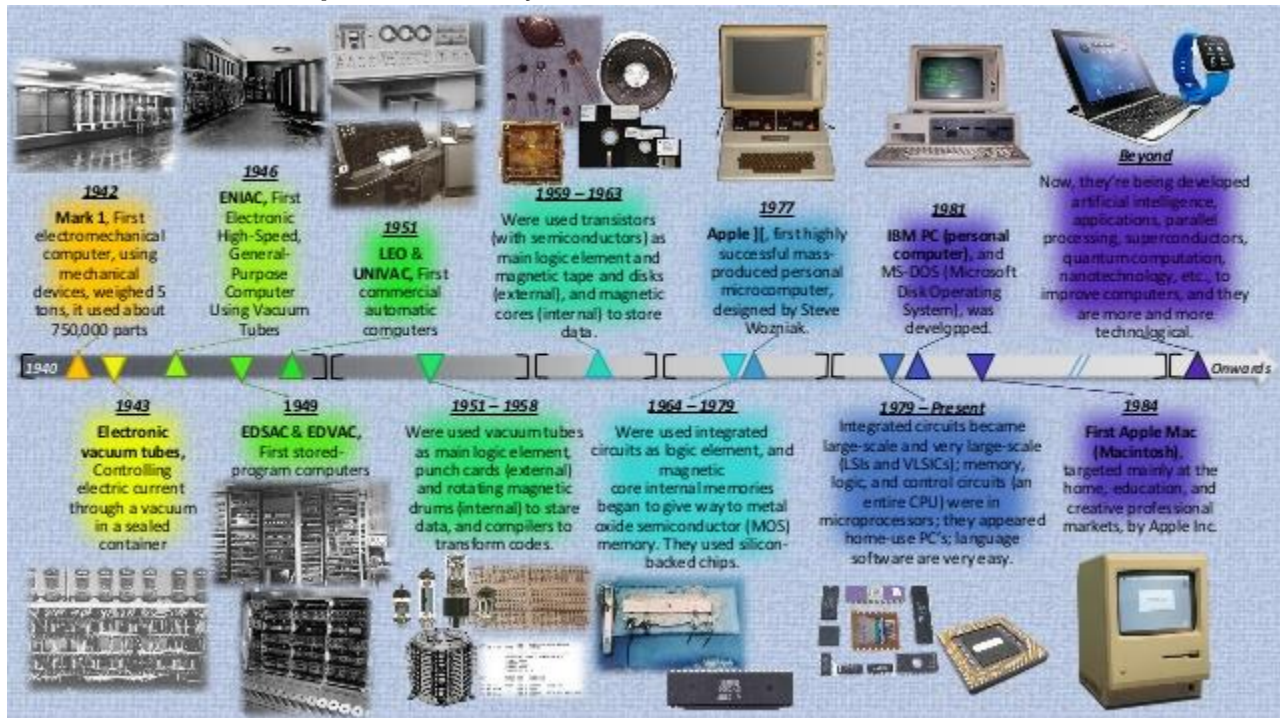
Computer

Week: 1

Day 1

Topic: History of computers

The **computer** as we know it today had its beginning with a 19th century English mathematics professor name Charles Babbage. He designed the Analytical Engine and it was this design that the basic framework of the **computers** of today are based on.



Link for more information: <https://www.youtube.com/watch?v=85RKLA3qh2U&feature=youtu.be>

Worksheet 1


Q. Fill in the blanks:

- Pascaline was invented by _____.
- _____ was invented by Eckert & Mauchly.
- William C. Low developed personal computer in _____.
- _____ was the earliest device used for calculations.
- _____ is known as father of computer.
- _____ is also known as Automatic Sequence Controlled Computer (ASCC).
- Tabulating machine used method of _____ for storing data.
- ENIAC could perform _____ additions in a second.

9. _____ is said to be the first calculator of the world.

10. _____ was first used in Cambridge University, London.

Q2. Name the following devices:



Day 2

Topic: History of computers

The **computer** as we know it today had its beginning with a 19th century English mathematics professor name Charles Babbage. He designed the Analytical Engine and it was this design that the basic framework of the **computers** of today are based on.

Link for more information: <https://www.youtube.com/watch?v=85RKLA3qh2U&feature=youtu.be>

Worksheet 2

Q1. Write the full form of the following:

1. ENIAC _____
2. EDSAC _____
3. PC _____
4. ASCC _____

Q2. Match the column.

- | | |
|-----------------------|----------------------|
| a. ENIAC | Blaise Pascal |
| b. Difference Engine | Howard Aiken |
| c. EDSAC | Eckert and Mauchly |
| d. Pascaline | Charles Babbage |
| e. Tabulating machine | John Von Neumann |
| f. Mark – I | Dr. Herman Hollerith |

Day 3

Topic: Uses of a Computer in different fields of life

- A computer can be used at home to play games, watch movies, make drawings and to do calculations.
- Your parents use a computer to do their work.
- A computer can be used at banks to maintain accounts.
- A computer can be used at hospitals to help doctors and to maintain records.
- A computer can be used at schools to teach students.
- A computer can be used at stores to make bills.

Link for more information:

<https://www.youtube.com/watch?v=UlvmhKaOtbM&list=PLYliWwLEK8vFQikK3jxN6Gv03lq39Hw3wj&index=2>

Worksheet 4

4: Answer the following questions.

1. Why do we use computers at banks?

2. Why do we use computers in hospitals?

3. Why do we use computers at home?

4. Why do we use computers at school?

Week 2

Day 1

Topic: History of computers

The **computer** as we know it today had its beginning with a 19th century English mathematics professor name Charles Babbage. He designed the Analytical Engine and it was this design that the basic framework of the **computers** of today are based on.

Link for more information: <https://www.youtube.com/watch?v=85RKLA3qh2U&feature=youtu.be>

Worksheet 3

Q1. Answer the following short questions.

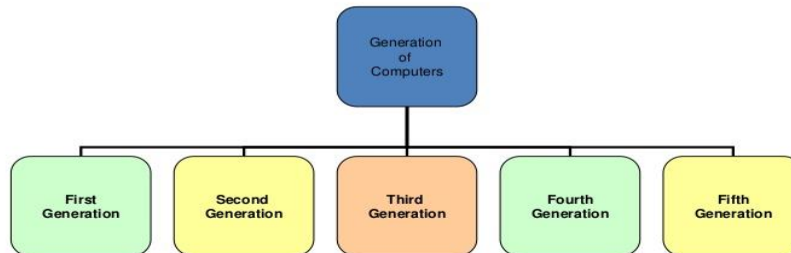
1. Name the first calculating device.
2. Which device was invented by blaise pascal?
3. Who is known as father of computer?
4. What did the tabulating machine used for storing data?
5. Which computer followed the ideas of Charles babbage? When was it developed and by whom?
6. What were the limitations of ENIAC?
7. How was EDSAC different from ENIAC?
8. List all the devices that were invented before personal computer (PC).
9. Write a short note on abacus. Also draw and label the diagram of abacus.

Day 2

Topic: Types and Generations of Computers

Generation of Computers

Based on the characteristics of various computers developed from time to time, they are categorized as generation of computers.



Link for more information: <https://www.youtube.com/watch?v=MtJUyzoYEmw&feature=youtu.be>

Worksheet 4

Q1. Fill in the blanks.

1. A computer performs _____ basic functions.
2. The devices used to store data are called _____ devices.
3. Micro computers are commonly known as _____.
4. There are _____ generation of computers till date.
5. First generation computer used _____.
6. _____ generation computers used Transistors.
7. Third generation computers used _____.
8. Fourth generation computers used _____.
9. _____ generation computers are expected to have artificial intelligence.
10. _____ computers are best suited for multi-user environment.
11. Computers of _____ generation computers were as big as a room.
12. _____ computers can handle a large number of users at the same time.

Q2. Name the following types of computers:



Day 3

Topic: Parts of a Computer

A computer has following basic parts:

- Monitor
- CPU (Central Processing Unit)

- Keyboard
- Mouse
- Speakers
- Printer
- Modem
- Web camera
- CDs/DVDs

Link for more information: https://www.youtube.com/watch?v=YhaHq3pz_IQ

Worksheet 5

5: Answer the following questions.

1. What does CPU stands for?

2. How many keys are there in a keyboard?

3. What is optical sensor of a mouse?

4. What is a printer?

5. What is a modem?

Week 3

Day 1

Topic: Types and Generations of Computers



Link for more information: <https://www.youtube.com/watch?v=MtUUyzoYEmw&feature=youtu.be>

Worksheet 5

Q1. Write the full form of the following.

1. IC _____
2. LSI _____
3. VLSI _____

Q2. Match the column.

- | | |
|----------------------------|---|
| 1. Micro processor chip | a. mini computers |
| 2. Fastest computers | b. super computers |
| 3. Used as server | c. 5 th generation computers |
| 4. Multi-user environment | d. 2 nd generation computers |
| 5. Vacuum tube technology | e. 4 th generation computers |
| 6. Transistors | f. 1 st generation computers |
| 7. Artificial intelligence | g. micro computers |
| 8. Very reliable | h. 3 rd generation computers |
| 9. Integrated circuits | i. mainframe computers |

Day 2

Worksheet 6

Q1. Answer the following questions.

1. Name the different types of computers.
2. How are micro computers different from mini computers?
3. How many generations of computers are there?
4. Write any two differences between the third generation computers and fourth generation computers.
5. What are we expecting the fifth generation computers to be equipped with?

Day 3

Topic: Difference between hardware and software

Computer hardware is any physical device used in or with your machine, whereas software is a collection of programming code installed on your computer's hard drive. In other words, hardware is something you can hold in your hand, whereas software cannot be held in your hand. You can touch hardware, but you cannot touch software. Hardware is physical, and software is virtual.

For example, the computer monitor you are using to read this text, and the mouse you are using to navigate this web page are computer hardware. The Internet browser allowing you to view this page, and the operating system that the browser is running on are considered software. A video card is hardware, and a computer game is software. You can touch and feel the video card, and the

computer uses it to play a computer game, but you cannot touch or feel the programming code that makes up the computer game.

Link for more information: <https://www.youtube.com/watch?v=mR0jt2ByM08>

Worksheet 9

9: Answer the following questions.

1. Write down three differences of software and hardware.

Software

Hardware

1. _____

2. _____

3. _____

Week 4

Day 1

Topic: Computer Accessories



Link for more information: <https://www.youtube.com/watch?v=zh10mJEOjJ4&feature=youtu.be>

Worksheet 7

Q. Fill in the blanks:

1. An _____ is a thing that can be added to make a thing more useful.
2. Keyboard is an _____ device.
3. _____ is used to enter text and other commands to a computer.
4. Keyboard has _____ keys.
5. Mouse is an _____ device.
6. _____ is used to control the cursor on the screen.
7. The mouse has _____ buttons.
8. There are _____ types of mouse.
9. _____ mouse has a ball inside it.
10. _____ mouse has a laser underneath it.
11. Joystick is an _____ device.
12. Joystick includes two buttons called _____.
13. _____ are basically used for playing games.
14. _____ can scan photos, printed text, handwriting or any other object.
15. Microphone is an _____ device.
16. _____ converts the sound waves into electrical signals for the computer.
17. _____ are used to record sounds.
18. Microphone is also known as _____.
19. A _____ is the short form for the term web camera.
20. Compact disc is an _____ disc.
21. _____ is used to store data.
22. Capacity of CD is measured in _____ (MB).
23. A computer must have a _____ to use a CD.
24. Digital video disks are commonly known as _____.
25. Storage capacity of DVDS is measured in _____ (GB).
26. _____ stands for Universal Serial Bus.
27. USB is a portable _____ device.
28. USB flash drive is also known as _____ Drive.
29. Monitor is an _____ device.
30. _____ displays video or graphic information.
31. _____ monitors display the result in only one color.
32. _____ monitors present result in many colors.
33. _____ stands for Liquid Crystal Display.
34. _____ is used to print out documents on the paper.
35. There are _____ types of printers.
36. _____ printer prints by striking on the ribbon.
37. _____ printer gives excellent quality prints.
38. _____ printer use heat to create impression on the paper.
39. Speaker is an _____ device.
40. The _____ help us listen music, watch movies etc.

Day 2

Worksheet 8

Q1. State whether the following are true or false.

1. All keys of the keyboard are similar to each other. _____
2. A mouse has two buttons. _____
3. Joystick is used for playing sound. _____
4. CD is a storage disc. _____
5. USB cannot be removed from computer. _____
6. Monochrome monitors display the result in one colour only. _____
7. Laser printer gives excellent quality. _____
8. The speakers help us listen music. _____

Q2. Write the full form of the following.

1. CD _____
2. DVD _____
3. USB _____
4. LCD _____
5. GB _____

Q 3. Unscramble the words.

1. Smeuo _____
2. Ftasweo _____
3. Eaybdokr _____
4. Mornito _____
5. Gsame _____
6. lpunt _____
7. Memyro _____
8. Raaehwrđ _____
9. Eesncr _____
10. Touptu _____

Day 3

Topic: Switching ON the Computer

How to turn on a computer: Switching on the computer is also called turn on the computer or boot the computer. You need to check the cables of the computer. It should be plugged in. the follow the following steps:

1. Step 1: Find the 'on' button. It probably looks like a circle. (but might be square or oblong!):
2. Step 2: Push the button. On some **computers**, the button lights up when the **computer** is on.
...
3. Step 3: Now you need to log in. If you're the only user of your **computer**, once it's **turned** on it may go straight to the desktop:

Link for more information: <https://www.youtube.com/watch?v=ev-99L1rUu0&list=PLYIiWwLEK8vFQIK3jxN6Gv03lq39Hw3wj&index=6>

Worksheet 10

10: Answer the following questions.

1. Write down the procedure to turn on the computer.

- 2: What is turn on the computer?

Week 5

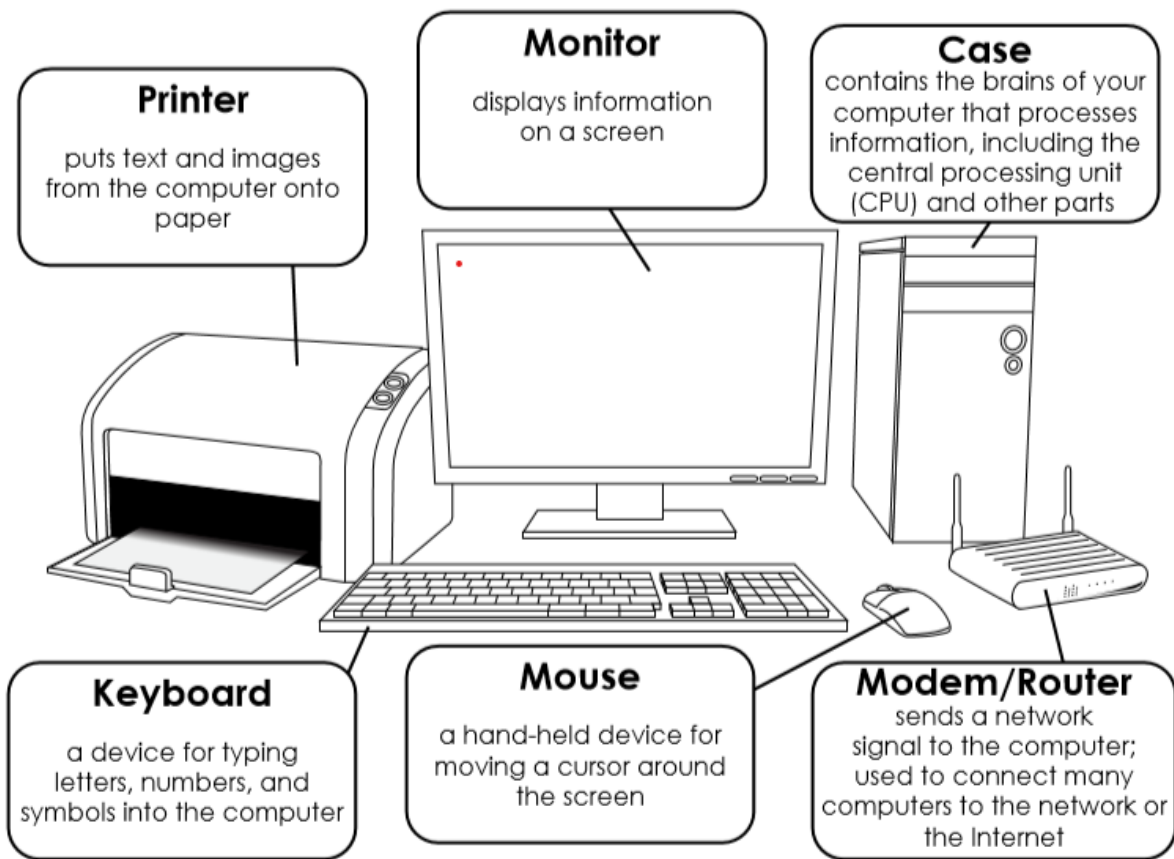
Day 1

Worksheet 9

Q1. Answer the following.

1. Write a short note on keyboard.
2. What is a mouse? Write two types of mouse.
3. What are the uses of a joystick?
4. Describe a microphone.
5. What is a monitor? Explain in detail the types of monitors available.
6. Write a note on printer.
7. What is a scanner?
8. Write down the differences between:
 - LCD monitor and Monochrome monitor
 - Dot matrix printer and Laser printer

Parts of computer:



Day 2

Topic: More about Paint

Zooming a Drawing

Zoom helps us to see an enlarged view of an image. The steps to use this tool are:

Link for more information: <https://www.youtube.com/watch?v=tLVs-xDVDds>

Worksheet 10

Q. Fill in the blanks:

1. The _____ tool is used to draw lines.
2. The _____ tool is used to draw rectangles.
3. The _____ tool is used to create circles and oval shapes.
4. A _____ is a closed shape that is made of straight lines.
5. The _____ tool is used to draw curved lines.
6. _____ tool is used to create free hand shapes.
7. Air brush tool is also called the _____ tool.
8. The _____ tool can be used to add text to the drawing.
9. The _____ tool is used to erase the mistakes.
10. _____ tool is used to select an area.
11. _____ tool is used to enlarge the view of drawing.
12. _____ is used to copy the image.
13. _____ is used to paste the image.
14. _____ is used to cut an image.
15. _____ is used to re-do a cancelled action.
16. _____ is used to cancel any action that has been done.

Day 3

Topic: Don'ts of a Computer room

- Do not press the computer keys roughly.
- Do not touch wires or cables of a computer.
- Never eat or drink anything on a computer table.
- Do not clean the computer or any part of a computer with water.
- Do not sit very close to the computer.
- If you face any problem do not try to fix it. Tell your parents/teacher to help you.
- Do not write on the keys of a keyboard.

Link for more information:

<https://www.youtube.com/watch?v=wHGfCn9yZGM&list=PLYIiWwLEK8vFQik3jxN6Gv03Iq39Hw3wj&index=7>

Worksheet 14

14: Answer the following questions.

1: Write down any 3 don't's of a computer.

Day 3

Topic: More about Paint



Link for more information: <https://www.youtube.com/watch?v=tLVs-xDVDds>

Worksheet 11

Q1. Write the short cut keys of the following:

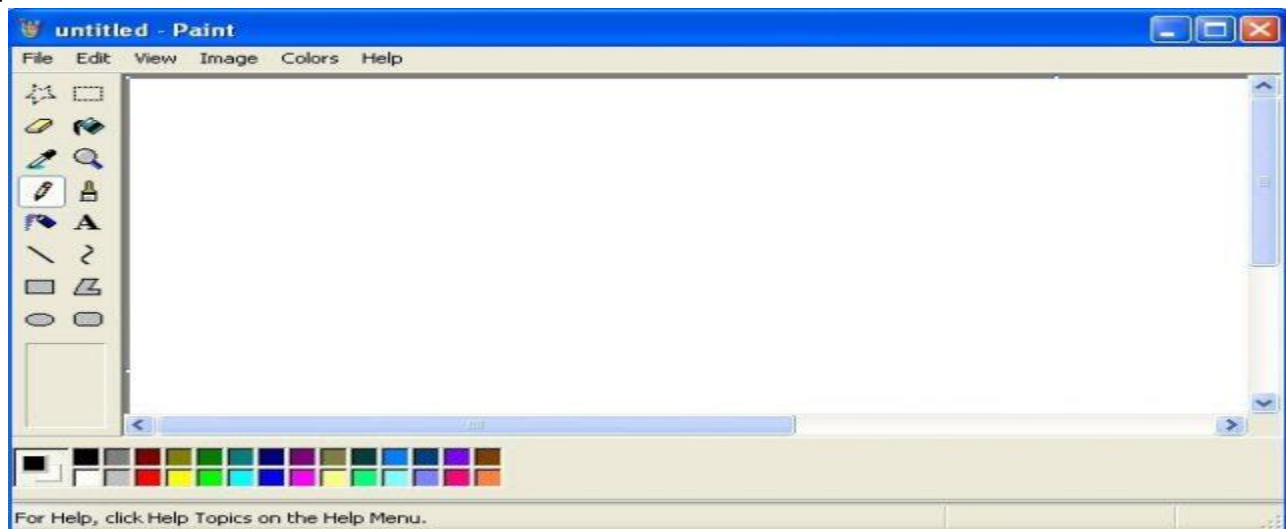
1. Copy
2. Repeat
3. Clear selection
4. Cut
5. Undo
6. Paste
7. Clear image

Q2. Write the steps to start a paint window.

Week 6

Day 1

Topic: More about Paint



Link for more information: <https://www.youtube.com/watch?v=tLVs-xDVDds>

Worksheet 12

Q1. Answer the following:

1. What is paint window used for?
2. Name the components of paint window.
3. what is the eclipse tool?
4. What is the brush tool used for?
5. What is the function of the eraser tool?
6. How can we magnify the images in paint?
7. Write down the steps to open a file?
8. What does the stretch/skew tool do?
9. What can you do using the invert colour tool?
10. How can you save an image?

Day 2

Topic: Data

Data are characteristics or information, usually numerical, that are collected through observation. In a more technical sense, data is a set of values of qualitative or quantitative variables about one or more persons or objects, while a datum (singular of data) is a single value of a single variable.

Data is available in raw form. It can be given to the computer through input devices. For example 4+5 give given to the computer it is a data. We use data to get answers of questions. We collect data from primary and secondary resources.

Link for more information: <https://www.youtube.com/watch?v=pg12U1BAoA>

Worksheet 15

15: Answer the following questions.

1: What is Data?

2: How can we give data to computer?

3. Why do we use data?

4. How do we collect data?

Week 7

Day 1

Topic: Introduction to Windows

Link for more information: <https://www.youtube.com/watch?v=otLJMe1eQyg&feature=youtu.be>

Worksheet 13

Q1. Fill in the blanks.

1. A computer needs _____ to do any work.
2. _____ operating system is user friendly software.

3. _____ is the windows screen upon which the icons, windows or dialog boxes are displayed.
4. The _____ icon gives the details of all that is present in the computer.
5. The instructions are given in the form of _____
6. The display that appears on your monitor screen is called the _____
7. _____ is computers software.
8. A group of programs used to carry out a task is called _____
9. Windows operating system is said to have _____
10. The _____ is a horizontal bar located at the bottom of windows desktop.
11. The small pictures on desktop are known as _____
12. A _____ is a rectangular area in which the contents of a program or a document are displayed.
13. _____ refers to the boundary of the window.
14. A _____ is the box that shows various options available for an action.
15. The _____ appears as a submenu in the programs.

Day 2

Topic: Introduction to Windows

Link for more information: https://www.youtube.com/watch?v=Zis5_BU0za4&feature=youtu.be

Worksheet 14

Q1. Write true or false.

1. An operating system interacts with the hardware and software present in the computer.
2. Icon is a rectangular box which provides various options related to an action.
3. Scroll bar contains the names of various menus.
4. Programs menu contains all the links required to the use of computer.
5. Accessories menu is at the top of the programs menu.

Q2. Match the following.

- | | |
|------------------------------|---------------------------|
| 1. Windows operating systems | an icon on the desktop |
| 2. Taskbar | graphical user interface |
| 3. Icons | an option in programs |
| 4. My documents | start button |
| 5. Accessories | small pictures on desktop |

Day 3

Topic: ALU

The **arithmetic and logic unit (ALU)** is where the CPU **performs the arithmetic and logic operations**. Every task that your computer carries out is completed in ALU. Even typing into a word processor involves adding binary digits to the file, and then calculating which pixels on the screen should change so that you can see the characters. The ALU's operations fall into two parts:

- The arithmetic part, which deals with calculations, eg $1 + 2 = 3$
- The logic part, which deals with any logical comparisons, eg $2 > 1$

Link for more information: https://www.youtube.com/watch?v=l_I4Fb7HCh4

Worksheet 20

Q: Fill in the blanks.

ALU stands for _____.

Arithmetic's part deals with _____.

Logic part deals with any _____ comparison.

ALU operations fall into _____ parts.

Every task that your computer carries out is completed in _____.

Q: Tick the correct answer.

ALU can be found in a monitor. _____

ALU stands for All logic unit. _____

ALU has two parts. _____

Every task that your computer carries out is completed in ALU. _____

Arithmetic's part deals with logics. _____

SOCIAL STUDIES

Week 1

Day 1

Ch: Long, Long Ago

- Use a dictionary to find the meaning of the words below.

Archaeology:

Lunar:

Prehistoric:

Tool:

Settlement:

Tame:

Bronze:

Copper:

- Imagine you are a cave child. Write a brief account of how you would spend your day. (Take the help of the given link)

Link: <https://youtu.be/8OsPkftcdZo>

Topic: Do you know

- Write the full form of the abbreviations. (Take the help of your book, page no 30)

AH: _____

AD: _____

BC: _____

- Draw a time line from the Stone Age until the present showing the ways in which man has acquired food.

(Topic: The stone age, The Metal age. Take the help of your book, page no 31)

Link: <https://www.youtube.com/watch?v=VECJJIEYTXw&list=TLPQMTQwNTlwMjAZvVxTYdpVBQ&index=1>

Day 2

Topic: The Stone Age

Cloze Exercise - Bronze Age

prehistoric	small	cooked	copper
cooking	tin	hole	boil
circles	metal	fire	water
jewellery	hengses	farming	tombs

Fill in the missing words from the word bank.

The **Bronze Age** was a time in early human history when people first started to use the _____ bronze. Bronze is a mixture of _____ and _____ and replaced stone as the best material for tools. People were able to use bronze to build stronger tools for _____ and also began to produce weapons and jewellery.



People in the Bronze Age built _____ made of standing stones called _____. Stonehenge in England is one of the most famous _____ monuments in the world. They also built new burial _____ that were often found under _____ mounds called round barrows. Bronze, flint, and stone tools have been found in the burials and also amber and bone _____.

Houses in the Bronze Age were often built in a round shape and had a _____ in the centre for warmth, light, and _____. When people cooked food they would dig a _____ in the ground and fill it with _____. Large stones were heated in a fire before being thrown into the water to make the water _____. This is how food was _____.

Topic: The Iron Age

The Iron Age

The **Iron Age** was given this name because it was a time when people began making things out of a metal called iron. Iron is a much stronger metal than bronze and it was used to make many things, including tools, weapons, and armour.



During the Iron Age, the Celts lived across most of Europe. They lived in roundhouses with thatched roofs made of straw with mud placed on top to keep the warmth in. Animals were kept inside at night and a fire was lit in the middle of the roundhouse for cooking and heating. There was a hole in the roof so that the smoke could escape.

Hillforts were built at the top of hills to protect the people of the village in times of attack. They were also used as a meeting place for people to exchange goods, livestock and services. The largest Iron Age hillfort in Britain today is Maiden Castle in Dorset.

The Iron Age Celts were very superstitious and believed in many gods. Many of the gods had no names but lived in woods and other places. People would throw offerings to the gods into lakes and rivers.

The Celts believed that the human soul had an afterlife. Warriors were buried with a sword or dagger, a shield, or a helmet. The Celts also believed that the soul lived inside the head which is why they collected the heads of their enemies killed in battles.



Questions

1. Which was better to use and make - bronze or iron?

2. When do you think it was better to live – Stone Age, Bronze Age or Iron Age? Give reasons.

3. Why do you think warriors were buried with their belongings?

Link: <https://youtu.be/rLFGra2TiTE>

Day 3

Topic: Personal hygiene:

Personal Hygiene

No. 5

Inspector Hygiene!

Investigate the personal hygiene habits of people around you.



Try to find 6 people in these categories who you could question: children, adolescents, adults, old people, pregnant women.

Then write their names in your exercise book.

Ask the Right Questions

To be able to compare answers, the class should all ask the same questions. Here are some suggestions.

Did you know? In some countries flannels are shaped like a glove!



Personal details

- Sex : Male Female
- How old are you:
 - Under 13 (child)
 - Between 13 and 18 (adolescent)
 - Between 18 and 60 (adult)
 - Over 60 (older person)

Body hygiene

- Do you take a shower / a bath:
 - every day
 - every other day
 - occasionally
- After the shower/the bath, do you:
 - change your clothes
 - put back on the same clothes
 - always use soap
 - wash with water only
- In the bath / the shower, do you:
 - always use soap
 - wash with water only

Clothes hygiene

- Do you change your clothes:
 - every day
 - twice a week
 - occasionally
- Do you change your underclothes:
 - every day
 - twice a week
 - occasionally

Hand hygiene

- Do you wash your hands
 - before every meal
 - when they are dirty
 - after going to the toilet
 - after blowing your nose
 - when you come home
 - not very often
- Answer Yes / No to the following statements:
 - . I wash my hands with soap _____.
 - . I lather with soap for at least 30 seconds _____.
 - . I wash my hands in cold water _____.
 - . I wash my hands in warm water _____.
 - . I always dry my hands with a clean and dry towel _____.
 - . Everyone in my family has their own towel _____.
 - . I cut my nails regularly _____.

Nasal hygiene

- When you blow your nose, do you use:
 - a paper handkerchief
 - a linen handkerchief

Week 2

Day 1

Ch: Alama Iqbal

- Write a character sketch of Allama Iqbal in your own words. with the help of these headings.
 - a. His personality
 - b. His famous books
 - c. His ideas
 - d. His professions
 - e. His titles.

- Describe in your own words Allama Iqbal's contribution to the establishment of Pakistan.

(Take the help of the given link)

Link: <https://youtu.be/T68dgyNdvP8>

- Put the following information about Allama Iqbal into chronological sequence.
 - _____ He received his early education in Sialkot.
 - _____ He worked as a lawyer in Lahore after completing his studies.
 - _____ He completed his doctorate in Germany and studied law in England.
 - _____ He died on 21st November 1938.
 - _____ Allama Iqbal went to Europe for higher education.
 - _____ He presented the idea of a separate homeland for Muslims in India at _____ Allahabad 1930.
 - _____ Allama Iqbal was born on 9th November 1877.
 - _____ He gained an M.A in philosophy from Punjab University.
- Read some of the poetry of Allama Iqbal and learn a section of one of the poem by heart. Write a short introduction to your passage to explain which poem it was taken from, its theme, and why you have chosen it.

Link: <https://youtu.be/1p-UWzVGNXY>

Day 2

- Write the name of your national hero and write his / her any of the one quality.

MY hero is

Day 3

Activity:

Read the poem of Allama Iqbal “Shahid ki Makhi” and take out the main theme of the poem.

Link: <https://youtu.be/M6AqLoAUvgY>

Friday 12th June 2020:

Topic: General Knowledge

(take the help of the given links)

- What was the name of Allama Iqbal’s father?
- Who wrote the poem Shahid ki Makhi?
- Who is national poet of Pakistan?
- What was the profession of Allama Iqbal?
- The most work of Muhammad Iqbal is in which language?

Week 3

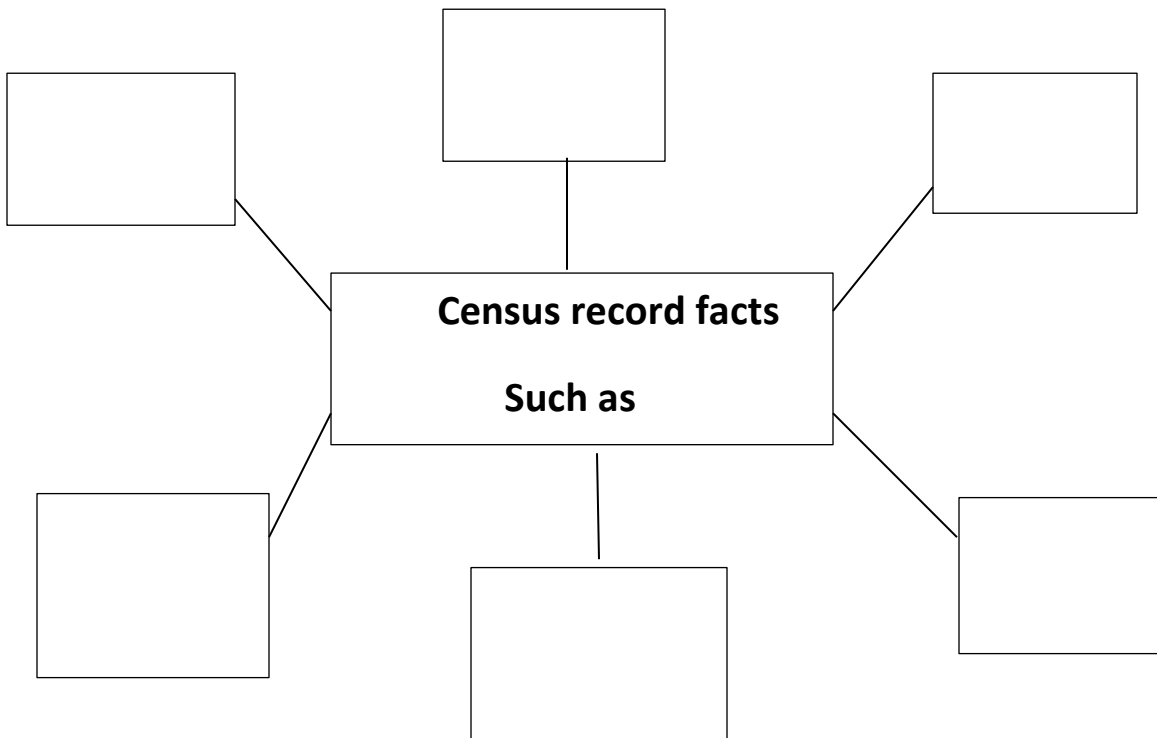
Day 1

Chapter no 3: Population Topic: Census

- In the space below give reasons for the high population growth in Pakistan. (Take the help of your book, page no 10)

Link: <https://youtu.be/EvTt6RNKbAs>

- Complete the word webs. (, Take the hep of your book, page no 9)



- Discuss with family members and friends that why has your family chosen to live in a particular province? Write your answer briefly.
(Take the help of your book, page no 9 – 12)

Day 2

From your Atlas chose 5 countries. Find the area and population of each.

Ser	Country	Area	Population
1			
2			
3			
4			
5			

Work Sheet

Color the correct statement green.

There is no desert in the province of Punjab

The Potohar plateau lies in Punjab

The land of Punjab province

There are snow peak mountains in Punjab

The salt range is to the north of Indus Plain

The land of Punjab province is very fertile

Link: <https://youtu.be/ayBByVpyUDI>

<https://youtu.be/Lja4IME-cFA>

Day 3

Topic : Good Habits

HAND WASHING WORD SCRAMBLE

Unscramble the words below. Try not to use the hints.

	Hints	Answer:
MGSER	These are what make you sick.	_____
SVURI	This is one type of germ.	_____
DSNHA	What you should always wash.	_____
TRWAE	What you wash your hands with.	_____
SAPO	This helps to eliminate germs.	_____
SEAIDSE	What germs can cause.	_____
CIBAEATR	This is another type of germ.	_____
TLEHAHY	Washing your hands can keep you _____	_____



Week 4

Day 1

Topic: Mohenjodaro, Harappa

- Locate and mark the four early civilizations of Pakistan.



- Read the topic, which is given in your book about the old civilization of Mohenjo Daro and Harappa. And write down the similarities between these civilizations.

(Take the help of your page no 36 -37)

Link: <https://youtu.be/mi9sMazNPxM>

- Certain objects excavated from the archaeological sites mentioned in this unit are still in use in our villages. Find out what these are and where they are being used today.

(Take the help of your page no 35 -37)

- Put the following time period and civilization in chronological order, according to the findings of the archaeologists. Start with the oldest.

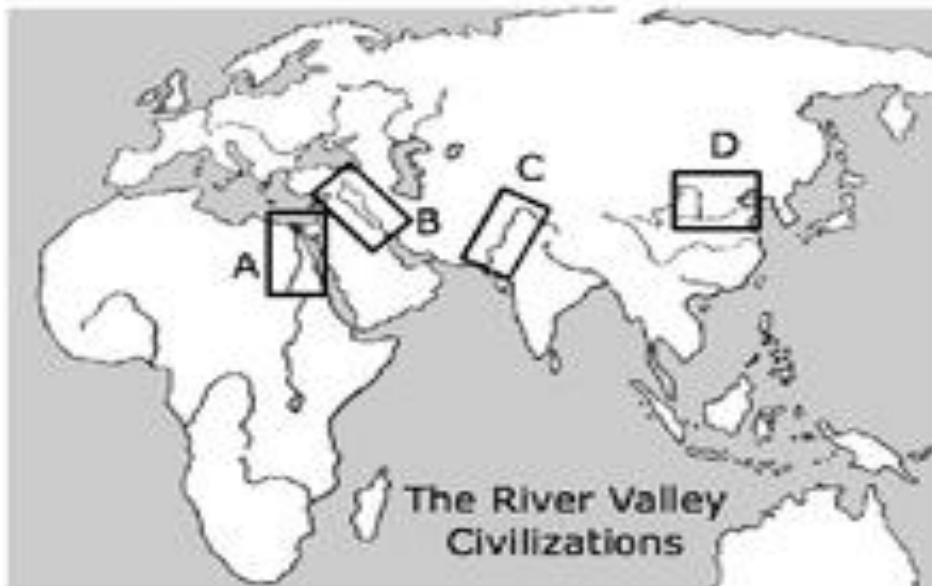
Harrapa	Bronze Age	Mehrgarh	Iron Age
Soan Villey	Mohenjo Daro		Stone Age

	()
	()
	()
	()
	()
	()
	()

Link: <https://youtu.be/JIMe0KiS2A8>

Day 2

Name the statue and color it.



- Write the name of each civilization below (Take the help of given link)

A: _____

B: _____

C: _____

D: _____

Link: [Indus Valley Civilization: Harappa & Mohenjo-Daro - Video & Lesson Transcript | Study.com](https://www.study.com/lesson/indus-valley-civilization-harappa-mohenjo-daro)

Link: <https://youtu.be/VECJJIEYTXw>

Day 3

Topic: Good Habits

Name: _____

Germs



Do germs make people sick?



Yes



No

Can you see germs?



Yes



No

Where are germs found?

1. _____

2. _____

What can I do to help not spread germs?

1. _____

Week 5

Day 1

Topic: Hakim Mohammad Saeed pg# 50-51

- List five aspects of Hakim Mohammad Said's character
- Do you think Hakim Mohammad said possessed any heroic qualities? Give reasons for your answer.
.(Take help of your book, page no 50)

Topic: pg# 50-51

- Write down the names of books and magazines that were published by Hakim Mohammad Said.
(Take help of your book, page no 50 – 51 and take help from given link also)
Link: https://www.youtube.com/watch?v=qGm_Cdd4KUQ

Topic: pg# 50-51

Worksheet

Join the two parts to complete the sentences below.

Hakim said's father	Tibb college in 1940
Hakim Said was born in	medicines to the poor
Hakim Said come to Pakistan	was also a Hakim
He graduate from	eighteen hours a day
He loved	in 1947, leaving all his belongings behind
He worked for	children dearly
He provided free	Delhi in 1920

Link: <https://www.youtube.com/watch?v=1nMtkqhFbF0>

Day 2

Topic: Ethical values



Name: _____

Be Your Best

For each of the words below, state what it means to you and provide an example of how you have demonstrated it. Use the back of this page if needed.

Apologetic _____

Courteous _____

Accepting _____

Empathetic _____

Inclusive _____

Responsible _____

Link: <https://youtu.be/tkwagbjG1>

Day 3

Topic: Ethical values

Activity:

Self-Care Worksheet FINDING BALANCE IN MY LIFE

<p>MIND</p> <p>CURRENT PRACTICE</p> <p>NEW PRACTICE</p>	<p>BODY</p> <p>CURRENT PRACTICE</p> <p>NEW PRACTICE</p>
<p>EMOTIONS</p> <p>CURRENT PRACTICE</p> <p>NEW PRACTICE</p>	<p>SPIRIT</p> <p>CURRENT PRACTICE</p> <p>NEW PRACTICE</p>

Week 6

Day 1

Topic: Physical features of Pakistan Pg 4-7

- Fill in the chart below by writing the names of the landforms that are present in each province.

	Sindh	Baluchistan	Punjab	KPK
Mountain				
Rivers				
Deserts				
Lakes				
Plateaus				
Coastline				

(, Take help from your book, page no 4 -7)

- Name the main cities, passes, dams, mineral found, crops that grow, and things produced by the industries in your province.

Topic: Physical features of Pakistan Pg 4-7

- On an outline map of your province, mark and label its physical features. Take the help of your book, page no 6

Day 2

Topic: Physical features of Pakistan Pg 4-7

<https://www.youtube.com/watch?v=wYRJ5OW8W5A>

https://youtu.be/_1s2k1WOblq

Name _____

Grade _____



61

PAKISTAN

A Your opinion

What do you know about Pakistan?

Pakistan is a sovereign state in south Asia which has a coastline along the Arabian Sea and the Gulf of Oman. It is the sixth most populous country in the world with over 170 million inhabitants. Pakistan gained independence from Britain in 1947, after a struggle led by Mohammad Ali Jinnah. In 1971, an armed conflict resulted in the creation of Bangladesh. Pakistan is a federal parliamentary republic consisting of four provinces and four federal territories. It has the seventh largest standing army. Pakistan is the second most populous Muslim-majority country and about 97 percent of the Pakistanis are Muslims. Pakistani cuisine is rich in flavour and a blend of cooking traditions which can make it highly seasoned and spicy.

D Answer the questions.

B Yes/No questions.

1 Pakistan is a sovereign state.

2 It has a coastline.

C True or False.

1. It borders the Arabian Sea.
2. It is populous.
3. Pakistan has three provinces.
4. Pakistanis are Christians.
5. Pakistani cuisine is spicy.

<input type="radio"/>	<input type="radio"/>
<input type="radio"/>	<input type="radio"/>
<input type="radio"/>	<input type="radio"/>
<input type="radio"/>	<input type="radio"/>
<input type="radio"/>	<input type="radio"/>

1 What is Pakistan's population?

2 When did it gain independence?

3 What happened in 1971?

4 What does the republic consist of?

5 What is the religion?

6 How is Pakistani cuisine?

Day 3

Fill the given work sheet with the help of some facts about Pakistan.



Country Fact Sheet



<p>Capital City:</p> <p>Population:</p> <p>Terrain:</p> <p>Climate:</p> <p>Natural Resources:</p> <p>Type of Government:</p> <p>Bordering Countries:</p>	<p>Map:</p>	
<p>Holidays and Traditions:</p>	<p>Famous people:</p>	<p>Famous landmarks:</p>
<p>Foods:</p>		

Layers-of-Learning.com

Link: <https://youtu.be/StTzBUFUgE4>

Week 7

Day 1

Topic: Responsibilities

- What is your main responsibility as being a good citizen of Pakistan. Write in your own words.
(Take the help of your book, page no 53)
- Discuss with family members and friends that what is the difference between a rights and responsibilities? Write in your own words
(Take the help of your book, page no 52-53)
- Students to ask their family members that rights they believe are important in the family home. What is your main responsibility as being a good citizen of Pakistan. Write in your own words

Link: <https://www.youtube.com/watch?v=LKCtzuvBZPc>

Worksheet

My Responsibilities	
At Home	At School
To Myself	In My Community
When I think about responsibilities, I feel....	

Link: <https://www.youtube.com/watch?v=a2-QL59pVRo>

Day 2

Worksheet

NAME: _____

A GOOD CITIZEN

Read the examples of good and bad citizenship. Write good or bad in the blanks below.

1. Hold the door for someone. _____
2. Breaking classroom rules. _____
3. Pick up trash in the park. _____
4. Taking someone else's lunch money. _____
5. Disrespect the U.S. flag. _____
6. Help your parents clean the house. _____
7. Destroy someone else's property. _____
8. Help an elderly neighbor with their chores. _____
9. Bullying children on the playground. _____
10. Follow rules at home, school, and your community. _____


© 2015 by Pearson Education, Inc.

Links: <https://youtu.be/nTmWBCTWT1c>

<https://youtu.be/DA6QAdK0mtA>

Day 3

Topic: Personal Hygiene:




<http://www.chartjungle.com>

Daily Hygiene Chart

For Teens

What To Do	S	M	T	W	T	F	S
Morning							
Bath/Shower or Wash Face							
Shave if needed							
Put on Deodorant							
Put on Clean Clothes							
Brush Hair							
Eat Breakfast							
Brush Teeth							
Make Bed							
Evening							
Bath/Shower or Wash Face							
Put on Pajamas							
Brush Teeth							
Sometime each day							
Exercise							
Sometime each week							
Cut Nails							



Link: <https://youtu.be/cWZqain41w>

اسلامیات

سیلیبس پہلا ہفتہ

عزیز طلبہ اس ہفتے کا کام آپ کو دی گئی ہدایات کے مطابق مکمل کرنا ہے۔

سرگرمی	ذرائع	گھر کا کام	صفحہ نمبر	عنوان	تاریخ
ناظرہ قرآن مجید پارہ نمبر 1 تا 3 کی پڑھائی کریں	کتابی مواد ورک شیٹ	حفظ قرآن مجید آیتہ الکرسی، سورہ العصر، سورہ الکوثر	4، 3	القرآن الکریم	1 جون 2020
		حفظ و ترجمہ سورہ الاخلاص، دعائیں، درود ابراہیمی	6، 5	القرآن الکریم	جون 2020
		بلند خوانی مشق: 2، 3 خالی جگہ پر کریں کالم ملائیں مشق: 1 مختصر جوابات اتا ہ لکھیں۔	8، 7	ایمانیات و عبادات عقائد	3 جون 2020

ورک شیٹ نمبر 1

جماعت چہارم

* خالی جگہ پر کریں۔

ا: کسی بات کو دل سے تسلیم کرنا اور زبان سے اقرار کرنا _____ کہلاتا ہے۔

ب: مومن کی پہچان بنیادی اسلامی _____ پر پختہ ایمان ہے۔

ج: اسلام کے بنیادی ارکان کو ماننا اور پورا کرنا _____ کہلاتا ہے۔

د: دنیا ----- کی کہیتی ہے۔

ہ: قیامت کے روز تمام انسان ----- کے حکم سے دوبارہ زندہ کئے جائیں گے۔

* درست اور غلط جملوں کا انتخاب کریں۔

غلط	درست

ا: الہامی کتابیں پانچ ہیں۔

ب: آخرت کے روز حضرت میکائیلؑ اللہ تعالیٰ کے حکم سے صور پھونکیں گے۔

ج: دوزخ انتہائی تکلیف دہ جگہ ہے۔

د: دنیا کی زندگی ہمیشہ کے لئے ہے۔

ہ: جس نے دنیا میں نیک کام کئے اسے جنت میں داخل کیا جائے گا۔

سیلیبس دوسرا ہفتہ

سرگرمی	ذرائع	گھر کا کام	صفحہ نمبر	عنوان	تاریخ
زکوٰۃ کے فوائد پر مشتمل چارٹ بنائیں	کتابی مواد	بلند خوانی	12	ارکان اسلام زکوٰۃ	8 جون 2020
		بلند خوانی	13	ارکان اسلام زکوٰۃ	9 جون 2020
	ورک شیٹ	مشق: 1 مختصر جوابات ا تا ہ لکھیں۔ مشق: 2 درست جواب کا انتخاب مشق: 3 خالی جگہ پر کرنا۔	14	ارکان اسلام زکوٰۃ	10 جون 2020

عزیز طلبہ اس ہفتے کا کام آپ کو دی گئی ہدایات کے مطابق مکمل کرنا ہے۔

ورک شیٹ نمبر 2
جماعت : چہارم

زکوٰۃ کا مختصر تعارف لکھیں۔

سیلیبس تیسرا ہفتہ

عزیز طلبہ اس ہفتے کا کام آپ کو دی گئی ہدایات کے مطابق مکمل کرنا ہے۔

تاریخ	عنوان	صفحہ نمبر	گھر کا کام	ذرائع	سرگرمی
15 جون 2020	اللہ تعالیٰ کے حقوق	16، 17	بلند خوانی		
16 جون 2020	اللہ تعالیٰ کے حقوق	18	مشق: 1 مختصر جواب لکھیں الف تا ہ مشق: 3 خالی جگہ پر کریں۔	کتابی مواد ورک شیٹ	اللہ تعالیٰ کے حقوق کا خاکہ بنانا۔

		<p>مشق: 2 درست جواب پر نشان لگائیں۔</p> <p>مشق: 4 درست کالم کا انتخاب کریں۔</p>	18،19	اللہ تعالیٰ کے حقوق	17 جون 2020
--	--	---	-------	---------------------	-------------------

ورک شیٹ نمبر 3

جماعت چہارم

سوال: اللہ تعالیٰ کے حقوق کے بارے میں قرآنی آیات کا ترجمہ لکھیں۔

اللہ کے احسانات کے نام لکھیں ،

1: -----

2: -----

3: -----

4: -----

5: -----

سیلیبس چوتھا ہفتہ

عزیز طلبہ اس ہفتے کا کام آپ کو دی گئی ہدایات کے مطابق مکمل کرنا ہے۔

تاریخ	عنوان	صفحہ نمبر	گھر کا کام	ذرائع	سرگرمی
22 جون 2020	بندوں کے حقوق	20،21	بلند خوانی		
23 جون 2020	بندوں کے حقوق	21 22	بلند خوانی مشق: 2 خالی جگہ پر کرنا۔	کتابی مواد	پڑوسیوں کے حقوق سے متعلق اپنا ذاتی تجربہ کہانی کی شکل میں لکھیں
24 جون 2020	بندوں کے حقوق	23	مشق: 1 مختصر جوابات لکھیں۔ الف تا ہ مشق: 3،4 درست جواب کا انتخاب کرنا، کالم ملائیں۔	ورک شیٹ	

ورک شیٹ نمبر 4

جماعت چہارم

کالم الف کو کالم ب سے ملائیں۔

کالم الف

ا: والدین کے ساتھ

ب: اولاد کا حق ہے کہ ان کی

ج: یتیموں کا حق ہے کہ ان کے ساتھ

د: رشتے داروں کا حق ہے کہ

ہ: بندوں کے حقوق میں سب سے زیادہ تاکید

کالم ب

شفقت سے پیش آئیں

احسان کرو

اچھی تربیت کی جائے

والدین کے حقوق کی ہے

ان سے اچھا سلوک کیا جائے

والدین کے حقوق سے متعلق قرآنی آیات کا ترجمہ لکھیں۔

سیلیبس پانچواں ہفتہ

عزیز طلبہ اس ہفتے کا کام آپ کو دی گئی ہدایات کے مطابق مکمل کرنا ہے۔

سرگرمی	ذرائع	گھر کا کام	صفحہ نمبر	عنوان	تاریخ
پہلی وحی کی آیات زبانی یاد کر کے خوشخط لکھیں	کتابی مواد ورک شیٹ	بلند خوانی	25	سیرت طیبہ	29 جون 2020
		بلند خوانی مشق: 2 خالی جگہ پر کریں	26 ، 27	سیرت طیبہ 1 نزول وحی	30 جون 2020
		مشق: 1 سوالات کے جوابات لکھیں۔ الف تا ہ مشق: 3، 4 درست جواب کا انتخاب۔	28	سیرت طیبہ	1 جولائی 2020

ورک شیٹ نمبر 5

جماعت چہارم

سیرت طیبہ پر نوٹ لکھیں۔

سیلیبس چھٹا ہفتہ

عزیز طلبہ اس ہفتے کا کام آپ کو دی گئی ہدایات کے مطابق مکمل کرنا ہے۔

تاریخ	عنوان	صفحہ نمبر	گھر کا کام	ذرائع	سرگرمی
6 جولائی 2020	سیرت طیبہ ﷺ 2 دعوت اسلام	30	بلند خوانی	کتابی مواد ورک شیٹ	اولین اسلام قبول کرنے ولے صحابہ کرام کے نام خوشخط لکھیں
7 جولائی 2020	سیرت طیبہ ﷺ 2 دعوت اسلام	31	بلند خوانی مشق: 1 سوالات کے جوابات الف، ب، ج، د، ہ		
8 جولائی 2020	سیرت طیبہ ﷺ 2 دعوت اسلام	32	مشق: 2 درست جواب کا انتخاب کریں۔		

ورک شیٹ نمبر 6

سوال: مختصر جوابات لکھیں۔

نزول وحی کے بعد کتنے سال تک حضور ﷺ نے خفیہ تبلیغ کو جاری رکھا۔

جواب _____

نزول وحی کے فوراً بعد کس کس سے اسلام قبول کیا۔

اعلانہ تبلیغ کے بعد قریش کا کیا رد عمل تھا؟

سیلیبس ساتواں ہفتہ

سرگرمی	ذرائع	گھر کا کام	صفحہ نمبر	عنوان	تاریخ
صحابہ کرامؓ کی چابت قدمی کے واقعات زبانی یاد کریں	کتابی مواد ورک شیٹ	بلند خوانی	34	سیرت طیبہ ﷺ 3۔ قریش کی مخالفت اور آپ ﷺ کی چابت قدمی	13 جولائی 2020
		مشق: 1 سوالات کے جوابات الف تا ہ	35	سیرت طیبہ ﷺ 3۔ قریش کی مخالفت اور آپ ﷺ کی چابت قدمی	14 جولائی 2020
		مشق: 2 خالی جگہ پر کریں	36	سیرت طیبہ ﷺ 3۔ قریش کی مخالفت اور آپ ﷺ کی چابت قدمی	15 جولائی 2020

عزیزطلبہ اس ہفتے کا کام آپ کو دی گئی ہدایات کے مطابق مکمل کرنا ہے۔

ورک شیٹ نمبر 7

جماعت چہارم

سوال: خالی جگہ پر کریں۔

- 1: اب ﷺ کو صادق و _____ کہا جاتا تھا ،
- 2 حضرت بلالؓ امیہ بن خلف کے _____ تھے ۔
- 3: قریش حضرت محمد ﷺ کو شاعر اور _____ کہتے تھے
- 4: قریش مکہ _____ کو پوجتے تھے ۔
- 5: _____ میں 360 بت رکھے ہوئے تھے ۔

سوال: درست جملوں کا انتخاب کریں۔

- 1 قریش مکہ کو اپنے باب دادا کا دین جھوٹ نا اچھا لگتا تھا ۔
- 2: صحابہ کرامؓ نے جابت قدمی کا مظاہرہ کیا
- 3: کفار مکہ نے اپنی جہالت کی بنا پر اسلام قبول کیا ۔
- 4: کچھ لوگ تکبر کی وجہ اسلام قبول نہیں کر رہے تھے ۔

غلط	درست

Urdu

سیلیبس پہلا ہفتہ

جماعت: چہارم

عزیز طلبہ اس ہفتے کا کام آپ کو دی گئی ہدایات کے مطابق مکمل کرنا ہے۔

<u>تاریخ</u>	<u>عنوان</u>	<u>صفحہ نمبر</u>	<u>گھر کا کام</u>	<u>ذرائع</u>	<u>سرگرمی</u>
1 جون 2020	شکر تیرا خدایا!	1	بلند خوانی، مشکل الفاظ کی آملا،		
2 جون 2020	شکر تیرا خدایا! تذکیر و تانیث	2	مشقی سوالات 1،2 دیئے کئے مذکر کے مونث لکھیں (مور، ہاتھی، چچا، ابا، مینڈھا، سنار، موجی، استاد، بیٹا، برن)	کتابی مواد، ورک شیٹ	حمد میں اللہ کی نعمتوں میں سے پانچ کی تصاویر چارٹ پر بنائیں اور رنگ بھریے۔
3 جون 2020	شکر تیرا خدایا!	2 تا 3	مشقی سوالات 3،4 نئے ہوئے الفاظ سے پہلے مناسب صفات استعمال کریں (آسمان، پہاڑ، درخت، پھل، سورج، زمین، دریا، پودا، پھول، رات)		

ورک شیٹ نمبر 1

جماعت: چہارم

اسم صفت :

وہ لفظ جو کسی بھی اسم کی اچھائی، برائی، حالت، تعداد یا مقدار کو ظاہر کرے، اسم صفت کہلاتا ہے۔

مثلاً نیک لڑکا، چار مرغیاں، پرانی گاڑی، ایک لیٹر دودھ

اس میں نیک، چار، پرانی اور ایک لیٹر اسم صفت ہیں۔

اسم موصوف :

جس اسم کی اچھائی، برائی، حالت، تعداد یا مقدار بیان کی جاتی ہے، اسے اسم موصوف کہتے ہیں۔

مثلاً نیک لڑکا، چار مرغیاں، پرانی گاڑی، ایک لیٹر دودھ

اس میں لڑکا، مرغیاں، گاڑی، اور دودھ اسم موصوف ہیں۔

سیلیبس دوسرا ہفتہ

جماعت: چہارم

عزیز طلبہ اس ہفتے کا کام آپ کو دی گئی ہدایات کے مطابق مکمل کرنا ہے۔

سُرگرمی	ذرائع	گھر کا کام	صفحہ نمبر	عنوان	تاریخ
اردو اخبار کے تراشے چارٹ پر چسپاں کریں۔	کتابی مواد، ورک شیٹ	بلند خوانی، مشکل الفاظ کی املا،	4 تا 5	سارے کام کون کر جاتا تھا؟	8 جون 2020
		مشکل الفاظ کے معانی (امیر المومنین، خلیفہ، معمول)	5	سارے کام کون کر جاتا تھا؟	9 جون 2020
		مشقی سوالات، سوال 1 تا 6 لقب کی تعریف اور مثالیں، (ورک شیٹ)	6	سارے کام کون کر جاتا تھا؟ قواعد	10 جون 2020

ورک شیٹ نمبر 2

جماعت: چہارم

لقب:

کسی شخص کی خوبی یا خاص عادت کی وجہ سے اسے جس خاص نام سے پکارا جائے وہ نام " لقب " کہلاتا ہے۔

مثلاً حضرت ابو بکر کا لقب "صدیق" ہے۔ صدیق کے معنی سچ بولنے والے کے ہیں۔

س: دینے گئے القاب میں سے درست لقب چُن کر سامنے لکھیں۔

القاب:

شیر خدا	سیف اللہ	غنی	فاروق
خلیل اللہ	روح اللہ	کلیم اللہ	ذبیح اللہ

انبیا	لقب
حضرت ابراہیم	
حضرت موسیٰ	
حضرت اسماعیل	
حضرت عیسیٰ	

صحابہ کرام	لقب
حضرت عمر	
حضرت عثمان	
حضرت علی	
حضرت خالد بن ولید	

سوال: جملوں میں سے صفت کو پہچان کر سامنے لکھیے۔

نمبر شمار	جملے	صفت
۱-	یہ جنگل بے حد گھنا ہے۔	
۲-	حضرت عمر فاروق کا عدل مشہور ہے۔	
۳-	کل میں نے بازار میں ایک لنگڑا فقیر دیکھا۔	
۴-	تمہاری لکھائی بہت اچھی ہے۔	
۵-	دبی بہت کھٹا ہے۔	
6 -	قرآن پاک میں تیس پارے ہیں۔	

سوال: جملوں میں سے موصوف کو خط کشیدہ کریں۔

1: میری امی مزے دار کھانا پکاتی ہیں۔

2: میں نے سکول میں شان دار تقریر کی۔

3: ہماری استانی بہت اچھی ہیں۔

4: صائمہ کی بلی کالی ہے۔

5: حمزہ کو لال کتاب پسند ہے۔

س: لقب کو درست شخصیت سے ملائیے۔

القاب	شخصیات
قائد ملت	محترمہ فاطمہ جناح
قائد اعظم	علامہ اقبال
مادر ملت	ڈاکٹر عبدالقدیر خان
محسن پاکستان	محمد علی جناح
شاعر مشرق	لیاقت علی خان

سیلیبس تیسرا ہفتہ جماعت: چہارم

عزیز طلبہ اس ہفتے کا کام آپ کو دی گئی ہدایات کے مطابق مکمل کرنا ہے۔

تاریخ	عنوان	صفحہ نمبر	گھر کا کام	ذرائع	سرگرمی
15 جون 2020	قائد ملت	9 تا 10	بلند خوانی، مشکل الفاظ کی املا،	کتابی مواد، ورک شیٹ	دنے گئے نکات کی مدد سے قائد ملت لیاقت علی خان کا سوانحی خاکہ مکمل کیجیے۔ (اصل نام، لقب، ولادت، بچپن کے مشاغل، تعلیم، پاکستان کی خدمت، اہم عادات، وفات، آخری الفاظ، آخری آرام گاہ)
16 جون 2020	قائد ملت قواعد	11 تا 13	مشکل الفاظ کے معنی (لگاؤ، محبوب مشغلہ، تکیہ کرنا، فلاح، خوش اسلوبی سے، ثابت قدمی، پہلو) سوال نمبر 4 خط کشیدہ لفظ کی جمع بنا کر جملے دوبارہ لکھیں۔		
17 جون 2020	قائد ملت	12 تا 13	دینے گئے الفاظ کو جملوں میں استعمال کریں (خدمت، رہنما، مشغلہ، خوش اسلوبی، احترام) مشقی سوالات		

ورک شیٹ نمبر 3

جماعت: چہارم

تحریری تقبیم

کسی بھی عبارت کی تفہیم کے پانچ اصول

اگر آپ کے لئے عبارت میں کوئی بھی لفظ مشکل نہیں تو بہت اچھی بات ہے۔ اگر کچھ لفظ مشکل ہیں تو ان الفاظ یا جملوں کو خط کشید کر لیجئے۔



مشکل الفاظ کو نظر انداز کر کے اس عبارت کا مفہوم سمجھنے کی کوشش کیجئے۔



تفہیم کے لئے دی گئی عبارت میں کچھ الفاظ ایسے ہوتے ہیں جو ایک سے زیادہ معانی رکھتے ہیں اور سوال کا جواب دینے کے لئے ان الفاظ کے معانی کا پتا ہونا بھی ضروری ہوتا ہے۔ چنانچہ ان الفاظ کا مطلب ان کے سیاق و سباق میں سمجھنے کی کوشش کرتے ہیں۔



بعض اوقات دی گئی عبارت میں کچھ ایسے محاورات استعمال کئے گئے ہوتے ہیں جن کے مطلب سے ہم واقف نہیں ہوتے لیکن پوری عبارت کے مفہوم کو سمجھنے کے لئے ان محاورات کو سمجھنا ضروری ہوتا ہے۔ ایسے مواقع پر ان محاورات کا مفہوم عبارت یا متن کے مجموعی مفہوم، بارود گرد کے جملوں یا الفاظ کی مدد سے سمجھنے کی کوشش کرتے ہیں۔



بعض مشکل الفاظ میں ایک آسان سا لفظ چھپا ہوتا ہے۔ اگر اسے تلاش کر لیا جائے تو اس مشکل لفظ کا مطلب بھی سمجھ میں آجاتا ہے۔



عبارت

عید کا دن تھا۔ مدینہ میں بڑی رونق تھی۔ بچے گلی کوچوں میں اونٹ کی سواری کر رہے تھے۔ حضرت محمد ﷺ اپنی بیٹی حضرت فاطمہؓ سے ملنے ان کے گھر گئے تو دیکھا کہ ان کے دونوں بیٹے امام حسینؓ اور امام حسنؓ اُدا س بیٹھے تھے۔ وہ پوچھی تو بتایا کہ "نا مدینہ کے سب بچے اونٹ کی سواری کر رہے ہیں اور ہمارے پاس کوئی اونٹ نہیں ہے سواری کرنے کے لیے"۔ آپ ﷺ نے ایک نوا سے کودائیں اور دوسرے نوا سے کوبائیں کندھے پر بٹھایا اور گلی میں سیر کروانے لگے۔ گلی میں سے حضرت ابو بکرؓ گزرے۔ آپ ﷺ کو بچوں کی سواری بننے دیکھ کر مسکرائے اور بچوں کو خوش کرنے کے لیے بولے "واہ! شہزادوں آپ کی سواری تو بہت خوب ہے"۔ آپ ﷺ بھی مسکرا کر بولے "یہ بھی کہو کہ سواری کرنے والے بھی بہت خوب ہیں"۔

1- آپ ﷺ سے امام حسینؓ اور امام حسنؓ کا کیا رشتہ تھا؟

2- دونوں بچے کیوں ادا س تھے؟

3- آپ ﷺ نے دونوں نوا سوں کو کس طرح خوش کیا؟

4- حضرت ابو بکرؓ نے بچوں سے کیا کہا؟

5- عبارت سے سب سے زیادہ تلاش کر کے لکھیں۔

سیلیبس جوتھا ہفتہ

جماعت: چہارم

عزیز طلبہ اس ہفتے کا کام آپ کو دی گئی ہدایات کے مطابق مکمل کرنا ہے۔

سرگرمی	ذرائع	گھر کا کام	صفحہ نمبر	عنوان	تاریخ
پاکستان کے بارے میں دل چسپ معلومات اکٹھی کر کے تحریر کریں۔	کتابی مواد، ورک شیٹ	بلند خوانی، مشکل الفاظ کی املا،	15 تا 16	پیارا وطن	22 جون 2020
		مشکل الفاظ کے معانی۔ (خوش حالی، گلشن، چاہت، درس اخوت، برتر، کم تر، عہد) "میرا گاؤں" کے عنوان پر مضمون لکھیے۔	17	پیارا وطن قواعد و انشا	23 جون 2020
		مشقی سوالات، نظم کا جو بند آپ کو اچھا لگا ہو اس کی تشریح بحوالہ شاعر کریں	17 تا 18	پیارا وطن	24 جون 2020

ورک شیٹ نمبر 4

جماعت: چہارم

مضمون نگاری

لکھنے والی بات / مضمون نگاری کو ہرزبان میں بہت زیادہ اہمیت حاصل ہے۔ اگر مضمون لکھنے میں مہارت حاصل ہو تو کہیں بھی، کسی بھی موضوع پر اور کسی بھی مضمون کی صورت میں اچھی تحریر وجود میں لائی جاسکتی ہے۔

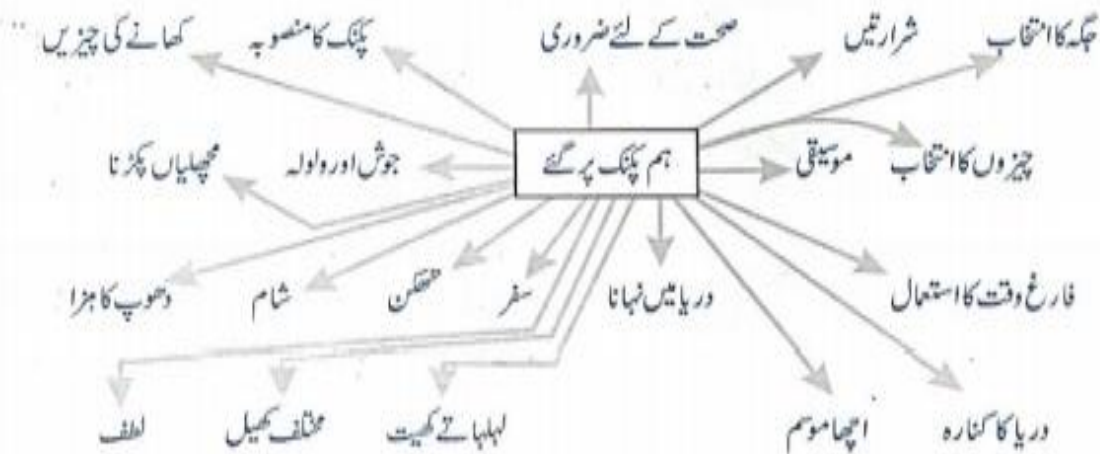
مضمون لکھنے کے مراحل

- ۱ موضوع کا انتخاب
- ۲ موضوع کے بارے میں سوچنا
- ۳ موضوع کے مطابق خیالات کا خاکہ بنانا
- ۴ خیالات کے خاکے کو ترتیب دینا
- ۵ خاکے کے مطابق مضمون لکھنا
- ۶ لکھے ہوئے مضمون کو کم از کم ایک دفعہ پڑھنا
- ۷ مضمون کی اصلاح کر کے اسے حتمی صورت دینا

آئیے! ابتدائی نکات کا خاکہ بنانا سیکھتے ہیں۔ اس کے لئے ضروری ہے کہ کسی کاغذ پر مضمون کا عنوان لکھ کر اس سے متعلق باتوں کو نکات کی صورت میں لکھا جائے اور بعد میں اسے ترتیب دیا جائے۔

کام

ذیل میں ”پکنگ“ کے حوالے سے اہم نکات دیئے گئے ہیں ان نکات کو غور سے پڑھئے، ان کے بارے سوچئے اور مزید نکات کا اضافہ کیجئے۔



س: اوپر دینے گئے نکات کو مد نظر رکھتے ہوئے " ہم پکنک پر گئے " کے عنوان پر چند سطریں لکھیے۔

سیلیبس یا نچوان ہفتہ

جماعت: چہارم

عزیز طلبہ اس ہفتے کا کام آپ کو دی گئی ہدایات کے مطابق مکمل کرنا ہے۔

تاریخ	عنوان	صفحہ نمبر	گھر کا کام	ذرائع	سرگرمی
29 جون 2020	میرا شہر	20 تا 21	بلند خوانی، مشکل الفاظ کی آملہ،	کتابی مواد، ورک شیٹ	دنے گئے نکات کی مدد سے اپنے شہر، گاؤں یا قصبے کے بارے میں لکھیے۔ (نام، صوبہ، ضلع، تحصیل، رقبہ، بڑا، چھوٹا، آبادی، قبل دید مقامات، بازار، تاریخی یا تفریحی مقامات، اہم عمارتیں، مسجد، سکول، وجہ شہرت)
30 جون 2020	میرا شہر قواعد و انشا	22	مشکل الفاظ کے معانی (قابل دید، مقامات، نمایاں، پر رونق، چہل پہل، بہلا، لطف اندوز ہونا، فضائی، ہوائی اڈا) " جھوٹ کی سزا " نتیجے کو مد نظر رکھتے ہوئے کہانی تحریر کریں۔		
1 جولائی 2020	میرا شہر	22 تا 24	مشقی سوالات، سوال 1 کمرہ جماعت سے پانچ بے جان مزر اور پانچ بے جان مونٹ تلاش کر کے لکھیے۔		

ورک شیٹ نمبر 5

جماعت: چہارم

س: واحد کے جمع اور جمع کے واحد تحریر کریں۔

جمع	واحد
اوقات	آیت
حادثات	خطرہ
ناظرین	حاضر

س: مذکر کے مونث، مونث کے مذکر خالی جگہ میں تحریر کریں۔

- ۱۔ چڑیا گھر میں ہاتھی اور _____ کا بہت خیال رکھا جاتا ہے۔
- ۲۔ رانی اور _____ دونوں رحم دل ہیں۔
- ۳۔ _____ اور نواسی دونوں با ادب ہیں۔
- ۴۔ _____ اور پری زاد دونوں سیر کر رہے ہیں۔

س: دینے گئے الفاظ کے درست مترادف پر نشان لگائیے۔

الفاظ	مترادف
راحت	خیال
ضروری	لازمی
دکھ	چوٹ
مال	خزانہ
خادم	نوکر
	سکون
	محنت
	تکلیف
	سرمایہ
	بیٹا

س: مندرجہ ذیل الفاظ کے متضاد دنیے گئے کالم میں سے چن کر لکھیں۔

حیوان	برائی	جواب	ویران	جیت
-------	-------	------	-------	-----

۱۔ کھیل میں ہار اور _____ تو ہوتی ہے۔

۲۔ زلزلے نے آباد گھروں کو _____ کر دیا۔

۳۔ والدین ہمیں _____ سے بچنے کے لیے بھلائی کی باتیں سمجھاتے ہیں۔

۴۔ اگر انسان علم حاصل نہ کرے تو _____ کی طرح زندگی گزارتا ہے۔

۵۔ استاد کے سوال پر شاگرد نے عمدہ _____ دیا۔

سیلیبس چھٹا ہفتہ

جماعت: چہارم

عزیز طلبہ اس ہفتے کا کام آپ کو دی گئی ہدایات کے مطابق مکمل کرنا ہے۔

تاریخ	عنوان	صفحہ نمبر	گھر کا کام	ذرائع	سرگرمی
6 جولائی 2020	تصویری تفہیم	27	ورک شیٹ	کتابی مواد، ورک شیٹ	تخلیقی لکھائی، فرض کیجیے آپ کا دوست بیمار ہے، آپ اس کی عیادت کے لئے جاتے ہیں، اس دوران ہونے والی گفتگو کو مکالمے کے انداز میں تحریر کریں۔
7 جولائی 2020	سورج کے فائدے قواعد و انشا	31 تا 32	بلند خوانی، مشکل الفاظ کی املا، والدہ صاحبہ کے نام امتحان کی تیاری کا خط لکھیے۔		
8 جولائی 2020	سورج کے فائدے	33	مشکل الفاظ کے معانی (دن چڑھنا، اسی کی بدولت، عنایت، کھیتیاں) مشقی سوالات		

سیلیبس ساتواں ہفتہ

جماعت: چہارم

عزیز طلبہ اس ہفتے کا کام آپ کو دی گئی ہدایات کے مطابق مکمل کرنا ہے۔

تاریخ	عنوان	صفحہ نمبر	گھر کا کام	ذرائع	سرگرمی
13 جولائی 2020	اردو گنتی	35	خاکہ مکمل کیجیے۔	کتابی	
14 جولائی 2020	قواعد	41 تا 42	دینے گئے جملوں سے اسم نکرہ اور اسم معرفہ تلاش کر کے لکھیے۔ دینے گئے الفاظ کے متضاد لکھیے۔ (آسان، آزاد، اقرار، ازل، بہار، اصل، اندر، اتار، جابل، جنگ)	مواد، ورک شیٹ	صفحہ نمبر 43 پر دینے گئے جال کی مدد سے اپنے پسندیدہ پہل کے بارے میں لکھیے۔
15 جولائی 2020	قواعد و انشا	--	"چڑیا گھر کی سیر" کے عنوان پر مضمون لکھیے۔ درخواست برائے فیس معافی لکھیے۔		

ورک شیٹ نمبر 7

جماعت: چہارم

اسم معرفہ اور اسم نکرہ

اسم معرفہ

وہ اسم جو کسی خاص شخص، چیز یا جگہ کے نام کو ظاہر کرے، ”اسم معرفہ“ کہلاتا ہے مثلاً:

۱۔ انس امتحان میں اول آیا۔

۲۔ لاہور پنجاب کا مشہور شہر ہے۔

۳۔ کے ٹو ایک اونچا پہاڑ ہے۔

اُپر دی گئی مثالوں میں ’انس‘ ایک خاص شخص کا نام ہے۔ ’لاہور‘ ایک خاص شہر کا نام ہے اور ’پنجاب‘ ایک خاص صوبے کا نام ہے۔
’کے ٹو‘ ایک خاص پہاڑ کا نام ہے۔

اسم نکرہ

وہ اسم جو کسی عام شخص، چیز یا جگہ کے نام کو ظاہر کرے، ”اسم نکرہ“ کہلاتا ہے مثلاً:

۱۔ دادا ای جان نے مجھے کہانی سنائی۔

۲۔ گھاس خراب نہ کرو۔

۳۔ آپ کس شہر سے آئے ہیں؟

اُپر دی گئی مثالوں میں ’دادا ای جان‘، ’گھاس‘ اور ’شہر‘ عام چیزوں کے نام ہیں۔

دیے گئے پیرا گراف میں سے اسم معرفہ اور نکرہ الگ الگ کیجیے۔

آصف فاروق شہر کے اسکول میں استاد ہیں۔ ان کا گھر شہر سے چند کلومیٹر کے فاصلے پر ہے۔ ان کے دو بچے ہیں۔ بیٹے کا نام تیمور اور بیٹی کا نام ندا ہے۔ چونکہ شہر اور ان کے گھر میں زیادہ فاصلہ نہیں ہے۔ اس لیے وہ صبح گاؤں کی بس سے سوار ہو کر شہر آ جاتے ہیں۔ اسکول میں آج انہوں نے طلبہ کو لاہور شہر کے بارے میں بتایا کہ لاہور ایک تاریخی شہر ہے۔ اس میں بہت سی عمارتیں مثلاً جہانگیر کا مقبرہ، شالا مار باغ اور بادشاہی مسجد واقع ہے۔ مینار پاکستان بھی لاہور میں واقع ہے۔ مینار پاکستان وہ جگہ ہے جہاں ۱۹۴۰ء میں قائد اعظم نے الگ ملک کا مطالبہ کیا۔ ہمارے قومی شاعر علامہ اقبال کا مزار بھی لاہور میں ہے۔

ام معرفه	ام نكره

General Knowledge

Subject: Math

<https://www.proprofs.com/quiz-school/topic/4th-grade-math>

WEEK 1

1. The cost of buying a tall building is one hundred twenty one million dollars. Write this number in standard form using digits.
2. Order from greatest to least the fractions $\frac{1}{3}$, $\frac{1}{6}$, $\frac{1}{2}$, $\frac{1}{7}$.
3. When you subtract 1,995 from 4,008, the answer is equal to
4. How many milliliters in one liter?
5. Round 312.92 to the nearest whole number.
6. If you add 1,000 to 29,898, you obtain
7. Convert $\frac{5}{10}$ to decimal.
8. There are 24 hours in one day, and 3,600 seconds in one hour. How many seconds are in one day?
9. Julia read a book in 20 days. She read 16 pages every day for the first 15 days, and 18 pages everyday for the last 5 days. How many pages did Julia read?
10. 64 sweets are put in boxes that contain 8 sweets each. How many boxes are needed?

WEEK 2

1. If 6 children share 145 sweets equally, how many sweets will remain?
2. Which of these is the same as 8×9
 - A. $4 \times 4 \times 9$
 - B. $2 \times 4 \times 9$
 - C. $3 \times 4 \times 9$
 - D. $2 \times 2 \times 9$
3. $123,686 \times 0 =$
 - a. 123,686
 - b. 1
 - c. 0
 - d. cannot find answer
4. $23 \times 15 =$
 - a. 345
 - b. 335
 - c. 355
 - d. 335
5. $5 \times 6 \times 3 =$
 - a. 18
 - b. 15
 - c. 30
 - d. 90
6. $124 \times 100 =$
 - a. 1,240
 - b. 12,400
 - c. 1,200
 - d. 1,000

7. $145 \times 1 =$
- 1
 - 0
 - 145
 - cannot find answer
8. The roman numeral for 18 is _____.
- XXVIII
 - XVIII
 - IVIII
 - VVVIII
9. The smallest 4-digit number formed by using the digits 0, 3, 5, 6 is _____.
- 0356
 - 6530
 - 6035
 - 3056
10. The predecessor of the smallest 5-digit number is _____.
- 9999
 - 99999
 - 10001
 - 100001

WEEK 3

- 1.3 hundredths can be written as _____.
- 0.003
 - 0.3
 - 300
 - 0.03
- 2.3 hrs 40 mins equals _____.
- 120 mins
 - 180 mins
 - 220 mins
 - 240 mins
3. $0.07 =$ _____
- $\frac{7}{10}$
 - $\frac{7}{100}$
 - $\frac{70}{10}$
 - $\frac{70}{100}$
4. $\frac{19}{6}$ is a number between _____.
- 2 and 3
 - 3 and 4
 - 19 and 20
 - 6 and 18
5. Which list is in order from least to greatest?
- 0.12 0.21 0.13
 - 0.212 0.30 0.31
 - 0.31 0.3 0.212
 - 0.13 0.21 0.12
6. What is the solution to the problem shown below? $3,403 - 2,265$
- 1,138
 - 1,202
 - 1,262

- d. 1,668
7. Which list of numbers is in order from greatest to least?
- a. 5,846 5,684 5,648 5,468
b. 5,864 5,648 5,468 5,684
c. 5,468 5,648 5,684 5,846
d. 5,486 5,846 5,648 5,464
8. What is the solution to the problem shown below? 1,284 divided by 4
- a. 123
b. 231
c. 312
d. 321
9. The city Elizabeth lives in has a population of 320,564. Which of the following shows 320,564 in words?
- a. Three hundred twenty thousand five hundred sixty-four
b. Three hundred twenty-five thousand sixty-four
c. Three hundred two thousand five hundred sixty-four
d. Three hundred two thousand six hundred fifty-four
10. Which of the following statements is true?
- a. $83,521 > 85,432$
b. $85,383 > 85,338$
c. $53,785 > 53,875$
d. $54,736 > 57,463$

WEEK 4

1. What is the solution to the problem shown below? $7/8 - 2/8 = ?$
- a. $2/8$
b. $3/8$
c. $5/8$
d. $9/8$
2. What is the solution to the problem shown below? $8,259 + 2,175$
- a. 6,084
b. 10,324
c. 10,434
d. 11,234
3. For which of the following expressions would 70 be the best estimate?
- a. 13×5
b. 12×4
c. 14×7
d. 15×3
4. Trisha bought 3 kilograms of sugar. Which of the following is less than 3 kilograms?
- a. 2,500 grams
b. 3,000 grams
c. 3,500 grams
d. 4,000 grams
5. Jorgé went to a movie that started at 7:20 pm. He arrived at 6:15 pm. How much time was there between when Jorgé arrived and when the movie started?
- a. 55 min
b. 65 min

- c. 95 min
 - d. 105 min
6. How do you write 306,007 in expanded form?
- a. $300 + 60 + 7$
 - b. $300,000 + 6,000 + 7$
 - c. $300 + 6,000 + 7$
 - d. $300,000 + 6000 + 100 + 10 + 7$
7. Which number is a common denominator for $\frac{1}{6}$ and $\frac{1}{2}$?
- a. 1
 - b. 8
 - c. 3
 - d. 6
8. What is 76 rounded to the nearest 10?
- a. 80
 - b. 50
 - c. 70
 - d. 90
9. Which is largest?
- a. 3117
 - b. 2973
 - c. 2117
 - d. 3762
10. What is 10 divided by 3, rounded to 2 decimal places?
- a. 3.33
 - b. 3.32
 - c. 3.33333
 - d. 3.34

WEEK 5

1. What is the remainder when 47 is divided by 9?
- a. 3
 - b. 1
 - c. 2
 - d. 0
2. What is the place value of the 4 in the number 14,376,981?
- a. Ten Thousands
 - b. Millions
 - c. Hundred Thousands
 - d. Ten Millions
3. What is $2222 + 8888$?
- a. 11110
 - b. 11100
 - c. 11111
 - d. 11000
4. What is the best estimate for $46 + 991$?
- a. 1350
 - b. 800
 - c. 900
 - d. 1000
5. What is the best estimate for $6003 - 2299$?
- a. 5000

- b. 6000
 - c. 4000
 - d. 3000
6. Use the multiplication table to find the product. $8 \times 2 = \underline{\quad}$
 7. Use the multiplication table to find the product. $4 \times 5 = \underline{\quad}$
 8. Use the multiplication table to find the product. $7 \times 3 = \underline{\quad}$
 9. Use the multiplication table to find the product. $6 \times 4 = \underline{\quad}$
 10. Use the multiplication table to find the product. $9 \times 8 = \underline{\quad}$

WEEK 6

1. How many eggs would you have if you bought half a dozen?
 - A. 6
 - B. 4
 - C. 3
 - D. 2
2. How many textbooks are on a bus of 20 children with 5 textbooks each?
 - A. 40 Textbooks
 - B. 60 Textbooks
 - C. 100 Textbooks
 - D. 75 Textbooks
3. If the teacher has 28 students in her class, how many are absent if only 23 chairs are filled?
 - A. 3
 - B. 5
 - C. 7
 - D. 4
4. In math, what does the word "sum" mean?
 - A. Subtraction
 - B. Multiplication
 - C. Division
 - D. Addition
5. In math, what does the word "minus" mean?
 - A. Division
 - B. Addition
 - C. Subtraction
 - D. Multiplication
6. What is a quadrilateral shape?
 - A. Polygon with four sides
 - B. Triangles with four sides
 - C. Polygon with four or more sides
 - D. Oval objects
7. $102,293 + 448,115 =$
 - A. 550409
 - B. 545413
 - C. 550408
 - D. 560408
8. Which topic covers line segment?
 - A. Geomatics
 - B. Decimals
 - C. Geometry
 - D. Fractions
9. What is $\frac{29}{100}$ as decimal?

- A. 29%
 - B. 0.29
 - C. 2.9
 - D. 29
10. What is the place value of the 3 in 0.003?
- A. Thousandths
 - B. Tenths
 - C. Tens
 - D. Hundredths

Subject: Computer

Week One

www.google.com

www.kiddle.com

1. What is the extension of PDF?
2. Difference engine was developed by.....
3. What is the expansion of SMS?
4. Email was developed by.....
5. Who is Netizen?
6. When was the first smart phone launched?
7. ipad is manufactured by.....?
8. "Connecting people" is the tagline of?
9. What is a blog?
10. What is Cyber bullying?

Week Two

www.google.com

www.kiddle.com

11. What is meant by Mouse potato?
 12. The first web based e-mail service?
 13. The first page of a website is called the
 14. A website address is a unique name that identifies a specific _____ on the web.
 15. A _____ is a computer attached to the internet that runs a special web server software and can send web pages out to the other computer over the internet.
 16. Which software application is used for accessing sites or information on a network (as the world wide web)?
 17. **The term 'Computer' is derived from _____?**
- A. Latin
 - B. German
 - C. French
 - D. Arabic

18. **The basic operations performed by a computer are_____?**

- A. Arithmetic operation
- B. Logical operation
- C. Storage and relative
- D. All the above

19. **Who is the father of Internet ?**

- A. Chares Babbage
- B. Vint Cerf
- C. Denis Riche
- D. Martin Cooper

20. **A light sensitive device that converts drawing, printed text or other images into digital form is_____?**

- A. Keyboard
- B. Scanner
- C. OMR
- D. None of these

Week Three

www.google.com

www.kiddle.com

21. **WWW stands for_____?**

- A. World Whole Web
- B. Wide World Web
- C. Web World Wide
- D. World Wide Web

22. **A collection of system programs that controls and co-ordinates the overall operations of a computer system is called_____?**

- A. System software
- B. Operating system
- C. Utility program
- D. Device driver

23. **What type of operating system MS-DOS is?**

- A. Command Line Interface
- B. Graphical User Interface
- C. Multitasking
- D. Menu Driven Interface

24. **Which technology is used in compact disks?**

- A. Mechanical
- B. Electrical
- C. Electro Magnetic
- D. Laser

25. **1 Gigabyte is equal to _____?**

- A. 1024 bits
- B. 1000 megabytes
- C. 1024 kilobytes
- D. 1024 megabytes

26. **The brain of any computer system is _____?**

- A. ALU
- B. Memory
- C. CPU
- D. Control unit

27. **CD-ROM stands for _____?**

- A. Compactable Read Only Memory
- B. Compact Data Read Only Memory
- C. Compactable Disk Read Only Memory
- D. Compact Disk Read Only Memory

28. **The first computers were programmed using _____?**

- A. Assembly language
- B. Machine language
- C. Source code
- D. Object code

29. **Coded entries which are used to gain access to a computer system are called _____?**

- A. Entry codes
- B. Passwords
- C. Security commands
- D. Code words

30. **You can organize files by storing them in _____?**

- A. archives
- B. folders
- C. indexes
- D. lists

Week Four

www.google.com

www.kiddle.com

31. **Which device is required for the Internet connection?**

- A. Joystick
- B. Modem
- C. CD Drive
- D. NIC Card

32. **Junk e-mail is also called _____?**

- A. spam
- B. spoof
- C. sniffer script
- D. spool

33. Which statement describes “Hackers”?

- A. all have the same motive
- B. break into other people’s computers
- C. may legally break into computers as long as they do not do any damage
- D. are people who are allergic to computers

34. Who designed the first electronics computer – ENIAC?

- A. Van-Neumann
- B. Joseph M. Jacquard
- C. J. Presper Eckert and John W Mauchly
- D. All of above

35. A fault in a computer program which prevents it from working correctly is known as _____?

- A. Boot
- B. Bug
- C. Biff
- D. Strap

36. DOS stands for _____?

- A. Disk Operating System
- B. Disk operating session
- C. Digital Operating System
- D. Digital Open system

37. Which of the following are input devices?

- A. Keyboard
- B. Mouse
- C. Card reader
- D. All of these

38. Examples of output devices are?

- A. Screen
- B. Printer
- C. Speaker
- D. All of these

39. Which of the following is also known as brain of computer?

- A. Control unit
- B. Central Processing unit
- C. Arithmetic and language unit
- D. Monitor

40. _____ translates and executes program at run time line by line?

- A. Compiler
- B. Interpreter
- C. Linker
- D. Loader

Week Five

www.google.com

www.kiddle.com

41. **RAM stands for** _____ ?

- A. Random origin money
- B. Random only memory
- C. Read only memory
- D. Random access memory

42. **1 Byte =** _____ ?

- A. 8 bits
- B. 4 bits
- C. 2 bits
- D. 9 bits

43. _____ is the key to close a selected drop -down list; cancel a command and close a dialog box.

- A. TAB
- B. SHIFT
- C. ESC
- D. F10

44. _____ is the key we use to run the selected command?

- A. SHIFT
- B. TAB
- C. ENTER
- D. CTRL

45. _____ Is the functional key to display save-as box?

- A. F5
- B. F6
- C. F9
- D. F12

46. **Data becomes** _____ **when it is presented in a format that people can understand and use.**

- A. processed
- B. graphs
- C. information
- D. presentation

47. _____ is the science that attempts to produce machines that display the same type of intelligence that humans do?

- A. Nanoscience
- B. Nanotechnology
- C. Simulation
- D. Artificial intelligence (AI)**

48. Servers are computers that provide resources to other computers connected to a _____?

- A. network**
- B. mainframe
- C. supercomputer
- D. client

49. The CPU and memory are located on the _____?

- A. expansion board
- B. motherboard**
- C. storage device
- D. output device

50. **All of the following are examples of storage devices EXCEPT _____?**

- A. hard disk drives
- B. printers**
- C. floppy disk drives
- D. CD drives

Week Six

www.google.com

www.kiddle.com

51. **Computers manipulate data in many ways, and this manipulation is called _____?**

- A. upgrading
- B. processing**
- C. batching
- D. utilizing

52. **Computers process data into information by working exclusively with _____?**

- A. multimedia
- B. word
- C. numbers**
- D. characters

53. **Where does most data go first with in a computer memory hierarchy?**

- A. RAM**
- B. ROM
- C. BIOS
- D. CACHE

54. **Codes consisting of lines of varying widths or lengths that are computer-readable are known as _____?**

- A. an ASCII code
- B. a magnetic tape
- C. an OCR scanner
- D. a bar code**

55. The most common type of storage devices are _____?

- A. Magnetic storage
- B. Flash memory
- C. Optical
- D. Both A & B**

56. A person who used his or her expertise to gain access to other people's computers to get information illegally or do damage is a _____?

- A. Hacker**
- B. spammer
- C. instant messenger
- D. programmer

57. To access properties of an object, the mouse technique to use is _____

- A. Dragging
- B. dropping
- C. right-clicking**
- D. shift-clicking

58. The process of transferring files from a computer on the Internet to your computer is called _____?

- A. Downloading**
- B. uploading
- C. FTP
- D. JPEG

59. Which of the following is not a binary number?

- A. 001
- B. 101
- C. 202**
- D. 110

60. Which of the following does not store data permanently?

- A. ROM
- B. RAM**
- C. Floppy Disk
- D. Hard Dis

SCIENCE

WEEK #1

1. When living things make more of their own kind it is called...
 - Chloroplasting
 - Having babies
 - Reproducing
 - Dancing

2. An environment is...
 - When your in an space
 - Where living things live and their surroundings
 - The sky
 - A school

3. Both plants and animal cells have...
 - Cell wall
 - Cell membrane, nucleus and cytoplasm
 - Chloroplast
 - A heart

4. Plants need which of the following to live?
 - Oxygen
 - Air, water, minerals and sunlight
 - Moonlight
 - Soil, water, shade and food

5. The purpose of a stem is to...
 - It is prickly so people dont pick it
 - It does nothing
 - It protects the pant from being eaten by animals
 - Provide the plant with support and carries minerals and water from the roots

6. Why are leaves green?
 - Because its hereditary
 - Because of chlorophyll
 - Because they are died that color
 - Because i said so

7. Plants bend...
 - Away from sunlight
 - Toward sunlight
 - Whatever way they want
 - Toward water

8. A new seed looks like its parents because of
 - Heredity
 - The way god made it
 - Just by chance
 - Because i said so

9. Plants get minerals from
 - air
 - water
 - soil
 - all

10. the gas that plants use is:

- Oxygen
- Carbon dioxide
- Nitrogen
- none

WEEK #2

1. Which of the following covers most of the Earth's surface?

- Sand
- Water
- Cities
- Mountains

2. Some animals give birth to young ones and DO NOT lay eggs. Such animals are called 'mammals.'

- Rabbit
- Spider
- Butterfly
- Sparrow

3. A chameleon is able to catch insects because its tongue _____.

- Is dry
- Is hard
- Is sticky
- Changes color

4. Which of the following covers most of the Earth's surface?

- Water
- Air
- Sand
- Mountain

5 . Which animal lays eggs?

- Dog
- Cat
- Duck
- Sheep

6. A male cow is called?

- Ox
- Dog
- Sheep
- Monkey

7. All animals need food, air, and _____ to survive.

- House
- Water
- Chocolate
- Fruits

8. Which one is a fur-bearing animal?

- Hen
- Crocodile
- Tortoise
- Cat

9. What is Earth's only natural satellite?

- Sun
- Mars
- Venus
- Moon

10. The tree has a branch filled with green _____.

- Hair
- Root
- Leaves
- Trunk

WEEK #3

1. What part of the body helps you move?

- a. Eyes
- b. Lungs
- c. Pancreas
- d. Muscles

2. The two holes of the nose are called?

- a. Eyelids
- b. Nostrils
- c. Nails
- d. Hair

3. What star shines in the day and provides light?

- a. Moon
- b. Venus
- c. Mars
- d. Sun

4. Legs have feet and arms have ____.

- a. Ankles
- b. Pelvis
- c. Hands
- d. Skull

5. Which organ covers the entire body and protects it?

- a. Liver
- b. Heart
- c. Skin
- d. Brain

6. Dark rain clouds can give out lightning and ____.

- a. Thunder
- b. Snow
- c. Sunlight
- d. Wind

7. Your hands have four fingers and a ____.

- a. Knee
- b. Ankle
- c. Elbow
- d. Thumb

8. Which part of the bird lets it fly high in the sky?

- a. Beak
- b. Feet
- c. Wings
- d. Claws

9. Animals that suckle their young one are called ____.

- a. Reptiles
- b. Birds
- c. Amphibians
- d. Mammals

10. What part of the plant conducts photosynthesis?

- a. Branch
- b. Leaf
- c. Root
- d. Trunk

WEEK #4

1. What is the boiling point of water?

- a. 25°C
- b. 50°C
- c. 75°C
- d. 100°C

2. ____ helps pump blood through the entire body.

- a. Lungs
- b. Kidneys
- c. Heart
- d. Brain

3. If one boils water it will convert into ____.

- a. Mist
- b. Steam
- c. Clouds
- d. Snow

4. When you push something, you apply ____.

- a. Force
- b. Acceleration
- c. Mass
- d. Compression

5. Which group of animals have scales?
- Mammals
 - Amphibians
 - Reptiles
6. Which animal from the below list is best adapted to the desert?
- Tiger
 - Cheetah
 - Camel
 - Deer
7. Which is the strongest sense in a dog?
- Touch
 - Hearing
 - Smell
 - Taste
8. Which is the closest planet to the sun?
- Venus
 - Mars
 - Mercury
 - Earth
9. Which is the hottest planet in our solar system?
- Saturn
 - Uranus
 - Mars
 - Venus
10. Which is the smallest planet in our Solar System?
- Mars
 - Neptune
 - Mercury
 - Venus

WEEK #5

1. Which is the largest moon of Saturn in our Solar System?
 - a. Phobos
 - b. Demos
 - c. Titan
 - d. Triton
2. Which planet in our Solar System takes less than 10 hours to complete its rotation?
 - a. Jupiter
 - b. Mars
 - c. Neptune
 - d. Uranus
3. This planet has the most prominent ring system around it in our solar system _____
 - a. Mars
 - b. Neptune
 - c. Saturn
 - d. Venus
4. This planet is known as the blue planet _____
 - a. Venus
 - b. Uranus
 - c. Earth
 - d. Jupiter
5. This planet is known as the red planet _____
 - a. Jupiter
 - b. Uranus
 - c. Mercury
 - d. Mars
6. This is the brightest planet in our solar system _____
 - a. Sun
 - b. Mars
 - c. Venus
 - d. Mercury
7. This is the biggest planet in our solar system _____
 - Uranus
 - Jupiter
 - Saturn
 - Earth

8. _____ is composed of molten rocks that comes out during a volcanic eruption.
- Magma
 - Lava
 - Crust
 - Core
9. Earth completes one rotation in approximately _____ hours.
- 6
 - 12
 - 24
 - 36
10. _____ of Earth results in day and night.
- Rotation
 - Revolution
 - The orbit of the Earth
 - When the Moon blocks the Sun

WEEK #6

1. _____ of Earth results in the change of seasons.
- Rotation
 - Revolution
 - The orbit of the Earth
 - When the Moon blocks the Sun
2. The Rotation of Earth happens when
- The Earth orbits around the Sun
 - The Earth spins on its own axis
 - The Earth orbits around the Moon
 - The Sun orbits around the Earth
3. In the _____ season, the Earth is closest to the Sun.
- Summer
 - Winter
 - Spring
 - Autumn
4. Alteration in the length of the shadows is caused due to
- Earth's Revolution
 - Blockage of Earth by the Moon
 - Earth's Rotation
 - Movement of Sun
5. Our Solar System is a part of which Galaxy?
- Whirlpool Galaxy

- Black Eye Galaxy
- Andromeda Galaxy
- Milky Way

6. Which is the highest mountain peak in the world?

- a. K2
- b. Mount Everest
- c. Alps
- d. Mount Kilimanjaro

5. Which is the tallest animal in the world?

- a. African Elephant
- b. Saltwater Crocodile
- c. Giraffe
- d. Bear

6. Name the longest river in the world.

- a. Ganga
- b. Nile
- c. Amazon
- d. Mississippi

7. Which is the highest waterfall in the world?

- a. Yosemite Falls (California, USA)
- b. Angel Falls (Venezuela, South America)
- c. Niagara Falls (USA and Canada, North America)
- d. Victoria Falls (Zimbabwe, Africa)

10. Which is the smallest continent in the world?

- a. Asia
- b. Africa
- c. Europe
- d. Australia

Social Studies

WEEK # 01

1) Which is the largest sea in the world?

- (a) South China Sea
- (b) Mediterranean Sea
- (c) Red Sea
- (d) Black Sea

2) Which place in the world has the least rainfall?

- (a) Africa
- (b) Thar
- (c) Mt. Everest

(d) Pamir

3) Which is the deepest ocean in the world?

- (a) Arctic
- (b) Atlantic
- (c) Indian
- (d) Pacific

4) What is the length of Khyber Pass?

- (a) 52 km
- (b) 56 km
- (c) 54 km
- (d) 58 km

5) Which is the longest river in the world?

- (a) Volga
- (b) Nile
- (c) Amazon
- (d) Mississippi

6) Which one of the following is not a Cash Crop?

- (a) Cotton
- (b) Groundnut
- (c) Sugarcane
- (d) Wheat

7) Which is the highest mountain peak in the world?

- (a) Mount Everest
- (b) K2
- (c) Nanga Parbat
- (d) None of these

8) The Sun consists mostly of:

- (a) Helium
- (b) Hydrogen
- (c) Nitrogen
- (d) Oxygen

9) The first ever artificial satellite was launched by:

- (a) France
- (b) Russia
- (c) Japan
- (d) America

10) Which is the world's oldest religion?

- (a) Judaism
- (b) Islam
- (c) Hinduism
- (d) Christianity

WEEK # 02

- 1) The Sacred place of Christians is:**
 - (a) Nazareth
 - (b) Mecca
 - (c) Jerusalem
 - (d) None of these
- 2) After Christianity and Islam the third largest religion in terms of followers is:**
 - (a) Judaism
 - (b) Shintoism
 - (c) Buddhism
 - (d) Hinduism
- 3) Which country has the largest foreign debts?**
 - (a) Russia
 - (b) China
 - (c) Mexico
 - (d) USA
- 4) Who was the first man to reach the South Pole?**
 - (a) Ronald Amundsen
 - (b) Robert Edwin Peary
 - (c) Ernest Giles
 - (d) Jedediah Smith
- 5) Which is the richest country of the World?**
 - (a) Singapore
 - (b) Saudi Arabia
 - (c) UAE
 - (d) Switzerland
- 6) Who was the first recipient of the Nishan-e-Haider?**
 - (a) Major Aziz Bhatti
 - (b) Muhammad Sarwar
 - (c) Major Tufail Ahmad
 - (d) Sarwar Hussain
- 7) The first man on the Moon was:**
 - (a) Gagarin
 - (b) Neil Armstrong
 - (c) Leonov
 - (d) None of them
- 8) Who was the first Lady Prime Minister of a country?**
 - (a) Benazir Bhutto
 - (b) Srimavo Bhandarnaike
 - (c) Margret Hjcher
 - (d) Maria Estate Pew
- 9) The first Railway line was laid in:**
 - (a) China
 - (b) England
 - (c) Germany
 - (d) USA

10) The oldest written language is:

- (a) Sanskrit
- (b) Japanese
- (c) Chinese
- (d) English

WEEK # 03

1) Picture printed on the back of Rs. 500 note relates to:

- (a) Lahore Fort
- (b) Badshahi Masjid
- (c) Shalimar Garden
- (d) Parliament

2) Which is the largest dam of the world?

- (a) Pate
- (b) New Cornelia
- (c) Grand Culle Dam (USA)
- (d) Usama

3) The largest producer of fertilizer is

- (a) Russia
- (b) China
- (c) Japan
- (d) USA

4) The smallest bird is:

- (a) Vulture
- (b) Humming Bird
- (c) Eagle
- (d) Sparrow

5) There are only _____ countries which have Nuclear Power.

- (a) 5
- (b) 6
- (c) 7
- (d) 9

6) Which of the following was the first Newspaper?

- (a) The Peking news
- (b) Izvestia
- (c) Le Monde
- (d) Al Ahram

7) Blind Dolphins are present in:

- (a) Indus River
- (b) Chenab River
- (c) Nile River
- (d) Ganga River

8) NASA is a space agency of:

- (a) USA
- (b) UK

- (c) European Countries
- (d) Russia

9) Picture printed on the back of Rs. 5000 note relates to:

- (a) Lahore Fort
- (b) Faisal Masjid
- (c) Shalimar Garden
- (d) Parliament

10) Which continent has no Desert?

- (a) Europe
- (b) Asia
- (c) North America
- (d) Australia

WEEK # 04

1) Nyere is the currency of:

- (a) Nigeria
- (b) Niger
- (c) Togo
- (d) China

2) Which is the first Airline of Pakistan?

- (a) Orient Airline
- (b) PIA
- (c) Pakistan Airways
- (d) Blue Airline

3) Which is the first television station of Pakistan?

- (a) Karachi
- (b) Multan
- (c) Islamabad
- (d) Lahore

4) Dinar is the currency of:

- (a) Kuwait
- (b) Saudi Arabia
- (c) Turkey
- (d) Hong Kong

5) Which vitamin cannot be stored in Human body?

- (a) Vitamin A
- (b) Vitamin B
- (c) Vitamin C
- (d) Vitamin K

6) How many radio stations were present at the time of creation in Pakistan?

- (a) 1
- (b) 2
- (c) 3
- (d) 4

7) "Lightyear" is the unit of measuring:

- (a) Distance
- (b) Time
- (c) Light Intensity
- (d) Light power

8) Symbol of which of the following is “White Flag”?

- (a) Friendship
- (b) Peace
- (c) War
- (d) Love

9) Bhambore is a historical site located in:

- (a) Sindh
- (b) Punjab
- (c) KPK
- (d) Balochistan

10) What is the first belief of Islam?

- (a) Tauheed
- (b) Prophethood
- (c) The Day of the Judgment
- (d) The Hereafter Life

WEEK # 05

1) How many players does a hockey team have?

- (a) 11
- (b) 12
- (c) 13
- (d) 14

2) How many players are there in each side in a basketball match?

- (a) 11
- (b) 7
- (c) 5
- (d) 4

3) The only Olympic game where men and women can simultaneously compete with each other is:

- (a) Equestrian
- (b) Tennis
- (c) Weightlifting
- (d) Chess

4) How many players does a hockey team have?

- (a) 11
- (b) 12
- (c) 13
- (d) 14

5) When did Pakistan win the Cricket World Cup?

- (a) 1987
- (b) 1996

(c) 1999

(d) 1992

6) Who won French Open 2012 Women's title?

(a) Venus Williams

(b) Petra Kvitova

(c) Maria Sharapova

(d) Samantha Stosur

7) When five Prayers become "Farz"?

(a) 10th Nabvi

(b) 12th Nabvi

(c) 13th Nabvi

(d) 11th Nabvi

8) How many fundamental pillars of Islam are there?

(a) 3

(b) 2

(c) 4

(d) 5

9) When did Sir Sayed set M.A.O. High School in Aligarh?

(a) 1871

(b) 1873

(c) 1875

(d) 1872

10) How many balls are used in the game of Snooker?

(a) 18

(b) 20

(c) 24

(d) 22

WEEK # 06

Learn and write the full form/ spellings of the Given Abbreviations:

1. AC

2. AID

3. AJK

4. AP

5. CID

6. IT

7. FIR

8. PBUH

9. UAE

10. UNICEF

اردو

پہلا ہفتہ

- سوال نمبر 1 اردو کس زبان کا لفظ ہے اور اس کے کیا معنی ہیں
- سوال نمبر 2 پاکستان کے قومی شاعر کون ہے .
- سوال نمبر 3 چاند پر سب سے پہلے کون سا کھیل کھیلا گیا .
- سوال نمبر 4 وہ کون سا درخت ہے جس میں لکڑی نہیں ہوتی .
- سوال نمبر 5 پاکستان کی قومی زبان کونسی ہے .
- سوال نمبر 6 دنیا میں سب سے زیادہ کھایا جانے والا پھل کونسا ہے .
- سوال نمبر 7 انسانی جسم میں سب سے بڑی ہڈی کون سی ہے .
- سوال نمبر 8 چاند پر پہلا قدم کس نے رکھا .
- سوال نمبر 9 ریڈیو کس نے ایجاد کیا
- سوال نمبر 10 دس ریڈیو کب ایجاد ہوا

دوسرا ہفتہ

- سوال نمبر 1 دنیا کے کس ملک میں سب سے پہلے سورج طلوع ہوتا ہے .
- سوال نمبر 2 ایٹم کا بنیادی ذرا کس نے دریافت کیا .
- سوال نمبر 3 کس ملک کا پرانا نام فارس تھا .
- سوال نمبر 4 چار تاج محل کس نے تعمیر کروایا .
- سوال نمبر 5 دریائے نیل کی لمبائی بتائے
- سوال نمبر 6 دنیا میں کتنے فیصد جنگلات ہیں .
- سوال نمبر 7 پاکستان کے دارالحکومت کا نام بتائیں .
- سوال نمبر 8 بابائے کیمیا کس کو کہا جاتا ہے .
- سوال نمبر 9 سکندر اعظم کے استاد کا نام بتائیں .
- سوال نمبر 10 کوئلے کی کان سب سے پہلے کس ملک میں دریافت ہوئی .

تیسرا ہفتہ

- سوال نمبر 1 بحرین کب آزاد ہوا .
- سوال نمبر 2 پی آئی اے کا قیام کب ہوا .
- سوال نمبر 3 پاکستان کی کتنی فیصد آبادی دیہات میں رہتی ہے .
- سوال نمبر 4 پاکستان کی سب سے بلند چوٹی کا نام بتائیں .
- سوال نمبر 5 پاکستان کے کل کتنے صوبے ہیں نام لکھیں .
- سوال نمبر 6 پاکستان کے ڈویژن کی کل تعداد کیا ہے .
- سوال نمبر 7 پاکستان کا پہلا آئین کب نافذ ہوا .
- سوال نمبر 8 پاکستان میں پہلا ٹی وی اسٹیشن کب قائم ہوا .
- سوال نمبر 9 پاکستان نے پہلی مرتبہ ایشیا کرکٹ کپ کب جیتا .
- سوال نمبر 10 پاکستان میں موبائل فون کا آغاز کب ہوا

چوتھا ہفتہ

- سوال نمبر 1 پاکستان میں پہلی مردم شماری کب ہوئی.
- سوال نمبر 2 آبادی کے اعتبار سے پاکستان دنیا کے کون سے نمبر پر ہے.
- سوال نمبر 3 پاکستان عالمی بینک کا ممبر کب بنا.
- سوال نمبر 4 پاکستان میں پہلا کرکٹ ٹیسٹ کب کھیلا گیا.
- سوال نمبر 5 نوبل انعام جیتنے والے پہلے پاکستانی کا نام بتائیں.
- سوال نمبر 6 دنیا کی پہلی وزیراعظم خاتون کا تعلق کس ملک سے ہے
- . سوال نمبر 7 سورج گرہن کا پہلی بار مشاہدہ کب کیا گیا.
- سوال نمبر 8 دنیا میں ملیریا ڈے کب منایا جاتا ہے.
- سوال نمبر 9 دنیا میں سب سے زیادہ استعمال ہونے والا ایندھن کونسا ہے.
- سوال نمبر 10 دنیا میں سب سے بڑا انڈا کس جانور کا ہے

پانچواں ہفتہ

- سوال نمبر 1 :دنیا میں سب سے پہلے بس کس ملک میں چلائی گئی.
- سوال نمبر 2 : مالدیپ کا کل رقبہ کتنا ہے.
- سوال نمبر 3 : دنیا کے سب سے گہرے دریا کا نام بتائیں.
- سوال نمبر 4: پیٹرول سے چلنے والی پہلی کار کب بنائی گئی.
- سوال نمبر 5: کاغذ کس ملک نے ایجاد کیا .
- سوال نمبر 6 : تھائی لینڈ کا پرانا نام بتائیں.
- سوال نمبر 7 : دنیا کا کتنے فیصد رقبہ صحراؤں پر مشتمل ہے.
- سوال نمبر 8 دنیا کا سرد ترین براعظم کونسا ہے.
- سوال نمبر 9 پاکستانی کرکٹ ٹیم کے پہلے کپتان کا نام بتائیں.
- سوال نمبر 10 پاکستان کا سرد ترین مقام کونسا ہے

چھٹا ہفتہ

- سوال نمبر 1 پاکستان کے شہر لاہور کا پرانا نام کیا تھا.
- سوال نمبر 2 ا یٹم کا سب سے حلقہ ذرا کونسا ہے.
- سوال نمبر 3 نظام شمسی کا گرم ترین سیارہ کونسا ہے.
- سوال نمبر 4 عام طور پر مادہ کتنی حالتوں میں پایا جاتا ہے
- سوال نمبر 5 سفید ہاتھیوں کی سرزمین کس ملک کو کہا جاتا ہے.
- سوال نمبر 6 پاکستانی کرکٹ ٹیم نے پہلا غیرملکی دورہ کس ملک کا کیا تھا.
- سوال نمبر 7 دنیا کے سب سے بڑے ریلوے اسٹیشن کا نام بتائیں.
- سوال نمبر 8 بابائے اردو کسے کہا جاتا ہے. سوال نمبر 9 چاند کی مٹی کا رنگ کونسا ہے.
- سوال نمبر 9 دنیا میں سب سے زیادہ سونے کی کانیں کہاں ہے.
- سبق نمبر 1 سبق نمبر 1.2.3 کے تمام مشقی سوالات لکھنے

English**WEEK # 1****Verb Quiz**

Read the sentence and write down which word you think is the verb.

1. I think about it a lot. _____
2. Run fast! _____
3. I eat 3 meals a day. _____
4. Let's sing a song. _____
5. Jump over the fence. _____
6. I often laugh. _____
7. Climb to the top. _____
8. Listen carefully. _____
9. Look out the window. _____
10. I walk every day. _____

WEEK # 2**Noun Quiz**

Read the sentence and write down which word you think is the noun.

1. Winter is very cold. _____
2. The man was tall. _____
3. Close the gate. _____
4. The car moved fast. _____
5. School started early. _____
6. Catch the ball. _____
7. The doctor worked fast. _____
8. Open the door. _____

9. The girl was happy. _____

10. Look at the moon. _____

WEEK # 3

Missing Words Quiz

Complete the sentences by finding the missing words from the list below.

you, do, going, time, hope, born, almost, go, doctor, next

1. Let's _____ fishing!
2. What month were you _____ in?
3. The _____ is 4 o'clock.
4. I want to be a _____.
5. Where _____ you live?
6. _____ week I'm going on vacation.
7. It's _____ time for lunch.
8. I love _____ to the movies!
9. How are _____?
10. I _____ it doesn't rain.

WEEK # 4

General English Multiple Choice Question

1. He died _____ a severe head injury.
a) on b) of c) from d) with
2. The cat entered _____ the room through the window.
a) in b) into c) out d) no preposition
3. India and America entered _____ a nuclear agreement.
a) Into b) in c) with d) by
4. You are liable _____ the damage of the properties.
a) with b) to c) with d) for
5. You are liable _____ pay the income tax.
a) for b) to c) in d) in
6. Mother Theresa was popular _____ her philanthropic works.
a) with b) about c) for d) at

7. Michael Jackson will ever be popular _____ the lovers of music.
a) for b) by c) among d) with
8. Martin lives _____ England.
a) at b) in c) on d) near
9. Shakespeare lived _____ Stratford on Avon _____ England.
a) in, at b) on, by c) at, in d) at, by
10. Keralites mainly live _____ rice.
a) in b) on c) by d) with

WEEK # 5

1. Sheila is blown _____ all in the locality.
a) for b) by c) to d) with
2. Ashfaq Ahmed was known _____ her confessional writing.
a) to b) for c) by d) in
3. The Government is going slow _____ tax reform.
a) In b) at c) by d) on
4. She is slow, _____ replying to the correspondence.
a) to b) for c) in d) on
5. Ayesha is blind _____ her left eye by birth
a) in b) at c) on d) by
6. His father was blind _____ his misconduct.
a) in b) to c) with d) at
7. I used to go to school _____ foot.
a) by b) in c) on d) with
8. Children prefer travelling _____ the Auto rickshaw.
a) in b) by c) with d) on
9. We toured Lahore _____ a bus last week.
a) in b) by c) on d) through
10. She delivered a talk _____ Pakistan Economics on AIR.
a) on b) in c) by d) over

WEEK # 6

Fill in the blanks with correct Articles

1. New York is ----- large city
A. a
B. an
C. the
D. no article
2. Are you attending ----- reception today
A. a
B. an
C. the
D. no article

3. ----- Oranges are grown in Nagpur
A. a
B. an
C. the
D. no article
4. She wants to become ----- engineer
A. a
B. an
C. the
D. no article
5. ----- lion is a ferocious animal
A. a
B. an
C. the
D. no article
6. ----- unit means a measurement
A. a
B. an
C. no article
D. the
7. He is ----- honest official.
A. a
B. an
C. the
D. no article
8. Taj Mahal is built of ----- marble
A. a
B. an
C. the
D. no article
9. He is ----- European
A. an
B. a
C. no article
D. the
10. Let us play ----- chess
A. no article
B. a
C. an
D. the

اسلامیات سلیبس برائے جماعت چہارم برائے تعطیلات موسم گرما
پہلا ہفتہ

- سوال نمبر 1: ایمان سے کیا مراد ہے
سوال نمبر 2: مومن کسے کہتے ہیں
سوال نمبر 3 عبادات میں اسلام کے بنیادی ارکان کون کون سے ہیں
سوال نمبر 4 عقائد کا لفظ کس کی جمع ہے
سوال نمبر 5 عقیدہ کا لفظی مطلب کیا ہے سوال نمبر 6 شریعت میں عقائد سے کیا مراد ہے
سوال نمبر 6: اللہ تعالیٰ پر ایمان سے کیا مراد ہے
سوال نمبر 7: کونسا عقیدہ تمام عقائد کی بنیاد ہے
سوال نمبر 8 عقیدہ توحید کا مختصر اور جامع بیان کونسی سورۃ میں موجود ہے
سوال نمبر 9: فرشتے کون سی مخلوق ہیں
سوال نمبر 10: فرشتوں کا کیا کام ہے

دوسرا ہفتہ

- سوال نمبر 1: چار مشہور فرشتوں کے نام بتائیں
سوال نمبر 2: حضرت جبرائیل کا کون سا کام ہے
سوال نمبر 3: بارش پرسا نہ کس فرشتے کا کام ہے
سوال نمبر 4: حضرت عزرائیل کا کیا کام ہے
سوال نمبر 5: حضرت اسرافیل علیہ السلام کا کیا کام ہے
سوال نمبر 6: چار مشہور آسمانی کتابوں کے نام تحریر کریں
سوال نمبر 7: تورات کون سے نبی پر نازل ہوئی
سوال نمبر 8: حضرت داؤد پر کونسی کتاب نازل ہوئی
سوال نمبر 9: حضرت عیسیٰ علیہ السلام پر کون سی کتاب نازل ہوئی
سوال نمبر 10: حضرت محمد صلی اللہ علیہ وسلم پر کونسی کتاب نازل ہوئی

تیسرا ہفتہ

- سوال نمبر 1: اللہ تعالیٰ نے انسانوں کی رہنمائی کے لیے کتنے پیغمبر بھیجے
سوال نمبر 2: سب سے پہلے پیغمبر کا کیا نام ہے
سوال نمبر 3: سب سے آخری نبی کا کیا نام ہے
سوال نمبر 4: آخرت کے لفظی معنی کیا ہیں
سوال نمبر 5: اسلامی تعلیمات کے مطابق آخرت سے کیا مراد ہے
سوال نمبر 6: آخرت پر ایمان کا سب سے اہم مقصد اور فائدہ کیا ہے
سوال نمبر 7: اللہ تعالیٰ کا پسندیدہ دین کون سا ہے
سوال نمبر 8: آقا نے اسلام سے کیا مراد ہے تفصیل جواب تحریر کیجیے

سوال نمبر 9: اسلام کے پانچ بنیادی ارکان کون سے ہیں نام تحریر کیجیے
سوال نمبر 10: زکوٰۃ کے لفظی معنی کیا ہیں
چوتھا ہفتہ

سوال نمبر 1: اسلامی شریعت کے مطابق زکوٰۃ سے کیا مراد ہے
سوال نمبر 2: صاحب نصاب کس کو کہا جاتا ہے
سوال نمبر 3: عشر کسے کہتے ہیں
سوال نمبر 4: زکوٰۃ ادا کرنے والوں کے لئے کس چیز کی بشارت ہے
سوال نمبر 5: زکوٰۃ ادا کرنے کے فوائد تحریر کیجئے
سوال نمبر 6: زکوٰۃ ادا کرنے سے معاشرہ کے افراد کی مدد ہوتی ہے
سوال نمبر 7: حق کس کی جمع ہے
سوال نمبر 8: حق کا کیا مطلب ہے
سوال نمبر 9: اللہ کے حقوق سے کیا مراد ہے
سوال نمبر 10: اللہ تعالیٰ کے حقوق کا تقاضا کیا ہے
پانچواں ہفتہ

سوال نمبر 1: کیا اللہ تعالیٰ سے ڈرنا اور اسی سے بخشش مانگنا اللہ تعالیٰ کا حق ہے
سوال نمبر 2: اللہ تعالیٰ کے چند احسانات بتائیں
سوال نمبر 3: انسان کو اللہ تعالیٰ کی محبت کیسے نصیب ہوتی ہے
سوال نمبر 4: اللہ تعالیٰ کے بندوں پر چند حقوق بیان کریں
سوال نمبر 5: اللہ تعالیٰ کی ذات میں کسی کو شریک کرنا کیا کہلاتا ہے۔
پانچواں ہفتہ:

سوال نمبر 1: کیا اللہ تعالیٰ سے ڈرنا اور اسی سے بخشش مانگنا اللہ تعالیٰ کا حق ہے
سوال نمبر 2: اللہ تعالیٰ کے چند احسانات بتائیں
سوال نمبر 3: انسان کو اللہ تعالیٰ کی محبت کیسے نصیب ہوتی ہے
سوال نمبر 4: اللہ تعالیٰ کے بندوں پر چند حقوق بیان کریں
سوال نمبر 5: اللہ تعالیٰ کی ذات میں کسی کو شریک کرنا کیا کہلاتا ہے
سوال نمبر 6: ہمیں اللہ تعالیٰ سے محبت کیوں کرنی چاہیے
سوال نمبر 7: یہ دنیا کس نے بنائی
سوال نمبر 8: اللہ تعالیٰ کے پیارے نبی کا نام بتائیں
سوال نمبر 9: پہلا کلمہ کا ترجمہ بتائیں
سوال نمبر 10: دوسرے اور تیسرے کلمہ کا نام بتائیں
چھوٹا ہفتہ

سوال نمبر 1: ہمارے پیارے نبی کا پورا نام کیا ہے

- سوال نمبر 2: حضرت محمد صلی اللہ علیہ وآلہ وسلم کے دادا کا کیا نام تھا
- سوال نمبر 3: حضرت محمد صلی اللہ علیہ وآلہ وسلم کے والد کا کیا نام تھا
- سوال نمبر 4: حضرت محمد صلی اللہ علیہ وآلہ وسلم کی والدہ کا نام بتائیں
- سوال نمبر 5: حضرت محمد صلی اللہ علیہ وآلہ وسلم کی پہلی بیوی کا نام بتائیں
- سوال نمبر 6: حضرت عائشہ رضی اللہ عنہا کون تھیں
- سوال نمبر 7: حضرت محمد صلی اللہ علیہ وآلہ وسلم کی سب سے چھوٹی صاحبزادی کا نام بتائیں
- سوال نمبر 8: حضرت محمد صلی اللہ علیہ وآلہ وسلم پر پہلی وحی کب نازل ہوئی
- سوال نمبر 9: حضرت محمد صلی اللہ علیہ وآلہ وسلم کے سب سے پیارے دوست یار غار کا نام بتائیں
- سوال نمبر 10: پہلے چار خلیفہ کے نام بتائیں
-