

Summer Vacations Homework 2020

Class: Five

Cantt Public Education SystemA NEW FRONTIER IN LEARNING

Dear Students,

We hope that you and your families are keeping well during ongoing health crises. It is more and more likely that schools may not open till July 2020. Therefore, we are pleased to share our plans for online instructions and homework *activities*.

As of 1st June, 20, we will be starting a robust, interactive teaching programme. The curriculum will be taught through various online platforms, video lectures and live interaction with teachers as well as carefully designed homework, which all students will complete at their own time. We shall pursue following time table:-

| Group | DAYs | Timings | Subjects | Remarks |
|-------|-----------|-------------|-----------------|---|
| I | Monday | 0900 - 0940 | English | Principals shall ensure availability of subject teachers to students for coaching/clarification of doubts etc |
| | Tuesday | 1000 - 1040 | Urdu | |
| | | 1100 - 1140 | Science | |
| | Wednesday | 1200 -1240 | GK | |
| II | Thursday | 0900 - 0940 | Maths | |
| | Friday | 1000 - 1040 | S Studies | |
| | | 1100 - 1140 | Computer | |
| | Saturday | 1200 -1240 | Islamiat/Naazra | |

Beloved scholars, home work for following subjects has been included in this booklet:-

| Ser# | Subject | Pages | |
|------|-------------------|-------|-----|
| | | From | To |
| 1 | English | 2 | 15 |
| 2 | Maths | 16 | 21 |
| 3 | Science | 22 | 26 |
| 4 | Social Studies | 27 | 38 |
| 5 | Computer | 39 | 48 |
| 6 | General Knowledge | 49 | 74 |
| 7 | Islamiat | 75 | 89 |
| 8 | Urdu | 90 | 101 |

Our main objective is to keep you in touch with your studies rather than to put you under unjustified burden. Therefore, a pragmatic program has been planned for your educational progression. Stay home, stay safe and stay connected with your studies.

Regards,

English

Unit 1: Expeditions

Week 1: Day 1

Lesson# 01

Topic: Picture describing

- Describe the following picture in paragraph.



Lesson# 02

Topic: Packing for an expedition

- Which objects would you take with you for an expedition:

into the mountains? into the desert?

across the ocean? to the South pole?

- Grammar:**

Topic: Plural countable nouns

Write the plural forms of the given nouns:

| | | | |
|--------------|---------------|-------------|--------------|
| bus stop | post office | alarm clock | sleeping bag |
| address book | swimming pool | can opener | car park |

Noun: A word used to identify any of a class of people, places or things, or to name a particular one of these .

| Part of Speech | Function or "job" | Example words | Example Sentences |
|----------------|------------------------|--|---|
| Noun | Thing, person or place | Pen, dog, work, music, town, London, Pakistan, teacher, Ahmed, Wah Cantt | This is my dog . He lives in my house . We live in Wah Cantt . |

NAME: _____

DATE: _____

Noun Search

Directions: Read the sentences below. Circle the nouns.

1. The kids went to the mountains.
2. They stayed at a big cabin.
3. The cabin had lots of games.
4. The boys built a fort using snow.
5. The girls built a snowman.
6. They decorated it with a scarf and hat.
7. That night, their parents built a fire.
8. The kids toasted marshmallows.
9. Then, the family watched a movie.
10. They ate popcorn and candy.
11. Later, they read a book.
12. The trip was so much fun!



Worksheet:

Note: Also watch this video to have an idea about noun.

<https://youtu.be/pGf0ArQ4QXw>

Week 1: Day 2

Lesson 3: Reading

Topic: Two expeditions (pg#4)

- Write down the meanings and make sentences of following words on your sheets.
- Set off, bumpy, expedition, frost bite, satellite, spade, upside down
- Give answers of following questions:
 1. How many children does Ann have?
 2. How did Ann ring her family?
 3. Why did Pom get frostbite?
 4. Why couldn't Pom finish the walk?
 5. Why did Jim wake up one night?
 6. Write one of the lucky escapes of Jim.

Grammar:

Topic: Essay writing

- Write an essay on an adventure you had on your journey by using the following word bank.
- Adventure, experience, exciting activities, unusual, courage, excitement, joy, benefits, hurts, losses, adventurous people, continue, new chance, opportunity, success, failure, coward people, fearful act
- **Verb:** a word used to describe an action, state, or occurrence and forming the main part of the predicate of a sentence, such as hear, become, happen

| Part of Speech | Function or "job" | Example words | Example Sentences |
|----------------|-------------------|--|--|
| Verb | Action or state | (to) be, have, do, like, work, sing, can, must | This is my dog. He lives in my house. I like him very much. |

Action verbs are words that describe action, or what something is doing.

washed
played
climbed
hiked

dove
slept
examined
sang

read
solved
found
listened

Use an action verb from the box to complete each sentence appropriately.

1. Izabella _____ the song beautifully.
2. We _____ the mystery of the missing cookie!
3. Mike _____ the trail from the beginning to end.
4. Marcus was very tired after he _____ to the peak of the mountain.
5. The doctor _____ his patient quickly.
6. The children _____ at the playground.
7. Mom _____ my football uniform last night.
8. The girls _____ to the concert intently.
9. I _____ that book last week!
10. The dog _____ peacefully through our ruckus.

For more worksheets visit www.letsshareknowledge.com

Note: Also watch this video to have an idea about verb:

<https://youtu.be/T2Rhthoduqs>

Week 1: Day 3

Lesson# 04

Topic: Talking about picture

- Describe the following picture in your own words.



Lesson# 05

Topic: Sentence making

Note: Make sentences from the table:

Example: I was climbing a cliff very carefully when I fell 20 meters.

| | | | |
|---|------------------|------------|-----------|
| 1 | Climb a cliff | Fast | Off |
| 2 | Ski downhill | Carelessly | Over |
| 3 | Run along a path | Slowly | In |
| 4 | Cross a river | Carefully | 20 meters |
| 5 | Ride a horse | steadily | Down |

Grammar:

| Part of Speech | Function or "job" | Example words | Example Sentences |
|----------------|-------------------|-----------------------------------|--|
| Adjective | Describe a noun | Good, big, red, well, interesting | My dogs are big . This story is interesting . |

Worksheet:**Adjectives that Tell What Kind Worksheet**

- An adjective is a word that describes a noun.
- Adjectives can describe *what kind* of person, place or thing.

The hungry bear trotted through the woods.

adjective = hungry
hungry tells *what kind* of bear

Underline the adjective in each sentence. Then, write the noun the adjective describes on the line.

1. Caroline cleaned her dirty room. _____
2. The painting was beautiful! _____
3. Daniel and his mother ate shortbread cookies. _____
4. I walked up the stairs of the old building. _____
5. Can you sing a soothing song? _____
6. Don't forget to bring your delicious lunch! _____
7. We made a glass vase in class. _____
8. Her brother forgot his plaid shirt. _____
9. Pete's naughty dog chewed his shoe. _____
10. Lincoln squinted as he looked at the bright sun. _____
11. The funny clown juggled and told jokes. _____
12. My sleepy friend fell asleep in class! _____

Note: Also watch this video to have an idea about adjectives:

<http://youtu.be/DU2075GggwfU>

Week 2: Day 1**Unit 2: E-pals; computers****Lesson# 01****Topic: dialogue reading**

Task: After reading the dialogue answer the following questions:

Q: What is Judy going to look for?

Q: What is she going to write about?

Lesson# 02**Topic: Completion of sentences**

Note: Keeping in mind the functions of different parts of computer complete the sentences on your sheets. Given on book page # 9

Grammar:**Parts of speech:Pronoun**

| Part of Speech | Function or "job" | Example words | Example Sentences |
|----------------|-------------------|-----------------------|--|
| Pronoun | Replaces a noun | I, you, he, she, some | Sara is my friend. She is beautiful. |

Worksheet:

Pronouns

I **he** **she** **it** **you** **we** **they**

These words are **pronouns**. **Pronouns** are words that can be used **in place of nouns**.

The pronoun **I** is always written with a capital letter.



A Put the correct pronoun in the blank space.

My name is Sam.

I He _____ am six years old.

HELLO

I have a brother.

He She _____ is ten years old.

I also have a sister.

He She _____ is three years old.

My father is 30 years old.

He She _____ goes to office.

My mother works at home.

He She _____ takes care of us.

My father and mother are very nice.

We They _____ love us very much.

Tina and Robin are my friends.

We They _____ like to play together.



Note: Also watch this video to have a clear idea about pronoun.

<https://youtu.be/RJ6eo-bdujM>

Week 2: Day 1

Lesson# 03

Topic: Reading: The lost cousin

- Write down the meanings of following words and also make their sentences.

Look for, bounce back, split-up, damage, e-pal, browse, disagreement, giggle

Lesson# 04

Topic: Correction of mistakes

Read the dialogue and correct one mistake in each of them.

1. A: Why have you brought that book and DVD?

B: I will learn Italian next term. Am going to

2. A: There are no more eggs in the house.

B: Oh! In that case, I'm going to get some tomorrow.

3. A: Have u got a video to watch this evening?

B: Yes, Mum, we will watch "The sunken city"

4. A: I can't close this window, Grandpa.

B: Don't worry, I'm going to do it for u.

5. A: What are you planning to do on Saturday?

B: On Saturday morning I will do some shopping.

6. A: Somebody's knocking at the door!

B: Oh! I'm going to go and open it

Grammar:

Parts of speech: Adverb

Adverb: a word or phrase that modifies an adjective, verb or other adverb or a word group, expressing a relation of place, time, circumstance, manner, cause, degree etc

| Part of Speech | Function or "job" | Example words | Example Sentences |
|----------------|--------------------------------------|--|--|
| Adverb | Describe a verb, adjective or adverb | Quickly, silently, well, badly, very, really | My dog eats quickly . When he is very hungry, he eats really quickly. |

Worksheet:

Let's Share Knowledge  **Adverbs**

Adverbs are words or phrases that **modify a verb, adverb or adjective**. Adverbs express a relation of place, time, manner or degree.

In the following sentences, underline the adverbs. There is only one per sentence.

1. She strode purposefully down the street.
2. We are having a party tomorrow.
3. I scored highly on the exam.
4. Jack read silently during class.
5. I went carefully over my answers.
6. The chorus sang beautifully.
7. We walked quickly down the hill.
8. She purposefully tripped her brother.
9. I cheerfully yelled for my team.
10. We excitedly danced in our room.

For more worksheets visit www.letsshareknowledge.com

Note: Watch this video to have an idea about adverb.

https://youtu.be/yFPS8yTS_Gw

Week 2: Day 3**Lesson# 05****Topic: Creative writing**

- Write an email from your mother to your teacher. Explain why you are not at school.

Grammar:**Parts of speech: Preposition**

Preposition: a word governing and usually preceding, a noun or pronoun and expressing a relation to another word or element in the clause, as in the man on the platform etc

Worksheet:

Name : _____ Date : _____

Time Preposition Worksheet

| | | | | |
|----|----|----|-----|-------|
| on | in | at | for | since |
|----|----|----|-----|-------|

Complete the sentences with correct preposition

1. We always go to New York _____ May.
2. I have a meeting _____ 15 April.
3. I always wake up _____ 6am.
4. Ron has been in the village _____ Monday.
5. It's his birthday _____ Monday.
6. Emma will work with them _____ one month.
7. He retired _____ October.
8. I'll be back _____ an hour.
9. The weather _____ spring is nice.
10. I've been living here _____ one year.

<https://whatistheurl.com/>

Note: Also watch this video to have an idea about preposition.

http://youtu.be/A_QkzUJUfzl

- Write an application for sick leave.

Week 3: Day 1**Grammar: Tenses**

Overall introduction of tenses

Watch this video and learn the tenses. https://www.youtube.com/watch?v=3II3R9_Z1HY

Week 3: Day 2**Grammar: Tenses**

Present indefinite tense (Explanation with example)

Definition: The present indefinite tense, also known as simple present tense, denotes a stative or habitual or eternally true action.

Syntax: Subject (third person singular number) + verb in simple present form + s/es +

Example: I know Billy Bob.

He understands it.

They love swinging in the park.

Some people do not believe in God.

I usually wake up at 6.00 AM.

He plays cricket, but his brother plays football.

Earth is bigger than Mercury.

The heat of the sun is the least in the polar.

Watch this video and learn the tense. <https://www.youtube.com/watch?v=8X3x0PTgYDs>

Week 3: Day 3

Grammar: Tenses

Present indefinite tense

Watch this video and learn the tenses. <https://www.youtube.com/watch?v=8X3x0PTgYDs>

Worksheet for Affirmative tense

Complete the dialogues with correct forms of the present simple tense.

What the longest river in the world? (be)

The longest rivers the Amazon and the Nile. (be)

What in your free time? (do)

I anything. I just get bored. (not do)

Mrs Jolie, your son in my lessons. (sleep)

Oh, no. How long ? (sleep)

..... this your bag? (be)

No, it mine. (not be)

What about your children? to the same school? (go)

Annie to school. She is four. (not go)

Sue and Kam well-dressed today. (be)

Are you crazy? They well-dressed at all! (not be)

..... your husband a good driver? (be)

Well, he always his best. (try)

Worksheet: for negative sentences

Use the words in brackets to correct the wrong information. Use don't | doesn't in the present simple.

Example: Mel Gibson comes from Britain. (Australia)

Mel Gibson doesn't come from Britain. He comes from Australia.

The Earth moves around the Sun 150 thousand kilometres away from it. (million)

.....

Tourists go to Africa to see the Niagara Falls. (America)

.....

People in Switzerland speak the Swiss language. (the German, French and Italian languages)

.....

The Amazon River ends in the Pacific Ocean. (the Atlantic Ocean)

.....

The Ayers Rock lies in the east of Australia. (in the middle)

.....

The oldest skyscraper in the world stands in New York. (Chicago)

.....

The tallest trees in the world grow in France. (California)

.....

The cheetahs run up to 60 kilometres per hour. (120)

.....

The ostrich lives in Australia. (Africa)

.....

Activity: (Find out 10 sentences from unit # 1 related to present indefinite tense)

Week 4: Day 1

Unit 3: The show

Lesson# 01

Topic: Reading of story (given on page# 14)

- Read the story given on page#14 and answer the following question:

Q: What did Imran buy?

Q: What is he going to do with it?

- Make up short dialogues, using the given words.

Example: I've torn the leg of my trousers. (trousers/leg/torn)

1. Plate/chipped

2. Lamp/arm/bent

3. shirt/blouse/arm/burnt

4. Photo-frame/glass/scratched

5. cup/cracked

Lesson# 02

Topic: Rhyming words

- Write the two rhyming words of the following:

1. Feet 2. Sheet 3. Meet 4. New 5. View 6. Few

Week 4: Day 2

Lesson# 03

Topic: Reading: The show (part 1)

- Read the story and also watch this video to have an idea about any show.

<http://youtu.be/ReCMZ2j64e0>

- Write down the meanings of the following words:

Change, furious, nap, slight, departure, imprison, recover, nod

- Make sentences of the following words:

Angry, snore, shout, crowd, collect, damage

- Give answers of the following questions: Related to comprehension passage given on page#16-17)

1. What was Aunt Emily doing when she was making noise in the room?

2. How much money did William and Henry make from the show?

3. What were the plans of Aunt Emily of staying in William's house?

4. What Williams's father had put into his hand?

5. How did the children pay their entrance

Lesson # 05

Topic: The show (part 2)

- Read the part 2 of the story and make a summary of both parts.

Week 5: Day 2

Unit 4: I am Full

Lesson 1: Read the dialogue on page 20

Lesson 2:

Words: Listen and find the correct pictures

- Find synonyms for the following words
coriander, cumin, recipe, mixture, flavour, disgusting
- Make sentences
slice, beat, fry, mixture, recipe

GRAMMER:**Suffixes and Prefixes**

Watch the Video for learning correct suffixes and prefixes

[ps://m.youtube.com/watch?v=NI0Migqz-TM](https://m.youtube.com/watch?v=NI0Migqz-TM)

- Solve the Worksheet below in your copies.

EnchantedLearning.com
Fill in the Prefixes #1 Name _____

Bank of Prefixes:

| | | | | | |
|------|-----|-----|------|------|-------|
| de- | ex- | im- | mis- | pre- | un- |
| dis- | il- | in- | non- | re- | with- |

Use the bank of prefixes to complete each word. There may be more than one answer for some words.

| | | |
|---------------|---------------|---------------|
| _____ fix | _____ sense | _____ happy |
| _____ mind | _____ pert | _____ respect |
| _____ equal | _____ legal | _____ fiction |
| _____ prove | _____ frost | _____ ceed |
| _____ lucky | _____ lead | _____ fat |
| _____ fair | _____ gust | _____ hold |
| _____ place | _____ usual | _____ portant |
| _____ draw | _____ logical | _____ trieve |
| _____ visible | _____ play | _____ cellent |
| _____ view | _____ code | _____ flex |

Copyright ©2012 EnchantedLearning.com

Week:5-Day 3**Unit:4 -I am Full****Lesson:4. Reading “ how Ice cream is made”**

Give answers of the following questions:

1. What ingredients are needed to make ice-cream?
2. What flavours are used for making ice creams?
3. How do you prepare syrup?
4. Why do they weigh the ice cream when it is cold and frozen?
5. Where are the boxes if ice cream kept?

GRAMMER:**Forms of Verbs**

- Watch the Video in order to learn different forms of Verbs

<https://m.youtube.com/watch?v=Bbh3Kw5Jfwg>

- Solve the Worksheet below

Name: _____

Date: _____

Time: _____

The **simple future tense** expresses an action that has not yet happened.

Complete each sentence by changing the verb in () to future tense.

- ➔ I (ask) _____ a lot of questions.
- ➔ She (drive) _____ too fast!
- ➔ Kara (turn) _____ on the light.
- ➔ I (walk) _____ the dog.
- ➔ My mom (bake) _____ the best brownies.
- ➔ If we follow the rules, we (eat) _____ our lunch while we watch the tropical fish swim.
- ➔ Zack (throw) _____ the frisbee onto the roof.
- ➔ The dog (bark) _____ at the mailman.
- ➔ The band (play) _____ salsa music.
- ➔ I (drink) _____ lemonade on the porch tonight.
- ➔ I (write) _____ a letter to him.
- ➔ Tomorrow, we (go) _____ to the aquarium for our field trip.
- ➔ I (see) _____ fish, beluga whales, and dolphins.
- ➔ In the morning, my teacher (talk) _____ about the rules we need to follow at the aquarium.
- ➔ Everyone in my class (bring) _____ their lunch with them to the aquarium.

Copyright © Turtlediary.com. All rights reserved. www.turtlediary.com

Week:6-Day 1

Creative Writing Task: Write a story by using the word bank below; also, give a moral lesson to the story and assign a title too.

Name _____ Date _____

Make Your Own Story - Word Bank: Farm

Cut out the words below and assemble them into your own story!



colorful and Cindy trip to
 farm and a got to many
 flowers pigs I were cows
 there a was see John
 fence red around took
 the pond with fish pretty
 birds looked down up
 flew fast they he she I
 saw happy by the at
 sunshine in the trees tall
 garden barn next to ran

- Practice correct punctuation by solving the worksheet below.

Capitalization

Carol and her cat need help with capital letters. Help them make each sentence correct by circling the letters that need to be capitalized.



1. david ate lunch with me.
2. Amy and i are going to the movies.
3. My dog's name is comet.
4. samantha does gymnastics with jack.
5. We are going to hawaii for vacation.
6. Tomorrow i am having a party.
7. where is the bathroom?
8. my birthday is in december.
9. brian and justin are brothers.
10. We're going to new york in june.

Copyright 2009 2007 Education.com

Created by: education.com
www.education.com/worksheets

Week:6 Day 2

- **Task:** Using the format in your previous classes, write an application to your principal telling him/her about your limited financial circumstances and request him/her to provide you with concession in school fee.
- Write an application to your principal asking him/her for school leaving certificate.

Week:6-Day 3

Unit 5: Lets Check (Revision)

Task: Use will/going to in the sentences below.

Dear Judy,

Thank you for your long email all about yourself and your family. Good luck with your Italian lessons . If you like, I _____ send you a CD of Italian songs. I am sending some photos of my family, if they don't come through, I am _____ to send them again. This weekend, we are _____ visit my uncle and aunt . It's my aunt's birthday so we are _____ have a birthday dinner.

This summer, I _____ have dancing classes and I am sure I am _____ enjoy.

I _____ email you again. Goodbye

Love, Maria

- Choose the correct word to complete the sentences

1. Mariam went to the computer room and switched on the _____ on the wall.

- a) screen. b) power supply. c) phone line

2. She moved _____ around the pad and clicked on the right box.

- a) mouse. b) chip. c) key

3. She put her fingers on the _____ and began to type the email

- a) printer. b) file. c) keyboard

4. Then she turned on the _____ as she wanted to print out her email

- a) internet. b) file. c) printer

5) Finally she connected to the _____ and sent her email.

- a) Internet. b). electricity. c) mouse

Week:7-Day 1

GRAMMER: Conjunctions

Watch this video to have an idea about conjunctions Video

<https://m.youtube.com/watch?v=JJ4n0jr8qX8>

Solve the worksheet below.

WORK SHEET ON CONJUNCTIONS

FILL IN THE BLANKS WITH APPROPRIATE CONJUNCTIONS

1. Elizabeth works hard, _____ Jane is lazy.
(a) and (b) or
(c) because (d) but
2. _____ he is poor, he is contented.
(a) unless (b) until
(c) though (d) yet
3. I trust her _____ she always speaks the truth.
(a) hence (b) thus
(c) because (d) but
4. Wait for me _____ I return.
(a) if (b) so
(c) till (d) as
5. I rang the bell _____ no one answered.
(a) and (b) but
(c) so (d) if
6. He failed in the examination _____ he did not work hard.
(a) but (b) although
(c) because (d) therefore
7. You must not tell lies _____ your mother will punish you.
(a) or (b) but
(c) and (d) unless
8. Don't go there _____ you are called.
(a) since (b) therefore
(c) unless (d) because

ISLCollective.com

Week:7-Day 2

GRAMMER: Use of Was and Were



Name: _____

Was or Were?

Directions: Read the sentences below. Write was or were in the correct spaces.

1. Angie _____ sleeping late until the car horn started to blast!
2. Paula and Raymond _____ playing in the rain all day.
3. Last year's hurricane _____ the worst we have seen.
4. I _____ hoping that he'd get here on time.
5. They _____ talking so much they missed the directions.
6. Frank and his friends _____ invited to the movie screening.
7. The people at the beach _____ enjoying the sunny day.
8. My aunt's fir tree _____ growing quickly in her yard.
9. Mom _____ washing dishes while dad mowed the lawn.
10. I know that the doctor _____ helping the sick lady.

© www.HaveFunTeaching.com

Week:7-Day 3

Creative Writing Task

Task: Look at the pictures below. Write a story in your own words and then give a suitable title to your story.

Picture Story

Look at the pictures and tell the story.

The picnic
One beautiful Sunday morning the Fox family...

Maths

Week 1: Day 1

NUMBERS

1. Learn these in numbers and in words also.

- a. One thousand = 1000 b. Ten Thousand = 10,000
 c. Hundred Thousand = 100,000 d. One Lakh = 1, 00,000
 e. Ten Lakh = 10, 00,000 f. One Million = 10 lakh = 10, 00,000
 g. One Crore = 100 lakh = 10 Million = 100, 00,000
 h. Place Value means "A digit's position in a number"
 i. Expanded form of numbers is writing each digit of number according to its place value.

2. Write the numbers in words. One is done for your help.

| Millions | Hundred Thousand | Ten Thousand | Thousands | Hundreds | Tens | Ones |
|----------|------------------|--------------|-----------|----------|------|------|
| 2 | 2 | 3 | 5 | 2 | 6 | 8 |

We write 2235268 as in words as
Two million, two hundred and thirty five thousand, two hundred and sixty four.

- i. 2235268 ii. 458197 iii. 213561 iv. 7895214 v. 3214789
 vi. 5456662 vii. 1112455 viii. 6982243 ix. 5682234 x. 3451256

<https://youtu.be/-GT-bIYr0RI>

<https://youtu.be/jl1X75aNJkc>

<https://study.com/academy/lesson/place-value-up-to-hundred-millions-lesson-for-kids.html>

Week 1: Day 2

3. Write the numerals for the following expanded forms.

- a. 50 000 000 + 3 000 000 + 40 000 + 6000 + 500 + 90 + 2
 b. 9 ten millions + 5 millions + 2 hundred thousand + 7 thousands + 2 hundreds + 1 ten + 6 ones.
 c. 60 000 000 + 400 000 + 2000 + 700 + 4
 d. 7 ten millions + 3 millions + 44 hundred thousand + 6 ten thousands + 9 hundreds + 4 tens + 3ones

<https://youtu.be/iK0y39rjBgQ?t=11>

Week 1: Day 3

4. Write the numbers in figures.

- a. twenty- seven million, three hundred and fifty-two thousand, six hundred and sixty.
 b. six hundred and eighty nine million, four hundred and thirteen thousand, five hundred and forty-one.
 c. one million, fifty-four hundred thousand, nine hundred and seventy-two.
 d. two million, three hundred and fifty-one thousand, eight hundred and ninety-five.

e. sixty-one million, nine hundred and two thousand and seventy-seven.

<https://youtu.be/7Qs--tkx3Xw?t=89>

Week 2: Day 1

ROUND OFF NUMBERS

It is a way of writing number simpler but closer to the value what it was. Numbers are rounded off to nearest 10 , 50, 100, 1000, 10,000 etc. For example :-

1. Round off 42 to nearest 10 = 40
2. Round off 46 to nearest 10 = 50
3. Round off 474 to nearest 100 = 500
4. Round off 445 to nearest 100 = 400
5. Round off 2736 to nearest 1000= 3000
6. Round off 8454 to nearest 1000= 8000

4,882,753 → 4,882,750

When we round off a number to the nearest ten, we look at the digit in the ones place

NOW YOU CAN DO THIS

1. Round off these numbers to nearest 10.

5,914,586. 2,875,754. 3,882,753. 2,834,982. 4,122,865

Week 2: Day 2

2. Round off these numbers to nearest 100.

6,589,24. 2,643,279. 5,974,146. 6,974,710. 2,456,410

<https://youtu.be/jvp0mtr1kFM?t=92>

Week 2: Day 3

3. Now Round off the following numbers to the nearest ten, hundred, thousand separately.

4,567,345. 1,345,896. 3,896,745. 9,698,701. 8,956,987

https://youtu.be/fh8gkPW_6q4?t=21

<https://youtu.be/jvp0mtr1kFM?t=92>

Week 3: Day 1

OPERATIONS IN NUMBERS

1. Fill in the boxes.

- a. $34\ 567\ 431 + \underline{\hspace{2cm}} = 34\ 567\ 431$
- b. $43\ 876 \times \underline{\hspace{2cm}} = 43\ 876$
- c. $3\ 874\ 346 + 2\ 598\ 012 = 2\ 598\ 012 + \underline{\hspace{2cm}}$
- d. $7\ 000\ 000 - 1 = \underline{\hspace{2cm}}$
- e. $\underline{\hspace{2cm}} \times 45\ 237 = 0$
- f. $90\ 871\ 256 - \underline{\hspace{2cm}} = 0$

Week 3: Day 2

2. Add the following.

- a. $2\ 341\ 567 + 13\ 674\ 032$
- b. $38\ 274\ 987 + 439\ 283\ 416$
- c. $81\ 704\ 948 + 107\ 293\ 051$

3. Subtract the following.

- a. $8\ 000\ 000 - 4\ 287\ 386$
- b. $9\ 970\ 093 - 6\ 834\ 104$
- c. $62\ 048\ 732 - 41\ 035\ 71$

<https://youtu.be/J66ouCXIhl?t=108>

<https://youtu.be/863F-iXXIal?t=45>

<https://youtu.be/ihkVqbGuapY?t=126>

Week 3: Day 3

4. Find the product.

- a. 8900×1342 b. 138×406 c. 3947×1280 d. 611×122 e.
 158×600

<https://youtu.be/-h3Oqhl8fPg?t=414>

Week 4: Day 1

5. Divide then check your answer.

- a. $7400 \div 20$ b. $4389 \div 18$ c. $56088 \div 456$ d. $43275 \div 16$ e.
 $149756 \div 239$

<https://youtu.be/R2dZZxfAYsg?t=182>

<https://youtu.be/MbpmP1esh-Q?t=159>

Week 4: Day 2

6. Solve the following.

- a. $290 \div 5 + 31 \times 48$ b. $70 \times (180 \div 9) - 86$ c. $364 + (22 \times 17) - 49$
 d. $75 \times \{12 + (3 \times 10)\} \div 3$

<https://youtu.be/CIYdw4d4OmA?t=346>

Week 4: Day 3

7. Solve the following.

- a. There were 393 016 spectators at a football match. 49 386 of the spectators were women and the rest were men. How many men were there in the football match?
 b. Mr David spends Rs 342 every month on his medicine. How much does he need to spend in 3 years?
 c. Mrs Shahid bought 28 200 buns. After throwing away 5460 of the buns that were stale, she packed the remaining buns into bags of 15 buns each. She then sold each bag of buns for Rs 4. How much money did she get from selling the buns?

https://youtu.be/fZtUn_THXnk?t=149

<https://youtu.be/XF7if5XJRtQ?t=90>

<https://youtu.be/Z3qRkxzmYnU?t=96>

<https://youtu.be/4rWy0sWWQVc?t=39>

Week 5: Day 1

AREA, PERIMETER AND VOLUME

Learn

* **Perimeter:** The distance around a two dimensional shape is perimeter.

Perimeter of a **regular polygon** is the number of sides \times length of one side.

Perimeter of an **irregular polygon** or shape is the sum of the lengths of its sides.

* **Area:** Area is the measure of how much space there is on a flat space.

Area of square = 2 times its length

Area of rectangle = length \times breadth

1. Find the perimeter of given figure.



24 cm

2. Find the perimeter of the rectangle when length = 20.5 cm and breadth = 15 cm
3. Find the unknown length when perimeter = 54 cm.
4. The perimeter of a rectangle is 38 m, if its breadth is 4 m, what is the length of the rectangle.

<https://www.khanacademy.org/math/geometry/hs-geo-foundations/hs-geo-area/v/perimeter-and-area-basics>

https://www.youtube.com/watch?v=rSVMrPu0_U

Week 5: Day 2

5. (a). find the area of given figures.

6cm



4 cm

- (b). Find the area of square.

7cm



6. The length of a square tile is 8 cm. Find its area _____ cm².
7. The length of rectangle is 10 cm and breadth is 4.2 cm, find its area.

<https://www.youtube.com/watch?v=1tEHnSifJLE>

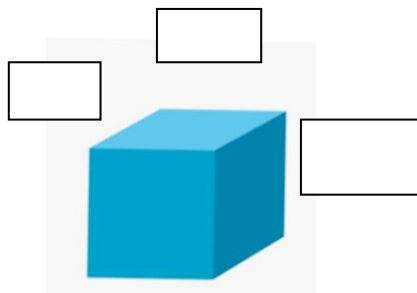
Week 5: Day 3

* **Surface area:** The total area of the surface of three dimensional objects.

Surface Area of cube = 6 x (length x length)

Surface Area of cuboid = 2 (length x height + length x breadth + breadth x height)

8. Find the surface area of given shapes.



9. Find the area of a cuboid when length = 17 m, breadth = 5m, and height = 8 m
10. A rectangle tray has an area of 77 cm². If its breadth is 7 cm, what is its length?
11. 7. Find the area of a cube when length = 5 cm

<https://www.toppr.com/guide/s/maths/mensuration/cube-and-cuboid/>

Week 6: Day 1

* **Volume:** Volume of a solid is the amount of space it occupies.

Volume of cube = length x length x length

Volume of cuboid = length x breadth x height

12. The length of cube is 4 cm, find its volume and surface area.
13. Find the volume and surface area of cuboid when length is 5 cm, breadth is 2 cm and height is 3 cm.

<https://byjus.com/maths/volume-of-cuboid/>

<https://www.toppr.com/guides/maths/mensuration/cube-and-cuboid/>

Week 6: Day 2

Mental Maths

- 6 270 892 = _____ millions _____ hundred thousands
- Write down all the factors of 33 _____
- 7 millions 2 hundred thousand 4 thousands 1 ten 6 ones = _____
- Write down all the prime numbers between 10 and 20?
- $69\,837\,459 + \underline{\hspace{2cm}} = 69\,837\,459$
- $(7\,830\,156 \times 2) \times 13 = (2 \times 13) \times \underline{\hspace{2cm}}$
- $a \times (b + c) = (a \times b) + \underline{\hspace{2cm}}$
- The reciprocal of $\frac{12}{13}$ is _____
- $900\,000 + 30\,000 + 9000 + 800 + 30 + 1 = \underline{\hspace{2cm}}$
- $\frac{1}{2} \div 6 = \underline{\hspace{2cm}}$

Week 6: Day 3

Mental Maths

- $9\,000\,000 - 1 = \underline{\hspace{2cm}}$
- How many third make 5 _____
- What is the value of $3(x - 6)$ when $x = 11$?
- Which of these numbers is not a multiple of 3? 81 111 73 27 105
- $1 - 0.92 = \underline{\hspace{2cm}}$
- Round off 6257.5 to the nearest 10 _____
- Complete the number pattern.

| | | | | |
|-------------|---|----------|---|-------------|
| 10 | + | 1 | = | 11 |
| 100 | + | 1 | = | 101 |
| 1000 | + | 1 | = | 1001 |
| _____ | + | _____ | = | _____ |
| _____ | + | _____ | = | _____ |

- 28759 28754 28749 _____
- What do I need to add to 0.93 to make 1?
- 10 months = _____ year.

Week 7: Day 1

Mental Maths

- $\frac{4}{5}$ is equivalent to $\frac{8}{10}$. Yes _____, No _____.
- 3 sixes are _____
- If you eat 3 eggs from a dozen, how many will be left?
- How many wheels on 8 cars?
- 4 days = _____ hours.
- What is the missing number? 7.3 _____ 8.1 8.5 8.9

27. Which is bigger $\frac{5}{8}$ or $\frac{4}{6}$?

28. When zero is taken away from a number the answer is always:

(a) a zero, (b) one, (c) less than the number, (d) the same as the number.

29. Find two numbers with the sum of 16 and a difference of 4.

30. Type the missing number to complete the equivalent fraction.

$$\frac{1}{4} = \frac{2}{8} = \frac{3}{12} = \frac{4}{16} = \frac{5}{20} = \frac{6}{\quad}$$

Week 7: Day 2

31: Write the correct number in the boxes $114 =$ hundreds + tens + ones

32: 6 tens are = _____

33: Fill in missing number $4081 = 4000 +$ _____

34: Find two numbers with the sum of 16 and a difference of 4.

35: Write the number that comes just before 7030 = _____?

36: If the time is 4:00 pm now then what will it be after 45 minutes?

37: 1 year + 4 months = _____ months.

38: Which numeral represents the highest value in 8,943?

39: Write two numbers with the sum of 9 and difference of 1.

40: Write down number eighteen thousand two hundred seven.

Week 7: Day 3

41: Fill in missing number $4081 = 4000 +$ _____

42: Find two numbers with the sum of 16 and a difference of 4.

43: Write the number that comes just before 7030 = _____?

44: If the time is 4:00 pm now then what will it be after 45 minutes? _____

45: The area of Pakistan in kilometer is _____

46: 6-digit greater number is _____

47: 4-digit smaller number is _____

48: The population of Pakistan is _____

49: The area of a ceiling of a class room is about 40 (square centimeters or meters). _____

50: The perimeter of a photo frame is about 40 (7cm or m). _____

Science

Important Note

- **Mcqs, Fill in the blanks, Name the following** should be solved/written/filled on your book.
- **Definitions, Short Q/A and Long Q/A** should be written on your notebook.
- **Activities** should be performed/write on loose sheets.
- Learn the spellings of **dictation words**.

Week 1: Day 1

UNIT 1: FOOD

CHAPTER 1: GROWING PLANTS FOR FOOD

Fill in the blanks with correct option.

1. Seeds which have two seed leaves are called **dicot** seeds.
2. New plants grow from **Bryophyllum** leaves.
3. Crops grown in winter seasons are called **rabi** crops.
4. Practice of growing crops is called **agriculture**.
5. Watering the fields through holes in pipes is called **drip** irrigation.

Define the following

Germination

Germination is a process through which a plant grows from a seed in the presence of favorable condition such as good soil, air, warmth and water.

Dispersal of seed

The carrying away of fruits and seeds to distant places from their mother plants is known as dispersal. Seeds and fruits of many plants have developed special features.

Video Link <https://www.youtube.com/watch?v=TE6xptjgNR0>

Week 1: Day 2

Match the following.

- | | | |
|---------------------|---|---------------------------|
| 1. Cotyledons | → | a. self-dispersal |
| 2. Kharif crop | → | b. Founds in ferns |
| 3. Underground stem | → | c. seed leaves |
| 4. Pea pod | → | d. grows in summer season |
| 5. Spores | → | e. wind dispersal |
| 6. Dandelion | → | f. water dispersal |
| 7. coconut | → | g. ginger |

TASK

Guess who I am

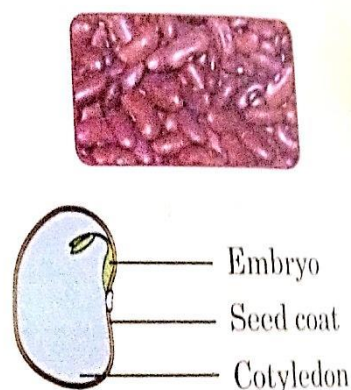
1. I grow in black soil. I am **cotton**.
2. I grow in sandy irrigated soil. I am **wheat**.
3. I grow in clayey soil. I am **rice**.
4. I grow in sandy soil in coastal areas. I am **coconut**.
5. I grow in moist soil in hilly areas. I am **tea**.

Video Link <https://www.youtube.com/watch?v=VkiUnV8qxls>

Week 1: Day 3

Activity No 1

Take a few dry bean seeds. You will notice that the seeds have a hard covering. It is called the **seed coat**. It protects the seed from being damaged. Soak the seeds overnight. Observe the soaked seeds in the morning. You will find that the seed coat has become soft. Remove the seed coat. You will see two thick **seed leaves** or **cotyledons**. Open the cotyledons. You can see a baby plant inside it. It is called the **embryo**.



Video Link

<https://www.youtube.com/watch?v=CZhE2p46vJk>

Week 2: Day 1

Short question answers

1. How do good conditions help seed to grow?

Ans. A seed needs air, warmth, water, and good soil, rich in nutrient, to grow. Air helps the seed to breathe; warmth makes the seeds active and water softens the seed coat and the food.

2. What are different parts of seeds?

Ans. The different parts of seeds are

1. Seed coat. A hard covering
2. Cotyledons. Seed leaves store food for embryo.
3. Embryo. A baby plant.

3. How does a potato plant reproduce?

Ans. Potato is an underground stem. It has buds called eyes on them. Each eye can grow a new plant.

Video Link <https://www.youtube.com/watch?v=IYBuY-DnCJc>

Week 2: Day 2

4. What is the advantage of ploughing the fields?

Ans. It loosens soil. It breaks the hard soil and uproots the weeds growing in it.

5. Why do grains are stored in a dry and well ventilated room?

Ans. Grains are stored in a dry and ventilated room because molds grow easily in cold and damp places.

Long question answers

Q.1 How does the farmer protect his crops?

Ans. A farmer protects his crops from disease, pests, and weeds by spraying insecticides, pesticides, and weedicides. Growing crops are protected from grazing animals by building walls and fences. Scare crows are placed at different places to scare away birds.

Video Link <https://www.youtube.com/watch?v=Pf74rrn1uLk>

Week 2: Day 3

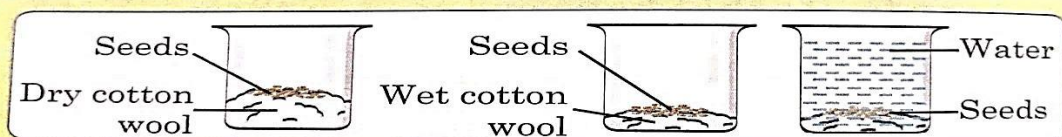
Q.2 What are the stages of germination?

Ans. Stages of germination

1. Seed absorbs water from soil, increases in size and opens the seed coat.
2. The baby root (radicle) pushes through the seed coat and grows down ward into soil.
3. The roots start growing and the cotyledons are pulled upwards.
4. The baby plants called seedling start coming out of the cotyledons.
5. The stem grows longer and first leaves start to develop.
6. The leaves develop completely and the cotyledons fall off. The process of germination is thus completed.

Activity No 2

Take three open glass containers or beakers. In the first one, keep a few seeds on dry cotton wool. In the second beaker, keep a few seeds over wet cotton wool. Ensure that the cotton wool does not dry up. In the third beaker, keep a few seeds completely submerged inside water.



Observe the seeds for a day or two. In which container did you find that the seeds germinated into plants? Why?

Video Link <https://www.youtube.com/watch?v=CZhE2p46vJk>

Dictation Words

Spores, Monocot, Germination, Seeding, Dispersal, Kharif Crop, Irrigation, Agriculture

Week 3: Day 1

UNIT 1: FOOD

CHAPTER 2: HEALTH AND HYGIENE

Fill in the blanks with correct option.

1. Vitamin **A** helps us to see in dim light.
2. Our blood circulation improves when we **exercise**.
3. Diseases that can be passed from one person to another are called **communicable** diseases.
4. Diseases like malaria and dysentery are caused by protozoa.
5. **Jaundice** is caused by drinking contaminated water.

State whether the following sentences are true or false.

- | | |
|--|--------------|
| 1. All the people need the same diet. | False |
| 2. Inhaling smoke is injurious to health. | True |
| 3. Scurvy is caused by vitamin B deficiency. | False |
| 4. Diseases producing microbes are called germs. | True |
| 5. People should use a handkerchief when they sneeze or cough. | True |
| 6. Malaria is caused by bite of female Anopheles mosquito. | True |

Dictation Words

Diet, Allergy, Microbe, Germ, Epidemic, Contaminate, Pasteurize, Vaccine

Video Link <https://www.youtube.com/watch?v=MxiWp8vkRFI>

Week 3: Day 2

Short question answers

Q. 1 What is a balanced diet?

Ans. A diet that includes all the nutrients in right proportion is called balanced diet.

Q.2 How does milk food group help us?

Ans. Milk group helps us in providing calcium that helps to build strong bones and teeth.

Q.3 What are non-communicable diseases?

Ans. Diseases which do not spread from one person to another are known as non-communicable diseases.

Q. 4 What are the effects of vitamin D deficiency and how it can be prevented?

Ans. Bones can be thin and brittle due to deficiency of vitamin D. We can prevent it by taking

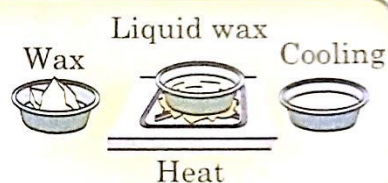
fish liver oil, eggs, milk, milk's product and exposure to sun.

Week 3: Day 3

Activity No 3

Activity

Take a piece of candle wax in a bowl. Heat the bowl. The wax melts and turns into a liquid. The bowl now contains liquid wax. After the wax cools, the liquid wax turns into solid again.



Video Link

<https://www.youtube.com/watch?v=5DGwOJXSxqg>

Week 4: Day 1

Short question answers

Q.5 Which diseases are caused by virus?

Ans. Diseases caused by viruses are common cold, influenza and polio.

Q.6 Name three diseases for which vaccines are available?

Ans. Cholera, typhoid, polio, tetanus, mumps, and hepatitis B are the diseases for which Vaccines are available.

Q.7 Name some water borne diseases caused by bacteria?

Ans. Cholera, typhoid and diarrhea are water borne diseases caused by bacteria.

Long question answers

Q. 1 Write a note on how diseases spread through food?

Ans. Diseases spreads through food in many different ways.

Germs grow on garbage and dirt. Flies carry germs from there and leave them on uncovered Food and contaminate it.

Dust and soil is blown away by winds and settle on food, the food gets contaminated by germs present in dusts and soil.

People do not wash their hands after using toilet; germs from their hands transfer to the food and contaminate it.

1. Anybody eating contaminated food is likely to fall ill.

Video Link <https://www.youtube.com/watch?v=2JWku3Kjppq0>

Week 4: Day 2**Q.2 Write down some benefits of exercise.****Benefits of Exercise**

1. Exercise helps in maintaining physical fitness.
2. Exercise strengthens bones and muscles.
3. It makes us take deep and quick breaths and strengthen our lungs.
4. It also helps our nervous system by supplying more oxygen to the brain.
5. It increases the efficiency of the heart and improves blood circulation.
6. We sweat after exercise, which help us to get rid of waste from our body
7. You get food sleep after exercise.

Video Link

<https://www.youtube.com/watch?v=MxiWp8vkRF>

Week 4: Day 3**Q. 3 Define the following.****Pasteurization**

Pasteurization is a process that kills microbes mainly bacteria in food and drinks such as milk, juice canned foods etc. it is based on high temperature short time treatment. Milk is pasteurized at 72 C for 15 sec.

Epidemic

An epidemic is the rapid spread of infection disease to a large number of people in a community or population within a short period of time usually two weeks or less. Some diseases which cause an epidemic are jaundice, cholera and typhoid.

Activity No 4**Activity**

Take a piece of ice. Observe it after some time. You will notice that the ice which was in solid form melts and turns into water which is its liquid form.

**Video Link**

<https://www.youtube.com/watch?v=JZjzQhFG6Ec>

Social Studies Class: V

Week 1-Day-1

Chapter no 2: Goods and ServicesPg # 73-74

Monday1st June 2020:

Topic:Goods and services

Make a list of the public goods and services that are used by you and your family .Make a similar list of the private goods and services that you use regularly.

(, Take help of your book, page no 73 -74)

- List which of the goods and services listed below are private and which are public

- Fruits and vegetables
- Clothes
- Sewage disposal
- Park
- Cinema
- Passport Offic
- Flyover
- Ice Cream

(Take help of your book, page no 73 -74)

Links: <https://youtu.be/Jd4kD9TicbA>

Week 1- Day 2

- Sort out the goods and services listed in the box below and write them in the appropriate columns
- **Link:** https://youtu.be/E1v5eRs0_fw

| | | | |
|------------------|-----------------|---------------------|--------------------|
| Private goods | Public goods | Private services | Public services |
|------------------|-----------------|---------------------|--------------------|

Week 1-Day 3**Goods and Services**

A **good** is something you buy and consume. Goods are things that you can keep, eat, or use.

If you go to the store and buy an apple, you get to keep the apple and take it home with you, so it is a good.



A **service** is something that someone does for you. When you buy a service, you hire people to perform work. You are not buying something you can touch or hold.

If your car is broken, you might hire someone to fix it. You are paying for a service.



Read each scenario and tell whether you are purchasing goods or a service. Write the word **good** or **service** on each line.





- | | |
|--|-----------|
| 1. You get your hair cut. | 1. _____ |
| 2. You buy a book from a garage sale. | 2. _____ |
| 3. You buy your mother a flower from a flower shop. | 3. _____ |
| 4. You hire someone to cut your lawn. | 4. _____ |
| 5. You visit the doctor for a checkup. | 5. _____ |
| 6. You purchase a game to give as a birthday gift. | 6. _____ |
| 7. You pay your sister \$5 to clean your messy bedroom. | 7. _____ |
| 8. You buy an ice cream cone from an ice cream truck. | 8. _____ |
| 9. You take an airplane when you go on a trip. | 9. _____ |
| 10. Your brother sells you his old baseball mitt for \$2. | 10. _____ |
| 11. Give an example of someone purchasing a service. (Do not use an example from above.) | _____ |
| 12. Give an example of someone purchasing a good. (Do not use an example from above.) | _____ |

Week 2 Day 1

Name _____ Date _____

Goods & Services
SOL 1.8

1. Which item below is a good?

- a. 
- b. 
- c. 
- d. 

2. Something you can buy and take home to use is a _____.

- a. Seller
b. Good
c. Buyer
d. Service

3. Something you pay someone to do for you is a _____.

- a. Service
b. Buyer
c. Good
d. Seller

4. Which word describes the picture below?



- a. Good
b. Service
c. Buyer
d. Seller

5. When you pay for something at a store you are a _____.

- a. Good
b. Service
c. Buyer
d. Seller

6. Which word describes the picture below?



- a. Seller
b. Good
c. Buyer
d. Service

7. Which word describes the picture below?



- a. Service
b. Buyer
c. Seller
d. Good

8. Which word describes the picture below?



- a. Seller
b. Good
c. Buyer
d. Service

Week 2 Day 3**Topic: Manners****Worksheet 1 - Manners of Eating****1. Match the following phrases to complete them:**

| | |
|--------------------------|--------------------|
| We should wash our hands | is near to you |
| Eat from what | our right hands |
| If we don't like it | before we eat |
| We should eat with | we should leave it |

2. Use the following words to complete the sentences:

healthy leave blessing food finish

We should always thank Allah for our _____.

Cleanliness helps us to stay _____.

Food is a _____ from Allah.

We should say Alhumdulillah when we _____ eating.

If we don't like a food we should _____ it.

3. Copy the hadith :

I have been sent to perfect good morals and manners

Week 4 day 1**Chapter no 4: Trade Pg # 79-80****Topic: Trade**

- Do you think that development of Pakistan depends upon Trade.
(Take help from your book, page no 79-80)
- Make a list of imported items which you use in your daily life.

Link: <https://youtu.be/Y9sAek1L7L0>

Week 4-Day 2

(Take help from book and given link)

Link: <https://www.youtube.com/watch?v=sLLzJria-P8>

- Complete the table below about the international trade of Pakistan.

| Main export items | Main import items |
|-------------------|-------------------|
| | |

Week 4 -Day 3

Economy Worksheet 1

Fill in the blank with words from the Word Bank.

| Word Bank | | | |
|-----------|-------|---------|------|
| grown | apple | service | made |

1. Goods are things that are _____ and _____.
2. A _____ is when someone does for someone else.
3. An _____ is an example of a good from a farmer.
4. A police man provides a _____ to the people of the community.

Circle each service and underline all goods.

| | | |
|--------------|-------------------|--------------|
| Baseball | Garbage Collector | Pet sitter |
| Photographer | Crossing Guard | Pencil |
| Bananas | Hershey Bar | Hair Stylist |

Label each picture as either a good or a service.



Week 5 -Day 1 -Topic: Trade

Choose the correct answer. (Take help from your book, page no79-80)

1: A _____ is someone who buys and pays for a good or service.

- a. producer b. user c. consumer

2: A _____ is someone who creates a good or service for other to buy or use.

- a.Consumer b. Producer c.User

3: An export is a good that country sells to another country. (True/False)

4: When trade takes place between different countries, it is called International trade.

(True/False)

5: The goods that are sent out of Pakistan are known as _____.

- a. Import b. Export c. Exchange

Link: <https://youtu.be/KICYUMeMwZM>

Week 5-Day 2-Value Education

Honesty

What Is Honesty?

- An honest person is someone who tells the truth.
- An honest person does not cheat, steal, or lie.

How Can I Be an Honest Person?

Whether at home, school, or the playground, an honest person always does his best to tell the truth. An honest person knows that lying to others is wrong and can hurt their feelings. Truthful words and truthful actions are important parts of honesty.

An honest person does not steal or cheat. He knows that stealing is wrong. He would never take a toy, candy, money, or anything that does not belong to him. Rules and laws about stealing are made to keep everyone's property safe. An honest person would not want to break these rules or laws. Cheating is also something that an honest person would not do. Copying someone else's paper is not right. Doing your own work and trying to do your best shows honesty.

An honest person keeps his promises. When an honest person says that he will do a chore or job for someone, he always does it to the best of his ability. An honest person makes sure that he completes the job the way that he was asked to.

Many people say, "Honesty is the best policy." This statement means that it is very important to always tell the truth and never steal or cheat. If you are an honest person, your character will shine through and you will feel good about your actions. Make honesty your policy!



Name _____

Honest Behavior

Some of these activities show honest behavior, while others do not. If the activity shows honesty, write "Y" for yes. If it does not, write "N" for no.

- _____ 1. Making a promise and keeping it
- _____ 2. Admitting your mistake
- _____ 3. Telling lies to get out of trouble
- _____ 4. Standing up for your beliefs
- _____ 5. Pretending you are sick when you aren't
- _____ 6. Telling someone what they want to hear, instead of the truth
- _____ 7. Not keeping your word to do your chores
- _____ 8. Admitting you forgot to do your homework
- _____ 9. Acting like someone you are not
- _____ 10. Cheating on a test
- _____ 11. Stealing a toy from your friend's house
- _____ 12. Sincerely apologizing

Week 5-day 3Chapter no 2: From weather to climate

- Use the sources of current information to discover what steps other people, communities, and governments are taking to slow down climate change.

(, take help from book, page no 9-13)

- How climate affect the way we liveand how climate affect the Agriculture sector.

(Topic:Climate affect the way of live. Take help from book page no 13-14, and also take help from given link)

Link: https://youtu.be/A_LOsCaRzNA

Topic: Weather conditions

- Complete the following chart with the help of given link.

- Link: <https://youtu.be/ySSyT44nma4>


| Weather condition | Instruments used for measuring | Unit used for the measurement |
|-------------------|--------------------------------|--|
| Temperature | | |
| | | North, south, east, west and the intermediate directions |
| Rainfall | | |
| | Barometer | |
| | | Knots (nautical miles per hour) |
| | Hygrometer | |


Wednesday 17th June 2020: Worksheet


Name : _____


What's the Weather?


Write appropriate weather words from the word bank.




















sunny snowy windy cloudy
partly cloudy rainy foggy stormy

Printable Worksheets @ www.mathworksheets4kids.com

Topic: Climate

Name: _____

Climate

Climate is a weather pattern over a longer period of time. This would be the type of weather a certain area of the world gets. Years and years can determine the climate of an area. This is not a type of weather, but it's the patterns of weather that occur in one spot. For example, climate in an area could mean dry summers and wet winters, or it could mean that it is warm and wet all year long. Four specific types of climate are tropical wet, Mediterranean, tundra, and arid.



1. What is climate?

2. How is climate different from temperature?


3. What are four types of climate?

©Eckel 2005

Word Search

Name: _____

Climate Change Word Search



FOSSIL FUEL

GLOBAL WARMING

METHANE

WEATHER

EVAPORATION

GEOSPHERE

ATMOSPHERE

GLACIER

GREENHOUSE GAS

DEFORESTATION

OZONE

RADIATION

CARBON DIOXIDE

NITROUS OXIDE

CLIMATE CHANGE

© Monsterwordsearch.com



Week 6 -Day 1

Chapter no 3:- Can people affect by climate

Topic:Global warming

- List three things you should do to stop global warming.
(Take help from your book, page no 15-16)
- What do you know about greenhouse effect. Share your views about greenhouse effect.

Answer must be in 4 – 5 lines.(Topic: Greenhouse effect, Take help from your book page no 15)

Link: https://youtu.be/IKZMGBA_0Ik

Topic: Change in climate

Make a list of actions that you and your family can take to reduce the effects of human activities on climate change. (Take help from your book page no 16)

Links :<https://youtu.be/5eTCZ9L834s>

Topic: Change in climate

Match pictures and text

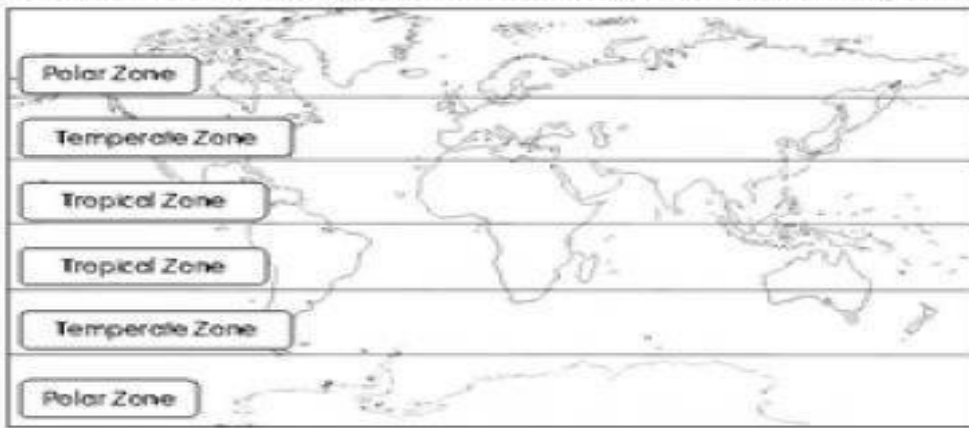
| | |
|---------------------------------|--|
| biofuel | |
| coal mine | |
| control panel for heater or A/C | |
| dam - hydroelectric power plant | |
| heavy industry | |
| incandescent light bulb | |
| nuclear power plant | |
| petrol station or gas station | |
| recycling could save the world | |
| solar panel | |
| wind turbine | |

Week 6-Day 2 worksheet



WORLD CLIMATIC ZONES

The world has several **CLIMATIC ZONES**. These are summarised on the map below.



Which zones are Australia located in? _____

Climatic zones are based on maximum and minimum temperatures and temperature range, as well as the total and seasonal rainfall.



Which climate zone would you like to live in and why? _____

© Teach-This-Worksheets.com

Topic : Climate (reinforcement)

Remember

- The Earth has three climatic zones: the **tropical zone**, two **temperate zones** and two **polar zones**.
- Spain has four different types of climate: the **Oceanic climate**, the **Mediterranean climate**, the **Mountain climate** and the **Subtropical climate**.

1 Complete.

Climate and _____ are not the same thing. _____

_____ is the typical weather patterns over a long period of time in one area.

The distance of an area from the _____ determines how much heat it receives from the _____. This affects climate.

2 Match.

| | |
|----------------|--|
| polar zone | It is hot all year round. |
| temperate zone | It is very cold all year round. |
| tropical zone | The summers are warm and the winters are cool. |

3 Identify and label the four climates in Spain.



A _____

B _____

C _____

D _____

Activity

If You're a Bully...

Bullying is hurtful to everyone involved. If you realize that you've been bullying someone, stop immediately! Read below to find out what you can do to change your bullying behaviors.

1. Own Up to Your Behaviors

Owning up to your behaviors means that you are taking responsibility for what you've done without making any excuses. Recognize that the behaviors you have been displaying are bullying behaviors and are a "big deal"!



2. Use Empathy

Put yourself in someone else's shoes so that you can understand what it's like to be bullied by others. Make sure that you are able to identify how the other person may be feeling. Use empathy to see how your behavior is affecting them and think of what you need to start doing differently.

3. Apologize

Once you've recognized how your bullying has affected someone else, it is important to apologize to that person. Realize that they may not be ready to accept your apology just yet. It might be helpful to write a letter to the person you've bullied. You could also ask an adult to help lead the conversation between the two of you.

4. Talk about Your Feelings

There might be a reason that you've been bullying someone else. You might not feel very confident about yourself, or you might have things going on that you may need to talk about with someone. It is important to seek the help of an adult that you trust.


© 2018 Mylemarks LLC. All Rights Reserved.
For more resources, visit www.mylemarks.com

Link: https://youtu.be/9n_ZQb0y5bk

AM I A BULLY?

Answer the questions below to determine whether you might be a bully.

| DO YOU DO THIS? | YES | NO |
|---|-----|----|
| Do you say or write mean things about someone even after they ask you to stop? | | |
| Do you repeatedly hit or hurt someone physically whenever an adult is not around? | | |
| Have you told anyone that they weren't allowed to be part of a club or team, or sit with a particular group of kids? | | |
| Is there someone that you pick on often and try to hurt their feelings or embarrass them? | | |
| Do you ever say untrue things about someone that could hurt their feelings or change the way others think about them? | | |
| Do you do things to deliberately annoy someone, such as throwing things at them when the teacher isn't looking? | | |
| Have you ever written something bad about someone and sent it through a text message or posted it online? | | |
| Are there certain places people are afraid to go because they know that you will be there to hurt them? | | |
| If you've hurt someone physically or emotionally, have you threatened them to keep them from telling an adult? | | |
| Do you ever make someone give you their money or any of their possessions? | | |
| Do you tell others to not be friends with someone for any particular reason? | | |
| Do you do or say mean things about others to try to get the people around you to laugh? | | |

If you answered yes to any of these questions, there's a chance that you are being a bully!
Talk to an adult to find out what you can start doing to change your behaviors.



© 2018 Mylemarks LLC. All Rights Reserved.
For more resources, visit www.mylemarks.com

Link: <https://youtu.be/4mrE5zgEvt4>

Computer Class: V

Week1:Day1

Topic # Algorithm and flow chart

A computer program is written using a programming language like LoG,BASlC,COBoL,C,C++,

etc.The step by step procedure for solving a problem written in plain english is known as an

Algorithm.

Video link:<https://youtu.be/KIHwyzVnsPU>

Worksheet

Q.1 Fill in the blanks.

1. A computer program is written using a _____.
2. The step by step procedure for solving a problem written in_____.
3. Add the two numbers, and store the _____as sum.
4. The instruction should be written in the_____sequence.
5. Every instruction should be given a _____.
6. Every instruction should be written in a _____.
7. Algorithm can also be presented in _____ form using various symbols
8. Flowchart is a _____representation .
9. A circle is used to connect _____ parts of a flowchart.
10. Output means giving out the _____.

Week1:Day2

Topic # Uses of Computer

- We can use computer in every field of life. It makes our task easy.

Video Link<https://www.youtube.com/watch?v=FypkPUscUX8&feature=youtu.be>

Q#1 Write the use of computer in calculation?

Ans:_____

Q#2 Write any two uses of computer in schools?

Ans:_____

Q#3 Write three uses of computer by own after watching above link.

Ans:_____

Week1:Day3

Topic :Flowcharts

The step by step procedure to solve a problem presented in a pictorial form using symbols is known as a flowchart.

Video link:<https://youtu.be/KIHwyzVnsPU>

Q.1 Match the column and write down the correct answer in column c.

| Column A | Column B | Column C |
|------------------------|-------------------|----------|
| Decision symbol | Start stop | |
| Connector | Processing symbol | |
| Start /stop | Decision symbol | |

Week2:Day1

Topic : Hardware Basics

Let us learn about hardware:

System unit, motherboard, processor

Video link:<https://youtu.be/kcqtln4jwBA>

Q1. Fill in the blanks.

- A computer can perform _____basic functions.
- The input unit consists of _____devices.
- The output unit consists of _____devices.
- Central processing unit is commonly known as_____.
- _____stands for arithmetic logic unit.
- _____stands for control unit.
- CPU consists of _____main components.
- Memory in a computer system is divided into _____categories.
- _____stands for random access memory.
- _____stands for read only memory called_____.
- _____stands for Universal Serial Bus.
- USB is a portable _____device.

Week2:Day2-Topic: system unit

System unit is the most important unit of a computer.it is a rectangular box, on or underneath the desk.

Components:

- Motherboard
- Processor
- Memory chip
- Expansion slots and cards

Video link:

<https://youtu.be/kcqtln4jwBA>

<https://youtu.be/kcqtln4jwBA>

Q1: Fill in the blanks.

- USB flash drive is also known as _____Drive.
- Monitor is an_____device.
- _____displays video or graphic information.

- _____ monitors display the result in only one color.
- _____ monitors present result in many colors.
- _____ stands for Liquid Crystal Display.
- Keyboard is an _____ device.
- _____ is used to enter text and other commands to a computer.
- Keyboard has _____ keys.
- Mouse is an _____ device.
- _____ is used to control the cursor on the screen.
- The mouse has _____ buttons

Week2:Day3-Topic: Parts of Computer

- Computer has different parts which are used to perform different tasks and to make work easy.
- The parts of computer are:
 1. Monitor
 2. Keyboard
 3. CPU
 4. Mouse
 5. Speakers

Video Link

<https://www.youtube.com/watch?v=zh10mJEOj4&feature=youtu.be>

Worksheet

Q1: Fill in the blanks.

1. Computer is an _____ machine.
2. Computer has different _____.
3. CPU is a _____ part of computer.
4. Keyboard is used to _____ data.
5. Mouse is an _____ device.
6. Speaker is used to _____.
7. Printer is used to _____.
8. Keyboard is _____ device.

Q#1 Define Monitor.

Ans: _____

Q#2 Write the difference between keyboard & CPU?

Ans: _____

Q#3 What is keyboard?

Ans: _____

Week3:Day1

Topic: Motherboard

Motherboard or system board is the backbone of computer. It is the hardware which contains the computer's micro-processing chip and everything attached to it .

Video link: <https://youtu.be/c3m9r62jMS8>

Q.1 Fill in the blanks.

1. A motherboard consists of _____.
2. _____ stands for Read Only Memory.
3. Robots need to be _____ before they can work.

4. Finger print scanners _____ be used for security.
5. The _____ is also known as CPU.
6. CPU is the _____ of computer.
7. The ALU is the major part of _____.
8. _____ is a series of black and white spaces.
9. Expansion card is an _____ board.
10. Barcodes are also called _____ codes.

Week3:Day2

Topic ; Memory

The memory chip of system unit is a chip which stores data on both, temporary and permanent basis.

Types:

- RAM
- ROM

Video link:

<https://youtu.be/c3m9r62jMS8>

Q1. State true or false.

1. A computer process data. _____
2. The keyboard outputs the result. _____
3. CPU only does calculations. _____
4. Secondary memory I also known as temporary memory. _____
5. Hard disk is a permanent storage device. _____
6. A keyboard contains keys. _____

Q2. Write the full form of the following.

1. RAM _____
2. ROM _____
3. ALU _____
4. CPU _____
5. CU _____

Week3:Day3

Topic: Keys of keyboard

Video Link

https://www.youtube.com/watch?v=Zis5_BU0za4&feature=youtu.be

Worksheet

Q1: Chose the correct option.

1. Main keys on keyboard are:
 - a. 103
 - b. 104
 - c. 105

2. Numeric keys contain:
 - a. numbers
 - b. alphabets
 - c. functions

●Write True or False for the following statements.

1. Output devices show results. _____
2. Monitor is an output device. _____
3. Monitor is used to enter data. _____
4. Monitor has two types. _____
5. Monitor looks like a television. _____

Q#1 What is plotter?

Ans: _____

Q#2 What is the role of plotter in drawing?

Ans: _____

Q#3 Is plotter used in medical reports?

Ans: _____

Week4:Day3

Topic # Software basics

System software means the entire collection of functions ,system services ,drivers, and other configuration files that are present in your computer.

Types:

- Application software
- Supportive software

Video link:

<https://youtu.be/HkQKtkw6-Rw>

Worksheet:

Q.1 Fill in the blanks.

1. System software has _____basic components.
2. _____ of a computer.
3. UNIX is a type of _____.
4. An Operating system has a_____ range of functions.
5. _____is used to explain the startup of your computer.
6. Operating system manages the _____ of programs in a system.
7. The Operating system handles the devices by creating a communication between the _____and _____.
8. A Disc scanner is also known as _____.
9. A File manager can also be used to change the _____.
10. _____is a collection of information.

Week5:Day1

Topic # Application software

Application software is a a set of programs designed to perform specialised tasks for a user.

Examples:

- Internet Explorer
- Word processor

- Multimedia application

Video link:<https://youtu.be/HkQKTKw6-Rw>

Worksheet

Q.2 State whether the statement are true or false.

1. System software is also called Low level software.
2. System software has three basic components.
3. Anti-virus utility scans the computer for viruses.
4. Operating system manages the resources of the computer.
5. GUI stands for Graphical user interface.
6. The system software is meant to be run by the user.
7. System software and application software are the same.
8. A spreadsheet is basically a grid that organizes data into column and rows.
9. Word processors are very helpful in creating reports and articles etc.
10. Dictionary is a very common activity for a student.

Week5:Day2

Topic # MS Word

Definition

MS word stands for Microsoft Word .it is software & it is used for typing & many other functions.

Video Link:https://youtu.be/w_iC78F5vwo

Q1: What is stands for MS Word?

Ans: _____

Q2: What is the use of MS Word?

Ans: _____

Q3:What is the use of Caps lock in MS word?

Ans: _____

Q4: Write the use of Enter key in MS Word?

Ans: _____

Week5:Day3

Topic

Topic: supportive software

There are several software which can be used for helping the user .These are the ones which are used for maintaining records, doing calculation, creating presentations. These can be categorized as **supportive software**.

Examples

- Spreadsheet
- Database managers
- Presentation software

Video link:

<https://youtu.be/gJf6AnD9RJY>

Worksheet:

Q.1 Fill in the blanks.

1. System software has _____ basic components.
2. Disc Scanner is also known as _____.
3. Windows is an _____.
4. _____ manages files on a system.
5. _____ utility scans the computer for viruses.
6. _____ stores the deleted files.
7. Software used for making documents is _____.
8. _____ is used to copy the image.
9. _____ is used to paste the image.
10. _____ is used to cut an image.

Week6:Day1**Topic # Operating system**

An operating system is a a set of programs which starts a computer and allows the user to interact with the hardware and software of computer.

Types:

- Microsoft Windows
- Unix
- Linux

Video link :

<https://youtu.be/8lc2L7ZyFC8>

Worksheet:**Q2. Match the columns or write the answer in column C.**

| Column A | Column B | Column C |
|---------------------|-------------------------------|----------|
| RAM | Small pictures | |
| ALU | Random Access Memory | |
| ROM | Control Unit | |
| CPU | Read Only Memory | |
| GUI | Type of operatingsystem | |
| Icons | System software components | |
| CU | Graphical user interface | |
| Unix | Central Processing Unit | |
| Utility Programs | Columns and rows | |
| Spreadsheet | Arithmetic logic unit | |

Week6:Day2**Topic #Function keys****Definition**

Function keys are keys placed on keyboard.

It is used to perform different functions.

Alphabet keys are letters from A to Z.

These keys contains on 26 keys.

It is used to type capital & small letters.

Video Link:<https://youtu.be/5209qxJTqFM>

<https://youtu.be/5209qxJTqFM>

Worksheet

Q#1 : True/False:

1. Alphabet keys consists on 26 letters.
2. It is used to type only capital letters.
3. It is placed on keyboard.
4. It is easy to use 5. Alphabet keys also starts from a to z.

Q#2 Where are functions keys placed?

Ans _____

Q#3 What is the use of F1 & F12 keys?

Ans _____

Q#4 What is use of Alt+ F4?

Ans: _____

Week6:Day3

Topic :Moving ahead with windows

When you switch ON the computer, windows gets loaded automatically .The windows desktop appears on the screen.

Video link:<https://youtu.be/xaHe736W oc>

Q.1 Define the following.

Title bar-Menu Bar-Ruler-Format Bar -Tool Bar

Week7:Day1

Topic :Window desktop

The desktop is the screen which is the workspace for windows .It allows the user to communicate with the computer

Video link:<https://youtu.be/xaHe736W oc>

Worksheet

Q.1 State true or false.

1. Changing the looks of text in a document is called formatting.
2. The Bold, Italic and Underline buttons are present on the format bar.
3. The Bold button is used for underline the text.
4. The blank space in the center of screen is called the work area.
5. Alignment refers to way text is set with respect to margins.

Q.2 Match the column and write their answer in column c.

| A | B | C |
|-----------|-----------------|----------|
| MS-Word | Select the text | |
| Ctrl+A | Undo | |
| Ctrl+Z | Word processor | |
| Bullets | Margin | |
| Alignment | Circular dots | |

Week7:Day2**Topic : Icons wallpaper and screen saver****Definition**

An icon is a pictogram or ideogram displayed on a computer.

Screen saver is a progra that displays moving pictures or graphics with or without sound

The background of windows desktop is known as wallpaper

Video Link

<https://youtu.be/dRTVILSiDGk>

Worksheet

Q#1 Define icon?

Ans: _____

Q#2Name any three icons.

Ans: _____

Q# 3What is screen saver?

Ans: _____

Q#4what is wallpaper?

Ans: _____

Week7:Day3**Topic: Uses of a Computer in different fields of life**

A computer can be used at home to play games, watch movies, make drawings and to do calculations.

Your parents use a computer to do their work.

A computer can be used at banks to maintain accounts.

A computer can be used at hospitals to help doctors and to maintain records.

A computer can be used at schools to teach students.

A computer can be used at stores to make bills.

Link for more information:

<https://www.youtube.com/watch?v=UlvmhKaOtbM&list=PLYiiWwLEK8vFQik3jxN6Gv03Iq39Hw3wj&index=2>

Worksheet 4

4: Answer the following questions.

1. Why do we use computers at banks?

2. Why do we use computers in hospitals?

3. Why do we use computers at home?

4. Why do we use computers at school?

General Knowledge Class: V

ENGLISH

- The 2nd phase of summer task is with you. We have designed it such as there are quizzes as well as you have to study the UNIT 2 of your Textbook.
- Go through the textbook thoroughly as the Unit 1, unit 2 along with Unit 3 will be included in the first assessment after the commencement of classes.
- We have divided the task in three parts. First three weeks comprise the LITERATURE AND Language QUIZ and the last three weeks comprise the exercises akin to the textbook.
- Take help from internet to solve the quiz.

WEEK 1

1. Identify the sentence which is correct in every way.

- a. Rashmi and Veena every Sunday go to the church near their house.
- b. Rashmi and Veena go to the church near their house every Sunday.
- c. Every Sunday near the church Rashmi and Veena go to their house.

2. Which sentence has a grammar mistake?

- a. My mother told me to put the books back in it's place.
- b. Tennis has lost its charm for me since Steffi Graf retired.
- c. It's Sunday tomorrow so I will catch my favorite cartoon.

3. Listed below are some words. Which one will appear FOURTH in the list if they are arranged in alphabetical order.

Blur----- Bless ----- Blink----- Blower

4. Identify the option with CORRECT spelling to complete the sentence

The _____ took his sheep and goats to graze on the mountains.

- a. shepherd
- b. sheperd

5. Identify the sentence with a spelling mistake.

- a. It is necessary to drink enough water daily.
- b. Having a balanced diet is extremely important.
- c. Spinach is plentiful in Minerals like Iron and Calcium.

6. Which of the following words has the SAME sound of 'G' as in "giant"?

- a. gate
- b. Rage
- c. Brag

7. Which option punctuates the sentence given below CORRECTLY?

Nisha said to me do you want me to drop you home.

- a. Nisha said to me," do you want me to drop you home."
- b. Nisha said to me," Do you want me to drop you home?"
- c. Nisha said to me "Do you want me to drop you home?"

8. The car in front of our scooter stopped 'abruptly'. Since we were not prepared for that,

we banged hard into it! the word ‘abruptly “as used in the sentence means_____

- a. slowly, without hurry
- b. Suddenly without warning
- c. Loudly, with a hard bang

9. Shahrukh Khan is a “famous” actor today. But when he came to Mumbai several years

ago, he was almost_____.

Which word is OPPOSITE IN MEANING TO” Famous”?

- a. poor
- b. unknown
- c. worthless

10. Today I was late for school. But since it had happened for the first time, the teacher

did not punish me.

Which word can replace” did not punish” in the sentence given above?

- a. Excused
- b. Explained
- c. Expected

WEEK 2

ANSWER THE FOLLOWING QUESTIONS.

1.What are examples of *be* verbs?

2.Give examples of action words.

3.What is the meaning of Linking verb?

4. What kind of verb is this sentence?” Her sister is a nurse”.

5.Is this sentence a transitive or intransitive verb?” He gave her best friend a gift.”

6. Give some examples of Helping Verbs.

7. Write some rhyming words of “trade”.

8.Complete the following proverb.

“Greed _____ is _____ a _____”

9.Complete the following sentence with the correct preposition.

Can you finish the work _____ tomorrow?

10.Complete the following.

Is your brother_____ home?

WEEK# 3

CHOOSE THE CORRECT OPTION.

1. William SHAKESPEARE was born in the year?

- A. 1564
- b. 1582
- c. 1666

2. In which century William Shakespeare was born?

- 1. 15th
- 2. 16th
- 3. 14th

3. Who was the hero of the novel "Charlie and the Chocolate Factory"?

- 1. Violet
- 2. Willy Wonka
- 3. Charlie

4. Which is the first book of Harry PORTER?

- 1. Harry Potter and the Philosopher's stone
- 2. Harry Potter and the Chamber of Secrets
- 3. Harry Potter and the Goblet of Fire

5. Which is the shortest book of Harry Porter?

- 1. Harry Potter and the Sorcerer's Stone
- 2. Harry Potter and the Half Blood prince
- 3. Harry Potter and the Chamber of Secrets

6. Who is the author of Harry Porter?

- 1. Jane Austen
- 2. William Shakespeare
- 3. J.K Rowling

7. Which is not a play by Shakespeare?

- 1. The Tempest
- 2. Devil's Disciple
- 3. Macbeth

2. still

3. never

9. Sit is to stand as _____ is to run.

- 1. hop
- 2. swim
- 3. walk

10. Back is to front as near is to _____

- 1. far
- 2. behind
- 3. wide

Week # 4

Read the textbook thoroughly ie Unit 2,3 and solve the following exercises.

Make up short dialogues using the given words and offers of help.

1. I've torn the leg of my trousers. (trousers/torn/leg)

Don't worry I'll mend it for you.

2.plate /chipped

3.shirt/blouse/arm/bent

4.lamp/arm/bent

5.cup/crack

6.photo-frame/glass/scratched

Week# 5

Complete the following exercise with the use of 'will, shall, can, must'.

1.We _____ Play Hockey tomorrow.

2.I _____ visit grandma next week.

3.I _____ solve this problem. This is very easy.

4.You _____ obey your parents.

5.Everyone _____ observe social distancing during the pandemic.

6.Hira and Maryam _____ play together.

7.Let's go home. The parents _____ be waiting for us.

8.They _____ not come to the party. The bus has already left.

9.When _____ you reach there?

10. _____ it rain today?

Week# 6

Write your own story by answering these questions. Use the given words or phrases or

use your own ideas.

I was climbing a cliff very carefully when I slipped 20 meters.

1.Where were you travelling? In the mountains/desert

2.Who were you travelling with? My parents/uncle and aunt

3.What were you riding? camels/horses/bicycles

4.What were you carrying? Backpacks/daypacks

5.What were you pulling? sledges/a cart

SST

WEEK 1

Answer the Following Questions.

Q1: In which part of Pakistan salt range is located?

Ans:

Q2: Which is the highest mountain?

Ans:

Q3: Which is the main river in the KPK province of Pakistan?

Ans:

Q4: Who built Badshahi Mosque in Lahore?

Ans:

Q5: When did Indian forces occupy Kashmir?

Ans:

Q6: When did Quaid-e-Azam all India Muslim League?

Ans:

Q7: Under which constitution Urdu was made National Language of Pakistan?

Ans:

Q8: Name the first Women Jet pilot of Pakistan?

Ans:

Q9: When did Benazir Bhutto was killed?

Ans:

Q10: When did Quaid-e-Azam die?

Ans:

WEEK 2

Answer the Following Questions.

Q1: Name the Pakistani scientist who won the noble prize?

Ans:

Q2: Which is the National game of Pakistan?

Ans:

Q3: Which province of Pakistan also known as Bab-ul-Islam?

Ans:

Q4: How many planets are there in a Solar system?

Ans:

Q5: When Benazir Bhutto was Murdered?

Ans:

Q6: Which is the largest dam of Pakistan?

Ans:

Q7: Which area has highest rainfall in Pakistan?

Ans:

Q8: Name the boundary between Pakistan and Afghanistan.

Ans:

Q9: Which is the largest seaport of Pakistan?

Ans:

Q10: Who discovered every applied force has an equal reaction?

Ans:

WEEK 3

Answer the Following Questions.

Q1: Which railway line connect Pakistan and Iran?

Ans:

Q2: Who defeated napoleon in the war of Waterloo?

Ans:

Q3: In which state of USA Hollywood is located?

Ans:

Q4: Who was Ibn-e-khaldun?

Ans:

Q5: Who was the first CM of Punjab?.

Ans:

Q6: Where is the Golden Gate?

Ans:

Q7: What is the word Urdu means?

Ans:

Q8: Name the first rocket launched by Pakistan?.

Ans:

Q9: When does the first Nuclear power plant established in Pakistan?

Ans:

Q10: Who is the inventor of electricity?

Ans:

WEEK 4

Answer the Following Questions.

Q1: Which is the biggest rainforest in the world?

Ans:

Q2: Who is the inventor of radio?

Ans:

Q3: Which is the most spoken language in the world?

Ans:

Q4: In which year World War 1 begin?

Ans:

Q5: Who is the inventor of television?

Ans:

Q6: Which is the largest country in the world?

Ans:

Q7: Which is the largest Plateau in this world?

Ans:

Q8: Which instrument is used to measure Blood pressure?

Ans:

Q9: Who invented television?

Ans:

Q10: Which day is observed as World literacy day?

Ans

WEEK 5

Answer the Following Questions.

Q1: Who is the founder of Microsoft?

Ans:

Q2: Which place is known as roof of world?

Ans:

Q3: Which gas is most abundant at earth atmosphere?

Ans:

Q4: Global warning is caused by the excess of which gas?

Ans:

Q5: What covers approximately 71% of earth surface?

Ans:

Q6: Which is the hardest substance available on earth?

Ans:

Q7: Who discovered Penicillin?

Ans:

Q8: When does Penicillin was discovered?

Ans:

Q9: Which instrument is used to measure atmospheric pressure?

Ans

Q10: Who was the first army chief of Pakistan?

Ans

WEEK 6

Answer the Following Questions.

Q1: Who was the president of Pakistan?

Ans:

Q2: When Liaquat Ali Khan was born?

Ans:

Q3: Who was the first finance minister of Pakistan?

Ans:

Q4: Name the longest tunnel of Pakistan?

Ans:

Q5: When did Muhammad Bin Qasim enter Sindh?

Ans:

Q6: Where Tirth-Mir is located?

Ans:

Q7: Which river flows through the Salt Range?

Ans:

Q8: When was the first nuclear power plant established in Pakistan?

Ans:

Q9: Who composed the National Anthem of Pakistan?

Ans:

Q10: What is a glacier?

Ans:

Math

WEEK 1

1. I am an odd number. Take away one letter and I become even. What number am I?
2. Using only addition, how do you add eight 8's and get the number 1000?
3. Sally is 54 years old and her mother is 80, how many years ago was Sally's mother three times her age?
4. Which 3 numbers have the same answer whether they're added or multiplied together?
5. There is a basket containing 5 apples, how do you divide the apples among 5 children so that each child has 1 apple while

1 apple remains in the basket?

6. There is a three digit number. The second digit is four times as big as the third digit, while the first digit is three less than the second digit. What is the number?

7. What word looks the same backwards and upside down?

8. Two girls were born to the same mother, at the same time, on the same day, in the same month and in the same year and yet somehow they're not twins. Why not?

9. A ship anchored in a port has a ladder which hangs over the side. The length of the ladder is 200cm, the distance between each rung is 20cm and the bottom rung touches the water. The tide rises at a rate of 10cm an hour. When will the water reach the fifth rung?

10. The name of the polygon that has 6 sides?

WEEK 2

1. How many sides of equal length does an equilateral triangle have?

2. The distance from the center of a circle to its edge is called what?

3. True or false? A scalene triangle has two sides of equal length.

4. A trapezoid (trapezium) features how many pairs of parallel sides?

5. The internal angles of a square each measure how many degrees?

6. True or false? A concave shape bends inwards.

7. How many sides does an octagon have?

8. True or false? A parallelogram features three pairs of parallel sides.

9. How many points are there on a pentagon?

10. In an isosceles triangle, how many sides are of equal length?

WEEK 3

1. What is the difference between the largest three digit number and the smallest four digit number?

2. What is the smallest odd prime number?

3. What is the largest three digit even number?

4. How many prime numbers are there between 1 and 10?

5. What is the place value of 7 in 417,532?

6. How many months have 30 days?

7. What is the product of any number and 1?

8. What is the value of $15 \times 40 \times 3 \times 0$?

9. What is the value of $45 \div 15 \times 0$?

10. What is the sum of first two prime numbers?

WEEK 4

1. What is the sum of all one digit prime numbers?

2. What will be the quotient if we divide 360 by 4?
3. What should be added to 20 to get the sum 42?
4. Which number when multiplied by itself gives 144 as product?

Dividend is exactly divisible by divisor if _____ is 0.

5. What is the first common multiple of 5 and 8?
6. What are the factors of prime numbers?
7. What is the H.C.F. of co-prime numbers?
8. What is the smallest multiple of 184?
9. What is the L.C.M. of 16 and 64?

WEEK 5

1. I am a factor of every number. Who am I?
2. What is the multiple of 8 between 20 and 30?
3. What is the third odd multiple of 15?
4. How many $\frac{1}{4}$ make 2 wholes?
5. How many months are there in one third of a year?
6. How many half hours make a day?
7. What is half of a quarter?
8. What is the multiplicative inverse of 7?
9. Which type of fraction represents more than 1?
10. What is the equivalent fraction for $\frac{3}{5}$ which has denominator 15?

WEEK 6

1. What is the value of quarter of 240?
2. How many dam are there in 3.2 km?
3. How many mm make 7 m?
4. Which unit will you use to measure distance between Delhi and Agra?
5. How many liters are there in 1.5 kiloliters?
6. By how many times does the area of a square increase if length of the square is doubled?
7. What will be the side of a square with area 64 sq.cm?
8. What is the area of a unit cm square?
9. _____ To know
the number of tiles needed for a room we need to know its _____.
10. _____ To know
the length of border for a blanket, its _____ should be known-

WEEK 7

1. What will be the area of a rectangle with dimensions 6m X 4m?
2. How many unit cm squares when joined give the area 6 sq.cm?
3. Figures with same area may have different perimeter? (Yes/No)
4. What is the formula for area of a square?

5. What is the formula for perimeter of rectangle?
6. What type of an angle is formed between the hands of the clock when it is 10:10 by the clock?
7. Opposite edges of a ruler is an example of _____ lines.
8. What is the length of a 50m broad field whose area is 2000 sq. m.?
9. What will be the area of a square whose perimeter is 40 cm?
10. How many sides are there in an octagon

جماعت پنجم

مضمون اسلامیات

پہلا ہفتہ

- 1- انسان کے اعمال کو لکھنے کے لئے اللہ تعالیٰ نے دو معزز فرشتے مقرر کیے ہیں ان کے نام بتائیں -
- 2-؟ حضرت اسرافیل علیہ السلام کے صور پھونکنے سے کیا ہوگا
- 3-؟ کرامن کاتبین کیا کام کرتے ہیں
- 4-؟ دنیاوی زندگی کا کیا مقصد ہے
- 5-؟ قیامت کے روز اعمال ناموں کے ساتھ کیا کیا جائے گا
- 6-؟ ہمیں دنیاوی زندگی کس طرح بسر کرنی چاہیے
- 7-؟ قیامت کے روز کن لوگوں کو جنت میں داخل کیا جائے گا
- 8-؟ انسان کے اعمال لکھنے کے لیے اللہ تعالیٰ نے کتنے فرشتے مقرر کیے ہیں
- 9-؟ مشہور کول میں دنیا کی مثال کس چیز سے دی گئی ہے
- 10-؟ دوزخ کس طرح کی جگہ ہے

دوسرا ہفتہ

- 1-؟ اطاعت کس زبان کا لفظ ہے
- 2- اطاعت کا مفہوم بیان کریں -
- 3- اطاعت رسول صلی اللہ علیہ وسلم کی اہمیت بیان کریں -
- 4-؟ اللہ تعالیٰ کی محبت کا حصول کیسے ممکن ہے
- 5-؟ دنیا اور آخرت کی کامیابی کے لیے کیا لازمی ہے
- 6- نماز جمعہ کا تعارف بیان کریں
- 7-؟ نماز جمعہ کی اہمیت کے بارے میں رسول پاک صلی اللہ علیہ وسلم نے کیا فرمایا
- 8- نماز جمعہ کے دو آداب بیان کریں -
- 9- جمعۃ المبارک کے معاشرتی اہمیت بیان کریں -
- 10-؟ عیدین سے کیا مراد ہے

تیسرا ہفتہ

- 1- عید الفطر کے بارے میں چند الفاظ بیان کریں -
- 2- عید الاضحیٰ کے بارے میں چند الفاظ بیان کریں -
- 3- عیدین کے کوئی سے دو آداب بیان کریں -
- 4-؟ نماز جمعہ کس وقت ادا کی جاتی ہے
- 5-؟ نماز جمعہ میں کتنی فرض رکعت ہوتی ہیں

6-؟ عید الفطر کب منائی جاتی ہے

7-؟ عید الاضحیٰ کے دن کی قربانی کی یاد میں منائی جاتی ہے

8-؟ عید الاضحیٰ کون سے اسلامی تاریخ کو منائی جاتی ہے

9-؟ روزے کو عربی میں کیا کہتے ہیں

10-؟ اسلام میں روزے سے کیا مراد ہے

بفتہ چوتھا

1-روزے کے کوئی سے چار فوائد بیان کریں -

2-؟ روزے کی فرضیت کے بارے میں اللہ تعالیٰ کا کیا حکم ہے

3-؟ صوم کے لفظی معنی کیا ہیں

4-عبادت سے بھی زیادہ ہے لیلۃ القدر میں عبادت کا ثواب کتنے مہینے کی

5-؟ اللہ تعالیٰ نے کس مہینے میں قرآن مجید نازل کیا

6-روزے کی فرضیت کے بارے میں ایک آیت کا ترجمہ لکھیں -

7-؟ روزہ کس سے بچنے کا بہترین طریقہ ہے

8-مہاجرین سے مراد کون لوگ ہیں

9-؟ مسلمانوں نے کن کے ظلم سے تنگ آکر ہجرت کی

10-؟ انحصار کا کیا مطلب ہے

بفتہ پانچواں

1-؟ اہل مدینہ کا پیشہ کیا تھا

2-مہاجرین سے کون لوگ مراد ہے

3-انصار سے کون لوگ مراد ہیں

4-میثاق مدینہ میں کس سے مقدس شہر تسلیم کیا گیا

5-مسلمانوں نے کن کے ظلم سے تنگ آکر ہجرت کی

6-انصار کا کیا مطلب ہے

7-مواخات کس زبان کا لفظ ہے

8-مہاجرین کس پیشہ سے منسلک تھے

9-اہل مدینہ کا پیشہ کیا تھا

10-مواخات مدینہ کی بدولت کس کی پریشانیوں کا خاتمہ ہو گیا

بفتہ چھٹا

1-مسجد نبوی کی عمارت کس چیز سے بنائی گئی تھی تھی

2-صفہ سے کیا مراد ہے

3-مسجد نبوی کی فضیلت بیان کریں

4-مسجد نبوی کی معاشرتی اہمیت تحریر کریں

5-مکہ مکرمہ سے مدینہ منورہ ہجرت کر کے رسول اللہ صلی اللہ علیہ وسلم نے کس کے گھر قیام فرمایا

6-مسجد نبوی کے لیے جو جگہ منتخب کی گئی وہ کس کی ملکیت تھی

7--مجاہدین اسلام کا مرکز اور تربیت کا کونسی جگہ تھی

8-مسجد نبوی میں نماز ادا کرنے سے ثواب میں کتنے گنا اضافہ ہوتا ہے۔

9-مدینہ منورہ میں یہودیوں کے کتنے قبائل آباد تھے۔

10-انصار کے قبائل کون سے تھے ۔

Science

Week 1:

General Knowledge questions:

Link:<https://icebreakerideas.com/science-trivia/>

1. Which is the essential gas important for breathing?

2. What is the nearest planet to the sun?

3. How many teeth does an adult human have?

4. The earth has three layers of varying temperatures. What are its three layers?

5. What is the largest planet in the solar system?

6. What do bees collect and use to create honey?

7. What is the hottest planet in the solar system?

8. What is the rarest blood type?

9. On what part of your body would you find the pinna?

10. What part of the plant conducts photosynthesis?

Week 2:

1. What's the boiling point of water?

2. What is the largest known land animal?

3. What is the largest known animal?

4. What tissues connect the muscles to the bones?

5. Who was the scientist to propose the three laws of motion?

6. The planet Earth is surrounded by different layers of gas, which when taken together, we call the...?

7. Animals that eat both plants and meat are called what?

8. Which of Newton's Laws state that 'for every action, there is an equal and opposite reaction'?

9. Diabetes develops as the result of a problem with which specific organ in the body?

10. True or false: sound travels faster in air than in water.

Week 3:

1. How long does a human red blood cell survive?

2. True or false – lightning is hotter than the sun.

3. This planet spins the fastest, completing one whole rotation in just 10 hours.
Which planet is it?

4. How many elements are there in the periodic table?

5. This planet has a collective 53 moons, making it the planet in our solar system with the most number of moons.

5. Where can you find the smallest bone in the human body?

6. How many hearts does an octopus have?

7. True or false: male seahorses give birth to their young, not the females.

8. The oldest living tree is 4,843 years old and can be found where?

9. Can you hear anything in outer space?

Week 4:

1. What is the tallest type of grass?

2. Dolly was the first ever living creature to be cloned. What type of animal was she?

3. This animal was the first ever to be launched into space. She was strapped into the Soviet Sputnik 2 spacecraft which was sent out into outer space on November 3, 1957. What was her name?

4. What type of animal was Laika?

5. An egg's shell is what percentage of its total weight?

6. What is the hardest known natural material?

7. Who is regarded as the man who invented the telephone?

8. What is considered the highest mountain in Africa?

9. How many bones do sharks have in total?

10. What is the hardest known natural material?

Week 5:

Link: <https://www.sciencekids.co.nz/quizzes/humanbody.html>

1. What is the name of the biggest part of the human brain?

2. The colored part of the human eye that controls how much light passes through the pupil is called the?

3. What is the name of the substance that gives skin and hair its pigment?

4. The muscles found in the front of your thighs are known as what?

5. True or false? The two chambers at the bottom of your heart are called ventricles.

6. What substance are nails made of?

7. What is the human body's biggest organ?

8. The innermost part of bones contains what?

9. True or false? An adult human body has over 500 bones.

10. How many lungs does the human body have?

Week 6:

1. Another name for your voice box is the?

2. The two holes in your nose are called?

3. Your tongue is home to special structures that allow you to experience tastes such as sour, sweet, bitter and salty, what is their name?

4. The bones that make up your spine are called what?

5. The shape of DNA is known as?

6. The flow of blood through your heart and around your body is called?

7. The bones around your chest that protect organs such as the heart are called what?

8. What is the name of the long pipe that shifts food from the back of your throat down to your stomach?

8. True or false? Your ears are important when it comes to staying balanced.

9. The outside layer of skin on the human body is called the?

Computer

Work sheet # 1

Write short answers:

What is MS Word?

What is MS Power point?

What is a cell?

What is a Row?

What is column?

Define title bar?

Define standard toolbar?

Work sheet #2

Fill in the blanks:

Computers: Inside & Out - Operating Systems Vocabulary Worksheet

Fill in the blanks with the vocabulary words from the box below.
Use each word only one time.

| | | | |
|---------------|------------------|----------|----------|
| hard drive | Windows | upgraded | BIOS |
| user friendly | essential | graphics | System 8 |
| DOS | operating system | | |

- The large program that controls how the CPU communicates with other hardware components is the _____.
- A computer that is easy to operate is called _____.
- The _____ wakes up the computer and reminds it what to do.
- The _____ part of the operating system is stored on ROM.
- Important, but non-essential, parts of the operating system are stored on the computer's _____.
- Disk-based Operating System is also known as _____.
- _____ is the most common operating system for PCs.
- Operating systems are constantly being _____ as technology advances.
- One example of a Macintosh operating system is _____.
- A Graphical User Interface uses _____ to help the user navigate within the computer system.

(c) The Kids Domain - www.kidsdomain.com - free for non-profit use

Worksheet #3

Write short question answers?

What is input devices?

What is output devices?

Name any 2input devices?

Name any 2 output devices?

Name any five storage devices?

Worksheet #4- Crossword puzzle:

Computers: Inside & Out - Outer Hardware Input/Output Worksheet

Output devices receive information from the CPU and translate it into sounds or images we can understand.


Input devices allow us to send information to the CPU to tell the computer what to do.

Write INPUT or OUTPUT in the blank next to the components listed.

1. Monitor

COMPUTER PARTS CROSSWORD PUZZLE WORKSHEET

LOOK AT THE NUMBERS ON THE PICTURES AND WRITE THE COMPUTER PARTS VOCABULARY IN THE CROSSWORD PUZZLE



Copyright © 2014, englishsheets.com. All rights reserved.

Work sheet #5

Abbreviations write down the full forms :

| | | |
|---|-----|-------|
| 1 | CPU | |
| 2 | VDU | |
| 3 | ROM | |
| 4 | RAM | |
| 5 | CD | |

Write down the short cuts keys of these:

1. Save: _____
2. Cut: _____
3. Paste: _____
4. Copy: _____
5. Open: _____
6. Underline: _____
7. Print: _____

Work sheet # 6:

Word search:

Name: _____

Date: _____

PARTS OF A COMPUTER

U Y U S H J A H Z R E T N I R P G S H E D K J X
 N E Y U N E F E V I R D D R A H L A N R E T X E
 M C G W N C L B Q G A I D E P O L C Y C N E K H
 Y N S P R N T V N K L E Q V Q M J Q V G L O S A
 H H J X H L X H Z T Y V R E K A E P S C V D K R
 D J R H C Z Y R A N O I T C I D O G H G Y S D D
 B D K Q A A M B A A L R Z X G I G Y M A G C X D
 L T S K V Q E E Q K M D K N X J Y J J Z B L K R
 B M Y B X D D Q U L D H R B Y E F Z B Q N R C I
 K M O D E M I N P I W S G V L W O I E R R T A V
 Y N W Q W N A S X Q O A T K O D W N J N O U J E
 P M W B D L G L I M T L B T R T M C T W M Q E S
 A E Y E I Z Y L N D F F E U N I D U X J M I N N
 V Q U S X L S D R A O B Y E K N Q R O D B G O T
 L S D C T Z N M M N M Z A T W U H O Y E I P H H
 N K C A J S E N O H P D A E H M F J A S C T P M
 N I V N E D R R Q M C Z C M G E S F R U O Y O O
 C T V A N B W T E B P O R O F T A P T O N J R N
 I X T A S K B A R G Y I V E Y S Y B M M S F C I
 V X E D E S K T O P Z A R H V Y C O E B G V I T
 G H W I H J V Y C C I X P C I S N J T O Y X M O
 V K N W R Q U O K Q D V F H P S O O S M H X O R
 M Y Y E C J C I R Y Y X B Y U Z V B Y K A X O R
 N T M U L T I M E D I A X L O O U A S S D X V V

| | | | |
|------------|------------|----------|--------------|
| HEADPHONES | MICROPHONE | FLASH | EXTERNAL |
| JACK | JACK | DRIVE | HARDDRIVE |
| KEYBOARD | SPEAKER | MOUSE | SYSTEM UNIT |
| MODEM | PRINTER | MONITOR | SYSTEM TRAY |
| TASK BAR | ICONS | DESK TOP | ENCYCLOPEDIA |
| DICTIONARY | MULTIMEDIA | MEDIA | HARD DRIVE |

اردو

پہلا ہفتہ

- . سوال نمبر ایک روشنی کی صحیح رفتار کب اور کس نے معلوم کی تھی .
- سوال نمبر 2 روشنی کی رفتار کتنی ہوتی ہے.
- سوال نمبر 3 زمین کی اوپر کی سطح کو کیا کہتے ہیں.
- سوال نمبر 4 زمین کی کرسٹ کی موٹائی کتنی ہوتی ہے.
- سوال نمبر 5 گونگا جانور کس جانور کو کہا جاتا ہے .
- سوال نمبر 6 انسانی جسم میں سب سے بڑی ہڈی کون سی ہوتی ہے.
- سوال نمبر 7 عقاب کم سے کم کتنی رفتار میں پرواز کرسکتا ہے.
- سوال نمبر 8 انسانی جسم میں سب سے کمزور ہڈی کون سی ہوتی ہے.
- سوال نمبر 9 کنول کے پھول کا دوسرا نام کیا ہے .
- سوال نمبر 10 قومی ترانہ کس نے لکھا .
- سوال نمبر 10 قومی ترانہ کس نے لکھا.

دوسرا ہفتہ

- سوال نمبر 1 ایک اڑان میں ایک مکھی اڑتے وقت اپنے پروں کو کتنی بار اوپر نیچے کرتی ہے.
- سوال نمبر 2 وہ کونسا جانور ہے جسے ماہرین نے حیوانات نے تمام حیوانات کی پہیلی قرار دیا ہے.
- سوال نمبر 3 وہ کونسا واحد پرندہ ہے جس سے چمڑا بھی حاصل کیا جا سکتا ہے.
- سوال نمبر 4 یورینیم سے کوئلے کی نسبت کتنی توانائی حاصل کی جاسکتی ہے.
- سوال نمبر 5 پرنٹنگ پریس کا موجد کون ہے.
- سوال نمبر 6 پاکستان میں ریلوے کا سب سے لمبا روڈ کونسا ہے.
- سوال نمبر 7 پ کس مقام پر پاکستان کے پانچ دریا آپس میں جا ملتے ہیں.
- سوال نمبر 8 پاکستان کی خلائی ایجنسی کا کیا نام ہے.
- سوال نمبر 9 ذوالفقار علی بھٹو کو پھانسی کب دی گئی.
- . سوال نمبر 10 چاند پر سب سے پہلا قدم کس نے رکھا.

تیسرا ہفتہ

- س1 پاکستان کے کس صوبہ میں سب سے زیادہ زبانیں بولی جاتی ہیں.
- س2- پاکستان پہلی دفعہ کب اور کون سا راکٹ لانچ کیا تھا.
- س3- پاکستان میں سب سے بلند ریلوے اسٹیشن کون سا ہے.
- س4- اردو کا مطلب کیا ہے.
- س5- اسٹیٹ بینک آف پاکستان کو افتتاح کب اور کس نے کیا تھا.
- س6- پاکستان کا سب سے چھوٹا دریا کون سا ہے.
- س7- پاکستان کا سب سے بڑا سیمنٹ پلانٹ کہاں واقع ہے.
- س8- پاکستان کی سب سے بڑی نہر کون سی ہے.
- س9- پاکستان کا سب سے بڑا ریلوے اسٹیشن کہاں واقع ہے.

س10- پاکستان کی سب سے لمبی سڑک کون سی ہے۔

چوتھا ہفتہ

- س1- پاکستان میں سب سے زیادہ وقت تک کس وزیراعظم نے ملازمت کی۔
- س2- پاکستان کا سب سے بڑا ہاکی اسٹیڈیم کہاں پر واقع ہے۔
- س3- پاکستان کے پہلے ٹی وی چینل پی ٹی وی کا آغاز کب ہوا تھا۔
- س4- مینار پاکستان جگہ کا پرانا نام کیا تھا۔
- س5- پاکستان میں سب سے کم وقت تک بطور صدر پاکستان صدارت کس نے کی تھی۔
- س6- انسانی چہرے کا پہلا اظہار کون سا ہے۔
- س7- جسم پر موجود بال کون سے سلیز پر مشتمل ہوتے ہیں۔
- س8- انسانی بال ایک دن میں کتنے انچ بڑھتا ہے۔
- س9- انسان زیادہ سے زیادہ کس رفتار سے بول سکتا ہے۔
- س10- اب تک دنیا کا تیز دوڑنے والا شخص کون ہے۔

پانچواں ہفتہ

- س1- ویل مچھلی کتنی رفتار سے تیر سکتی ہے۔
- س2- گھوڑا زیادہ سے زیادہ کتنی رفتار سے دوڑ سکتا ہے۔
- س3- کون سا واحد پرندہ سب سے تیز رفتار سے دوڑ سکتا ہے۔
- س4- دنیا کا سب سے تیز رفتار جانور کون سا ہے۔
- س5- دنیا کا سب سے پیارا اور بیوقوف جانور کون سا ہے۔
- س6- وہ کون سا پھل ہے جس کا درخت لمبے عرصہ تک پھل دیتا رہتا ہے۔
- س7- ایک ٹن میں کتنے کلو گرام ہوتے ہیں۔
- س8- پرندوں کا بادشاہ کس پرندے کو کہا جاتا ہے۔
- س9- دنیا میں سب سے زیادہ پیدا ہونے والی سبزی کون سی ہے۔
- س10- وہ کون سا پھل ہے جس کے درخت میں لکڑی نہیں ہوتی۔

چھٹا ہفتہ

- س1- انسانی جسم کا سب سے طاقتور حصہ کون سا ہوتا ہے۔
 - س2- دنیا میں سب سے زیادہ کھایا جانے والا پھل کون سا ہے۔
 - س3- وہ کون سی مسجد ہے جہاں سال میں صرف دو فرض نمازیں پڑھائی جاتی ہیں۔
 - س4- شہد کی مکھیاں سرخ رنگ کے پھولوں کا رس کیوں نہیں چوستی۔
 - س5- مینار پاکستان کا نقشہ کس نے بنایا۔
 - س6- سورج سب سے پہلے کس ملک میں نکلتا ہے۔
 - س7- دنیا کی سب سے بڑی عمارت کون سی ہے۔
 - س8- پاکستان کا قومی رس کون سا ہے۔
 - س9- دنیا میں سب سے زیادہ پڑھی جانے والی کتاب کون سی ہے۔
 - س10- دنیا میں اس وقت کل کتنے ممالک ہیں۔
- سبق نمبر - ایک دو تین لکھنا اور یاد کرنا ہے۔

اسلامیات سیلیبس برائے پنجم

عمومی ہدایات برائے طلبہ و والدین

- ☆ اردو لکھائی خوشخط کریں۔
- ☆ کام نیت کا پی پر کریں۔
- ☆ حاشیہ ضرور لکھیں۔
- ☆ مشکل الفاظ کے معانی اور محاورات کے معانی کے لئے اردو لغت کا استعمال کریں۔
- ☆ سرگرمیاں والدین اپنی نگرانی میں کروائیں اور ان کا تصویری ثبوت ضرور بھیجیں۔
- ☆ طلبہ اردو اخبار روزانہ کم از کم آدھا گھنٹہ ضرور پڑھیں اور تلفظ بہتر کرنے پر زور دیں۔
- ☆ والدین سے درخواست ہے کہ چھٹیوں کو کارآمد بنانے کے لئے دیا گیا کام اپنی نگرانی میں کروائیں اور جہاں کہیں بھی ضرورت ہو متعلقہ استانی سے رابطہ کریں۔
- ☆ ہمارا بنیادی مقصد یہ ہے کہ آپ کا تعلق اپنی تعلیم سے جڑا رہے۔ اسی مقصد کے تحت آپ کے لئے تخلیقی اور تعلیمی سرگرمیوں سے بھرپور تعطیلات کا کام تیار کیا گیا ہے۔

سیلیبس پہلا ہفتہ

عزیز طلبہ اس ہفتے کا کام آپ کو دی گئی ہدایات کے مطابق مکمل کرنا ہے۔

| تاریخ | عنوان | صفحہ نمبر | گھر کا کام | سرگرمی |
|------------------|---|-----------|--|---|
| 1 جون 2020 | القرآن الکریم | 4، 3 | حفظ قرآن مجید آیتہ الکرسی ، سورہ الفلق، سورہ الناس | ناظرہ قرآن مجید پارہ نمبر 4 تا 6 |
| 2 جون 2020 | القرآن الکریم | 5 6، | حفظ و ترجمہ سورہ الفاتحہ ، التحیات، درود ابراہیمی | کی پڑھائی کریں |
| 3 جون 2020 | ایمانیات و عبادات دنیا آخرت کی کھیتی ہے | 8، 7 | بلند خوانی مشق: 1 مختصر جوابات اتاہ لکھیں۔ مشق: 2 درست جواب کا انتخاب | کی پڑھائی کریں |

جماعت پنجم

ورک شیٹ نمبر 1

* خالی جگہ پر کریں۔

ا: حضرت اسرافیل علیہ السلام ----- کے حکم سے صور پھونکیں گے۔

ب: معزز فرشتے انسان کی نیکیاں اور برائیاں ----- میں درج کرتے ہیں۔

ج: ان اعمال ناموں میں موجود ----- کا وزن کیا جائے گا۔

د: دنیا ----- کی کھیتی ہے۔

ه: قیامت کے روز تمام انسان ----- کے حکم سے دوبارہ زندہ کئے جائیں گے۔

* درست اور غلط جملوں کا انتخاب کریں۔

ا: قیامت کے دن پہاڑ روئی کے گالوں کی طرح اڑیں گے۔

ب: آخرت کے روز حضرت میکائیلؑ اللہ تعالیٰ کے حکم سے صور پھونکیں گے۔

ج: دوزخ انتہائی تکلیف دہ جگہ ہے۔

د: دنیا کی زندگی ہمیشہ کے لئے ہے۔

ہ: جس نے دنیا میں نیک کام کئے اسے جنت میں داخل کیا جائے گا۔

سیلیبس دوسرا ہفتہ

عزیز طلبہ اس ہفتے کا کام آپ کو دی گئی ہدایات کے مطابق مکمل کرنا ہے۔

| ذرائع | گھر کا کام | صفحہ نمبر | عنوان | تاریخ |
|-----------------------|---|-----------|------------------------------------|---------------|
| کتابی مواد ورک شیٹ | بلند خواند ی | 11 | اطاعت رسول ﷺ اور اس کی اہمیت | 8جون 2020 |
| | بلند خوانی مشق: 3 درست جواب کا انتخاب | 12 | اطاعت رسول ﷺ اور اس کی اہمیت | 9جون 2020 |
| | مشق: 1 مختصر جوابات 1 تاہ لکھیں۔ مشق: 3 خالی جگہ پر کرنا | 13 | اطاعت رسول ﷺ اور اس کی اہمیت | 10جون 2020 |

ورک شیٹ نمبر 2

جماعت : پنجم

احادیث کی روشنی میں اطاعت رسول ﷺ کی اہمیت پر نوٹ لکھیں

سیلیبس تیسرا ہفتہ

عزیز طلبہ اس ہفتے کا کام آپ کو دی گئی ہدایات کے مطابق مکمل کرنا ہے۔

| سرگرمی | گھر کا کام | صفحہ نمبر | عنوان | تاریخ |
|----------------------------|---|-----------|---------------------|-------------|
| مسنون اعمال کا خاکہ بنانا۔ | بلند خوانی | 15,16 | سنت نبوی ﷺ کی اہمیت | 15 جون 2020 |
| | مشق: 1 مختصر جواب لکھیں الف تا ہ مشق: 4 درست کالم کا انتخاب کریں۔ | 16 | سنت نبوی ﷺ کی اہمیت | 16 جون 2020 |
| | مشق: 2 درست جواب پر نشان لگائیں۔ مشق: 3 خالی جگہ پر کریں | 17 | سنت نبوی ﷺ کی اہمیت | 17 جون 2020 |

ورک شیٹ نمبر 3

جماعت پنجم

سوال: ارکان اسلام سے کیا مراد ہے؟ ارکان اسلام کے نام لکھیں۔

ارکان اسلام کے نام

-----:1

-----:2

-----:3

-----:4

-----:5

سیلیبس چوتھا ہفتہ

عزیز طلبہ اس ہفتے کا کام آپ کو دی گئی ہدایات کے مطابق مکمل کرنا ہے۔

| سرگرمی | گھر کا کام | صفحہ نمبر | عنوان | تاریخ |
|--|---|-----------|--------------------------------------|-------------|
| آپ عیدین کیسے گزارتے ہیں ، اپنی کاپی میں لکھیں | بلند خوانی | 19 20 | جمعہ و عیدین تعارف اور معاشرتی اہمیت | 22 جون 2020 |
| | بلند خوانی مشق: 3 خالی جگہ پر کریں۔ | 21 22 | جمعہ و عیدین تعارف اور معاشرتی اہمیت | 23 جون 2020 |
| | مشق: 1 مختصر جوابات لکھیں۔ الف تا ہ مشق: 2 درست جواب کا انتخاب کریں۔ | 22 | جمعہ و عیدین تعارف اور معاشرتی اہمیت | 24 جون 2020 |

ورک شیٹ نمبر 4

جماعت پنجم

کالم الف کو کالم ب سے ملائیں۔

کالم ب

وہیں بیٹھ جانا چاہئے۔

زیادہ فضیلت والا دن ہے۔

عظیم قربانی کی یاد میں منائی جاتی ہے۔

مصافحہ کرتے ہیں اور گلے ملتے ہیں۔

یکم سوال کو منائی جاتی ہے۔

کالم الف

ا: جمعہ کا دن ہفتے کے تمام دنوں میں سب سے

ب: مسجد میں جہاں جگہ ملے

ج: عید الاضحیٰ حضرت ابراہیمؑ کی

د: عید الفطر رمضان کے روزے مکمل ہونے کی خوشی میں

ہ: نماز عین کے بعد سارے مسلمان ایک دوسرے سے

عید الفطر اور عید الاضحیٰ کس اسلامی مہینے میں منائی جاتی ہیں؟ مہینوں کے نام لکھیں۔

عید الفطر -----

عید الاضحیٰ -----

سیلیبس پانچواں ہفتہ

عزیز طلبہ اس ہفتے کا کام آپ کو دی گئی ہدایات کے مطابق مکمل کرنا ہے۔

| سرگرمی | گھر کا کام | صفحہ نمبر | عنوان | تاریخ |
|--|---|-----------|-------------------------|---------------|
| روزے کی فضیلت اور فوائد پر ایک تقریری نوٹ لکھیں۔ | بلند خوانی | 24 | روزے کا تعارف اور اہمیت | 29 جون 2020 |
| | بلند خوانی مشق: 3 خالی جگہ پر کریں۔ | 25 | روزے کی معاشرتی اہمیت | 30 جون 2020 |
| | مشق: 1 سوالات کے جوابات لکھیں۔ الف تا ج مشق: 1 سوالات کے جوابات سوال (د) اور (ہ) | 25 26 | روزے کا تعارف اور اہمیت | 1 جولائی 2020 |

ورک شیٹ نمبر 5

جماعت پنجم

درست جواب کا انتخاب کریں۔

1: روزہ رکھنے سے دوسروں کے ساتھ کس طرح کا جذبہ اجاگر ہوتا ہے؟

- 1 - ہمدردی کا 2- دشمنی کا 3- حقارت کا 4- حسد کا

2: صوم کے لفظی معنی کیا ہیں؟

- 1 - برداشت کرنا 2- رک جانا 3- صبر کرنا 4- انتظار کرنا

3: اللہ تعالیٰ نے کس عبادت کو ہر الہامی مذہب میں فرض قرار دیا ہے؟

- 1- صدقہ و خیرات 2- حج 3- زکوٰۃ 4- روزہ

4: اللہ تعالیٰ نے کس مہینے میں قرآن مجید نازل کیا؟

- 1 - محرم میں 2- ربیع الاول میں 3- رمضان میں 4- رجب میں

5: لیلۃ القدر میں عبادت کا ثواب کتنے مہینے کی عبادت سے بھی زیادہ ہے؟

- 1- ایک سو 2- ایک ہزار 3- پانچ ہزار 4- دس ہزار

سیلیبس چھٹا ہفتہ

عزیز طلبہ اس ہفتے کا کام آپ کو دی گئی ہدایات کے مطابق مکمل کرنا ہے۔

| سرگرمی | گھر کا کام | صفحہ نمبر | عنوان | تاریخ |
|--|--|-----------|-----------------------------|------------------|
| اخوت کے موضوع پر ایک تقریری نوٹ لکھیں۔ | بلند خوانی | 27 | سیرت طیبہ ﷺ :1 مواخات | 6 جولائی 2020 |
| | بلند خوانی مشق:3 خالی جگہ پر کریں۔ مشق:4 کالم الف کو کالم ب سے ملائیں۔ | 28 | سیرت طیبہ ﷺ :1 مواخات | 7 جولائی 2020 |
| | مشق:1 سوالات کے جوابات الف، ب، ج، د، ہ، مشق:2 درست جواب کا انتخاب کریں۔ | 29 | سیرت طیبہ ﷺ :1 مواخات | 8 جولائی 2020 |

ورک شیٹ نمبر 6

جماعت پنجم

سوال: سیرت طیبہ ﷺ پر نوٹ لکھیں۔

سیرت طیبہ ﷺ

سیلیبس ساتواں ہفتہ

عزیز طلبہ اس ہفتے کا کام آپ کو دی گئی ہدایات کے مطابق مکمل کرنا ہے۔

| سرگرمی | گھر کا کام | عنوان | تاریخ |
|--|--|---|----------------|
| مسجد نبوی کا تاریخی ارتقاء رنگوں کے ذریعے واضح کریں۔ | بلند خوانی | سیرت طیبہ ﷺ 2: مسجد نبوی ﷺ کی تعمیر | 13 جولائی 2020 |
| | مشق: 1 سوالات کے جوابات الف تا ہ | سیرت طیبہ ﷺ 2: مسجد نبوی ﷺ کی تعمیر | 14 جولائی 2020 |
| | مشق: 2 درست جواب کا انتخاب کریں | سیرت طیبہ ﷺ 2: مسجد نبوی ﷺ کی تعمیر | 15 جولائی 2020 |

ورک شیٹ نمبر 7

جماعت پنجم

سوال: خالی جگہ پر کریں۔

- 1: مسجد نبویؐ کی تعمیر میں کچی ----- کا استعمال کیا گیا۔
- 2: مسجد کے ساتھ ----- کے لئے حجرے بنائے گئے۔
- 3: مسجد نبویؐ کے شمال مشرقی حصہ میں ایک ----- تعمیر کیا گیا۔
- 4: آپؐ نے فرمایا کہ اونٹنی ----- کی طرف سے معمور ہے، اس کی راہ چھوڑ دو۔
- 5: مسجد نبویؐ میں نماز ادا کرنے کا ثواب ----- گنا ہے۔

سوال: درست جملوں کا انتخاب کریں۔

- 1: ہجرت مدینہ کے موقع پر جب آپؐ مدینہ منورہ میں داخل ہوئے تو ایک گھوڑے پر سوار تھے۔
- 2: مسجد نبویؐ کی عمارت نہایت سادہ تھی۔
- 3: مسجد حرام میں نماز پڑھنے کا ثواب ایک لاکھ گنا تک ہے۔
- 4: محلہ کی مسج میں نماز پڑھنے کا ثواب پا

| | |
|-----|--|
| در | |
| ست | |
| غلط | |
| | |
| | |
| | |

اردو سیلیبس برائے پنجم

| تاریخ | عنوان | صفحہ نمبر | گھر کا کام | ذرائع | سرگرمی |
|---------------|-----------------------|-----------|--|-------------------------|---|
| 1 جون 2020 | حمد باری تعالیٰ | 1 | بلند خوانی، مشکل الفاظ کی املا، | کتابی مواد ، ورک شیٹ | حمد کے پہلے دو بندوں کی تصویری منظر کشی کریں۔ |
| جون 2 2020 | حمد باری تعالیٰ قواعد | 2 تا 3 | مشکل الفاظ کے معنی (صدا، شمس، قمر، شجر، حجر، لائق ثنا، گن۔) متشابه الفاظ 6س کے درست استعمال سے خالی جگہیں پر کریں۔ | | |
| جون 3 2020 | حمد باری تعالیٰ | 2 تا 3 | مشقی سوالات پہلے بند کی تشریح شاعر کے حوالے کے ساتھ کیجیے۔ | | |

1 ورک شیٹ نمبر

جماعت: پنجم

اسم صفت

وہ لفظ جو کسی بھی اسم کی اچھائی یا برائی کو ظاہر کرے، اسم صفت کہلاتا ہے۔

مثلاً نیک لڑکا، پرانی گاڑی،

اس میں نیک اور پرانی اسم صفت ہیں۔

اسم موصوف:

جس اسم کی اچھائی یا برائی بیان کی جاتی ہے، اسے اسم موصوف کہتے ہیں۔

مثلاً نیک لڑکا، پرانی گاڑی،

اس میں لڑکا اور گاڑی اسم موصوف ہیں۔

سوال: جملوں میں سے صفت اور موصوف کو پہچان کر سامنے لکھیے۔

| نمبر شمار | جملے | صفت | موصوف |
|--------------|---------------------------|-----|-------|
| ۱۔ | فاطمہ کے پاس نئی گڑیا ہے۔ | | |
| ۲۔ | امی گرم چائے پیتی ہیں۔ | | |
| ۳۔ | یہ کتنا پیارا پھول ہے۔ | | |
| ۴۔ | یہ کپڑا بہت نرم ہے۔ | | |
| ۵۔ | لوہا بہت سخت دھات ہے۔ | | |
| 6 | لومڑی چالاک جانور ہے۔ | | |

صفت کی اقسام

- ۱۔ صفت ذاتی: وہ اسم ہے جس میں کسی چیز یا شخص کی ذاتی خوبی یا خامی بیان کی گئی ہو۔ مثلاً سرد موسم، خوبصورت شہر، موٹا آدمی۔
- ۲۔ صفت نسبتی: وہ اسم ہے جو کسی دوسرے اسم کے ساتھ نسبت یا تعلق کو ظاہر کرے۔ مثلاً عربی گھوڑا، امریکی کھاد۔
- ۳۔ صفت عددی: وہ اسم ہے جس میں کسی اسم کی تعداد یا گنتی بتائی گئی ہو۔ مثلاً پندرہ سیب، درجن انڈے۔
- ۴۔ صفت مقداری: وہ اسم ہے جس میں کسی اسم کی مقدار بتائی گئی ہو۔ مثلاً کچھ کھانا، چندا دوایات۔

سوال: صفت کی ہر قسم کے لیے مزید تین تین مثالیں سوچ کر لکھیے۔

| صفت ذاتی | صفت نسبتی | صفت عددی | صفت مقداری |
|----------|-----------|----------|------------|
| | | | |
| | | | |
| | | | |

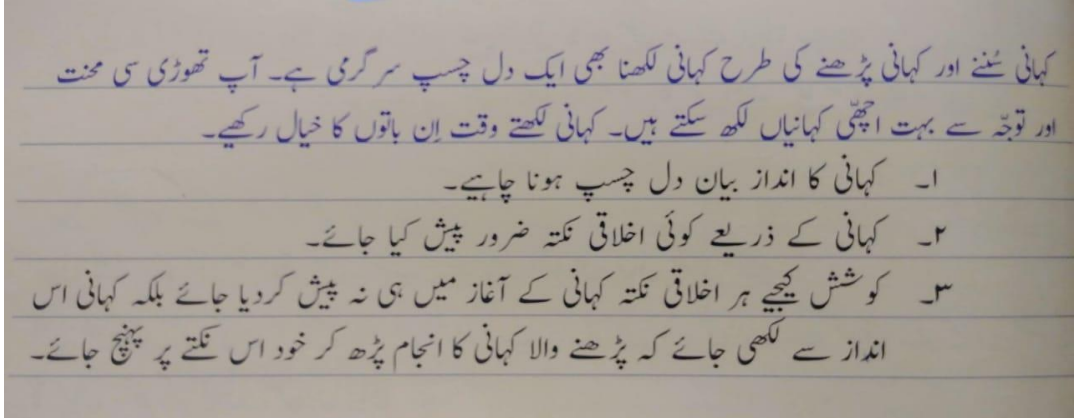
سیلیبس دوسرا ہفتہ

آپ کو دی گئی ہدایات

| تاریخ | عنوان | صفحہ نمبر | گھر کا کام | ذرائع | سرگرمی |
|-------------------|---|--------------|---|----------------------------------|--|
| 2020 جون 8 | محبت اور شفقت کے پیکر ﷺ | 5 تا 6 | بلند خوانی، مشکل الفاظ کی املا، | کتابی مواد، ور ک شیٹ | اردو اخبار کے تراشے چارٹ پر چسپاں کریں۔ |
| 2020 جون 9 | محبت اور شفقت کے پیکر ﷺ قواعد و انشا | 7 | مشکل الفاظ کے معانی (پیکر، غزوہ اور دوزخ) دوست کے نام والدہ کی تعزیت کا خط | | |
| 10 جون 2020 | محبت اور شفقت کے پیکر ﷺ قواعد | 7 تا 9 | مشقی سوالات۔ 5،4 واحد/جمع اور الفاظ/متضاد س | | |

جماعت: پنجم

کہانی نویسی



اشاراتی کہانی:

اس طریقے میں کہانی کا خاکہ اور اشارات دیئے جاتے ہیں۔ جن کی مدد سے کہانی مکمل کی جاتی ہے۔

س: ان اشارات کی مدد سے کہانی لکھیے۔

عمر اور دانش دو دوست..... ایک ساتھ سکول جانا..... راستے میں امرودوں کا باغ..... ایک دن باغ کے مالی کا نظر نہ آنا..... دونوں کا امرودوں کے درخت پر چڑھ جانا..... مالی کے کتے کا بھونکنا..... مالی کا ٹنڈا لے کر آنا..... والدین سے ڈانٹ پڑنا.....

برے کام کا برا انجام۔

جماعت: پنجم

آپ کو دی گئی ہدایات

| تاریخ | عنوان | صفحہ نمبر | گھر کا کام | ذرائع | سرگرمی |
|-------------|---------------------------|-----------|---|-------------------------|--|
| 15 جون 2020 | ایمان دار چرواہا | 10 تا 11 | بلند خوانی، مشکل الفاظ کی املا، | کتابی مواد ، ورک شیٹ | کوئی ایسا واقعہ لکھیے جب آپ نے ایمان داری سے کام لیا ہو۔ |
| 16 جون 2020 | ایمان دار چرواہا | 12 | مشقی سوالات | | |
| 17 جون 2020 | ایمان دار چرواہا قواعد | 13 تا 14 | مشکل الفاظ کے معنی (قیامت خیز گرمی، ہنکانا، جھٹ) دیئے گئے الفاظ کو جملوں میں استعمال کریں (سستانا، دسترخوان، قیامت خیز، اجرت، ایمان داری) 4 جملوں سے صفت اور 4 موصوف الگ کر کے لکھیے۔ | | |

جماعت: پنجم

تحریری تفہیم

چند خاص باتیں



- عمارت کی تفہیم کے لئے عمارت کو ایک سے زیادہ مرتبہ پڑھیے۔
- مشکل جملوں کو بار بار پڑھیے تاکہ ان کا مفہوم اچھی طرح سمجھ میں آجائے۔
- سوالات اور ہدایات کو سمجھنے کے لئے انہیں ایک سے زیادہ مرتبہ پڑھیے۔
- عمارت پڑھتے ہوئے عمارت کے اہم الفاظ اور جملوں کو خطا کشیدہ کر لیجئے۔ بہتر ہے ذہن میں آنے والے کلمات کو عمارت کے ارد گرد دکھایا جائے۔
- سوالات کے جوابات اپنے الفاظ میں لکھئے۔ سوائے اس کے کہ سوال کے جواب میں عمارت کا کوئی خاص حصہ لکھنا ضروری ہو۔
- اپنے ذہن میں عمارت کا نمونہ بنا لیجئے۔ جس کی وجہ سے مفہوم کو سمجھنے اور سوالات کے جوابات دینے میں آسانی رہے گی۔
- اگر عمارت مشکل ہو تو پڑھنا نہ ہوں بلکہ اپنی سہ ماہیہ معلوماً، عمارت کے جملوں، الفاظ اور انداز سے اسے سمجھنے اور سوالات کے جوابات دینے کی کوشش کیجئے۔
- یاد رکھیے! مشکل سے مشکل عمارت میں بھی ایسے بہت سے الفاظ اور جملے ہوتے ہیں جو پوری عمارت سمجھنے میں پڑھنے والے کی مدد کرتے ہیں۔
- اپنے لکھے ہوئے جواب کو ازم و دوغندہ ضرور پڑھ لیجئے۔ اپنا لکھا ہوا جواب پڑھنے سے پہلے سوال ضرور پڑھ لیجئے۔
- تمام سوالات کے جوابات ان کے نمبروں کے مطابق لکھئے۔
- روزانہ مطالعہ کو اپنی عادت بنا لیجئے۔

کسی بھی عمارت کی تفہیم کے پانچ اصول


اگر آپ کے لئے عمارت میں کوئی بھی لفظ مشکل نہیں تو بہت اچھی بات ہے۔ اگر کچھ لفظ مشکل ہیں تو ان الفاظ اور جملوں کو خطا کشیدہ کر لیجئے۔



مشکل الفاظ کو نظر انداز کر کے اس عمارت کا مفہوم سمجھنے کی کوشش کیجئے۔



تفہیم کے لئے دی گئی عمارت میں کچھ الفاظ ایسے ہوتے ہیں جو ایک سے زیادہ معانی رکھتے ہیں اور سوال کا جواب دینے کے لئے ان الفاظ کے معانی کا پتا ہونا بھی ضروری ہوتا ہے۔ چنانچہ ان الفاظ کا مطلب ان کے بنیادی معانی میں سمجھنے کی کوشش کرتے ہیں۔



بعض اوقات دی گئی عمارت میں کچھ ایسے جملات استعمال کئے گئے ہوتے ہیں جن کے مطلب سے ہم واقف نہیں ہوتے لیکن پوری عمارت کے مفہوم کو سمجھنے کے لئے ان جملات کو سمجھنا ضروری ہوتا ہے۔ ایسے مواقع پر ان جملات کا مفہوم عمارت یا متن کے عمومی مفہوم، ارد گرد کے جملوں یا الفاظ کی مدد سے سمجھنے کی کوشش کرتے ہیں۔



بعض مشکل الفاظ میں ایک آسان لفظ چھپا ہوتا ہے۔ اگر اسے تلاش کر لیا جائے تو اس مشکل لفظ کا مطلب بھی سمجھ میں آجاتا ہے۔



عبارت

شہد کی کھیاں پھولوں کا رس جمع کرتی ہیں، جب رس جمع ہو جاتا ہے تو اسکے بعد شہد بنانے کا عمل شروع ہوتا ہے۔

شہد پہلے پانی کی طرح ہوتا ہے۔ شہد تیار کرنے والی کھیاں اپنے بیروں کو پچھے کی طرح استعمال کر کے فالتو پانی یا بھاپ کی طرح اڑا دیتی ہیں۔ پانی کے اڑ جانے کے بعد ایک ٹیٹھا گاڑھا رس باقی رہ جاتا ہے جس کو کھیاں چوس لیتی ہیں۔ کھیاں کے منہ میں ایسے غرور ہوتے ہیں جو اپنے عمل سے اس رس کو شہد میں تبدیل کر دیتے ہیں، اب کھیاں اس شہد کو چھتے کے سوراخوں میں بھر دیتی ہیں، یہ سوراخ خاص طور پر اس طرح بنے ہوتے ہیں جن میں شہد محفوظ رہے۔

اللہ تعالیٰ یہ بھی کر سکتے تھے کہ چادو سے شہد پیدا ہو جاتا یا شہد کی نہر بنا دیتے مگر اللہ نے ایسا نہیں کیا، شہد کی کھی جس طرح شہد بناتی ہے وہ بہترین منصوبے اور قلم و ضبط کا نمونہ ہے۔

س: عبارت پڑھ کر سوالوں کے جواب لکھیے۔

1: شہد بنانے کا عمل کب شروع ہوتا ہے؟

2: مکھیاں فالتو پانی کس طرح ختم کرتی ہیں؟

: مکھیاں رس کو شہد میں کس طرح تبدیل کرتی ہیں؟ 3

: شہد کی مکھی جس طرح شہد بناتی ہے اس سے ہمیں کیا سبق ملتا ہے؟ 4

سیلیبس چوتھا ہفتہ

آپ کو دی گئی ہدایات

| سرگرمی | ذرائع | گھر کا کام | صفحہ نمبر | عنوان | تاریخ |
|---------------------------------|---------------------|---|-----------|-----------|-------------|
| غصے کے نقصانات کی فہرست بنائیں۔ | کتابی مواد، ورک شیٹ | بلند خوانی، مشکل الفاظ کی املا، | 20 تا 21 | غصہ | 22 جون 2020 |
| | | مشکل الفاظ کے معانی۔ (دل پٹھر بن جانا، بس نا چلنا، کچا کھا جانا، بیپھرنا، دم بھر میں، طغیانی، جیون، الٹ پلٹ، قربت، میل، منصف) | 22 | غصہ | 23 جون 2020 |
| | | جملہ سازی (دل پٹھر ہو جانا، کچا کھا جانا، الٹ پلٹ، میل، منصف) | 23 | غصہ قواعد | 24 جون 2020 |

جماعت: پنجم

مضمون نگاری

کھینچنے والی بات / مضمون نگاری کو ہر زبان میں بہت زیادہ اہمیت حاصل ہے۔ اگر مضمون لکھنے میں مہارت حاصل ہو تو کہیں بھی، کسی بھی موضوع پر اور کسی بھی مضمون کی صورت میں اچھی تحریر ہو جو دیکھ لائی جاسکتی ہے۔

مضمون لکھنے کے مراحل

- ۱ موضوع کا انتخاب
- ۲ موضوع کے بارے میں سوچنا
- ۳ موضوع کے مطابق خیالات کا خاکہ بنانا
- ۴ خیالات کے خاکے کو ترتیب دینا
- ۵ خاکے کے مطابق مضمون لکھنا
- ۶ لکھے ہوئے مضمون کو کم از کم ایک دفعہ پڑھنا
- ۷ مضمون کی اصلاح کر کے اسے حتمی صورت دینا

س: اوپر دیئے گئے نکات کو مد نظر رکھتے ہوئے " تفریحی مقام کی سیر " کے عنوان پر مضمون لکھیے

سیلیبس پانچواں ہف

کام آپ کو دی گئی ہدایات کے

| تاریخ | عنوان | صفحہ نمبر | گھر کا کام | ذرائع | سرگرمی |
|---------------|-------------------------------|-----------|--|----------------------|---|
| 29 جون 2020 | نوجوان سپہ سالار | 26 تا 28 | بلند خوانی، مشکل الفاظ کی املا، | کتابی مواد ، ورک شیٹ | محمد بن قاسم کے متعلق معلومات اکٹھی کر کے ایک چارٹ پر تحریر کریں۔ |
| جون 30 2020 | نوجوان سپہ سالار قواعد و انشا | 29 | مشکل الفاظ کے معانی (بحری، ناز، فصیل، عبور کرنا، سرے، بگولا، روندنا ، حسن سلوک) " احسان کا بدلہ احسان " نتیجے کو مد نظر رکھتے ہوئے کہانی تحریر کریں۔ | | |
| جولائی 1 2020 | نوجوان سپہ سالار قواعد | 29 تا 30 | مشقی سوالات اسم نسبتی بنائے (بحر، قید ، مغرب، مشرق، خشک ، جنگ، دریا، اسلام) | | |

جماعت: پنجم؟

| مفعول | فائل | فعل | جملے |
|-------|------|-----|---------------------------|
| | | | 1. کسان بل چلا رہا ہے۔ |
| | | | 2. لڑکے نے گلاس توڑ دیا۔ |
| | | | 3. ندا نے کتاب لکھی۔ |
| | | | 4. احمد پتنگ اڑتا ہے۔ |
| | | | 5. بطخ پانی میں تیرتی ہے۔ |
| | | | 6. کومل نے گیت گایا۔ |
| | | | 7. دھوبی نے کپڑے دھوئے۔ |
| | | | 8. احمد نے سائیکل چلائی۔ |
| | | | 9. کھلاڑی نے چھکا مارا۔ |
| | | | 10. خالد بہت تیز دوڑا۔ |

سیلیبس چھٹا ہفتہ

جماعت: پنجم

کام آپ کو دی گئی ہدایات کے

| تاریخ | عنوان | صفحہ نمبر | گھر کا کام | ذرائع | سرگرمی |
|---------------|----------------------------|-----------|---|--------------|--|
| 2020 جولائی 6 | خاموش محسن | 32 تا 33 | بلند خوانی، مشکل الفاظ کی املا، | کتابی مواد ، | سبق خاموش محسن کو آپ بیٹی کے انداز میں تحریر کریں۔ |
| 2020 جولائی 7 | خاموش محسن قواعد و انشا | 34 | مشکل الفاظ کے معانی (پالنا پوسنا، گزر بسر کرنا، ماہی گیری، کوئی کسر باقی نہ اٹھا رکھنا، صراحی، محسن) مضمون نگاری: وقت کی پابندی | ورک شیٹ | |
| 2020 جولائی 8 | خاموش محسن قواعد | 34 تا 35 | درست جواب 2س چن کر خالی جگہ پُر کریں۔ مذکر اور مؤنث 3س الگ الگ خاتوں میں لکھیں۔ | | |

اچھے دوست کی خوبیاں تحریر کری

سیلیبس ساتواں ہفتہ

| تاریخ | عنوان | صفحہ نمبر | گھر کا کام | ذرائع | سرگرمی |
|----------------|--------------|-----------|--|---------------------|--|
| 2020 جولائی 13 | قواعد | ---- | ان الفاظ کے متضاد لکھیں (امن، آمدنی، باطل، جدید، دوست، تکلیف، جوانی، شریر) ان الفاظ کے مترادف لکھیں (شرمندہ، ڈر، دانا، پیڑ، تاریکی، اکبر، اصغر، واحد) | کتابی مواد، ورک شیٹ | اپنے پسندیدہ ٹی وی پروگرام کے بارے میں بتائیں۔ |
| جولائی 14 2020 | قواعد و انشا | ---- | ماموں کے نام تحفے کے شکریہ کا خطورک شیٹ (مثبت منفی اور سوالیہ جملے) | | |
| جولائی 15 2020 | قواعد و انشا | ---- | مضمون نگاری: میری پسندیدہ شخصیت در خواست برائے کمپیوٹر لیب فراہمی | | |

